



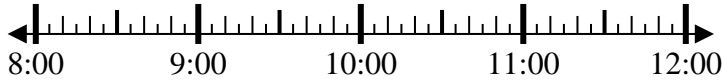
Solve each problem.

Answers

1) Start: _____

Elapsed: 1 hr & 45 mins

End: 10:15

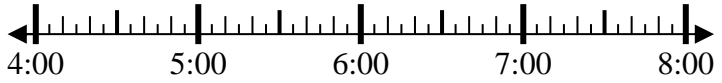


1. _____

2) Start: _____

Elapsed: 1 hr & 35 mins

End: 5:40

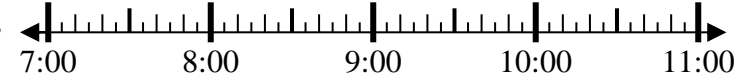


2. _____

3) Start: _____

Elapsed: 2 hrs & 30 mins

End: 10:00



3. _____

4) Start: _____

Elapsed: 1 hr & 35 mins

End: 2:50



4. _____

5) Start: _____

Elapsed: 1 hr & 15 mins

End: 7:10

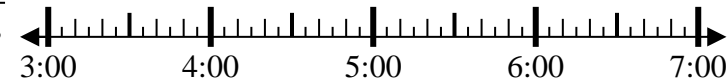


5. _____

6) Start: _____

Elapsed: 2 hrs & 20 mins

End: 6:10

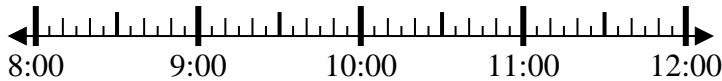


6. _____

7) Start: _____

Elapsed: 1 hr & 25 mins

End: 9:25



7. _____

8) Start: _____

Elapsed: 1 hr & 25 mins

End: 1:00

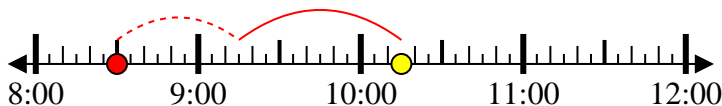


8. _____

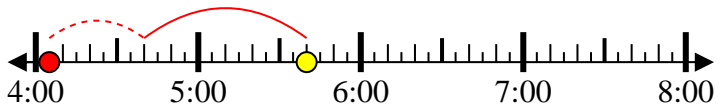


Solve each problem.

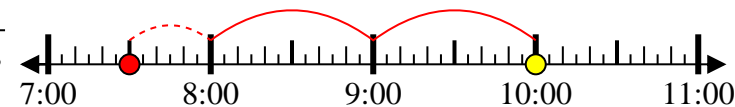
1) Start: 8:30
 Elapsed: 1 hr & 45 mins
 End: 10:15



2) Start: 4:05
 Elapsed: 1 hr & 35 mins
 End: 5:40



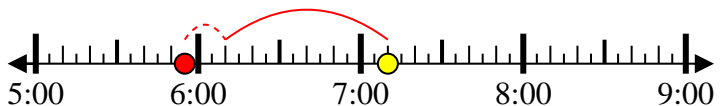
3) Start: 7:30
 Elapsed: 2 hrs & 30 mins
 End: 10:00



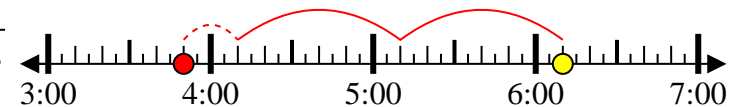
4) Start: 1:15
 Elapsed: 1 hr & 35 mins
 End: 2:50



5) Start: 5:55
 Elapsed: 1 hr & 15 mins
 End: 7:10



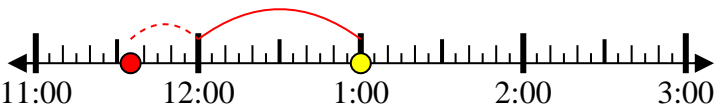
6) Start: 3:50
 Elapsed: 2 hrs & 20 mins
 End: 6:10



7) Start: 8:00
 Elapsed: 1 hr & 25 mins
 End: 9:25



8) Start: 11:35
 Elapsed: 1 hr & 25 mins
 End: 1:00



Answers

1. 8:30

2. 4:05

3. 7:30

4. 1:15

5. 5:55

6. 3:50

7. 8:00

8. 11:35