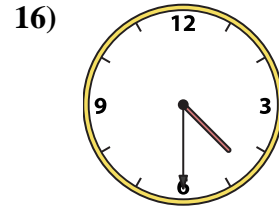
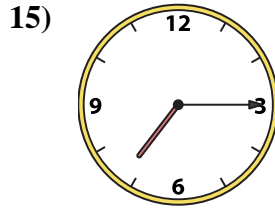
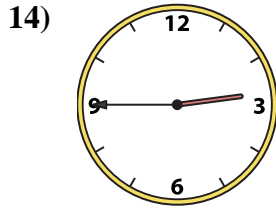
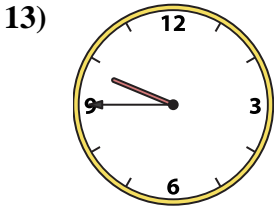
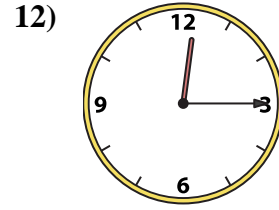
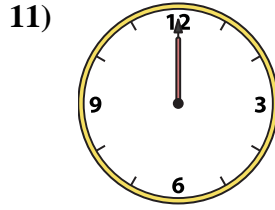
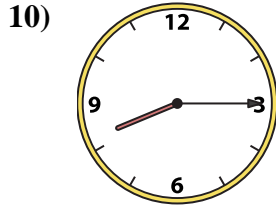
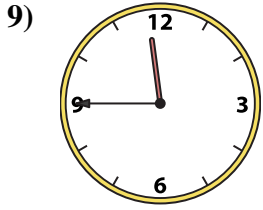
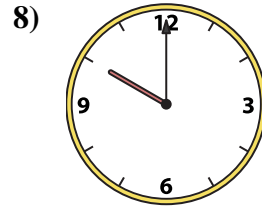
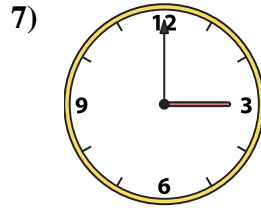
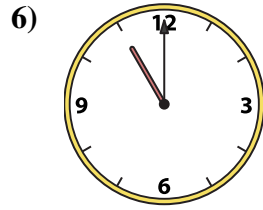
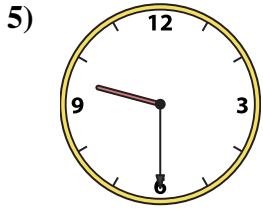
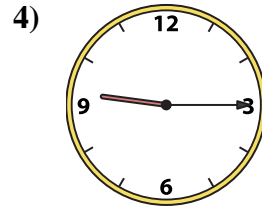
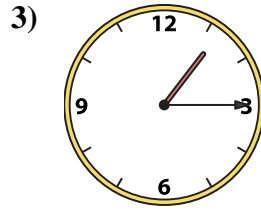
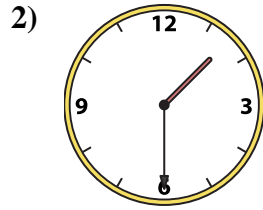
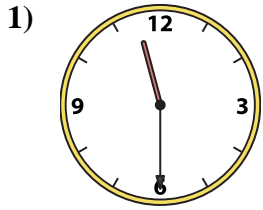




Match the analog clock to the digital clock.



A. 11:30

B. 3:00

C. 9:30

D. 1:30

E. 11:45

F. 9:45

G. 10:00

H. 12:00

I. 8:15

J. 1:15

K. 9:15

L. 11:00

M. 7:15

N. 2:45

O. 4:30

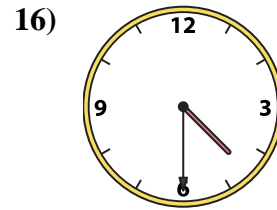
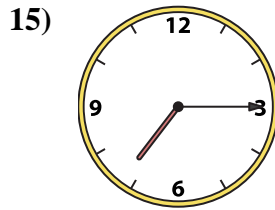
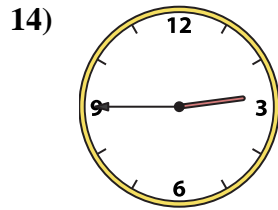
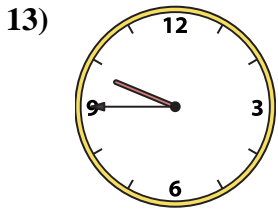
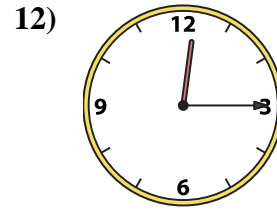
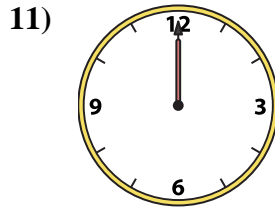
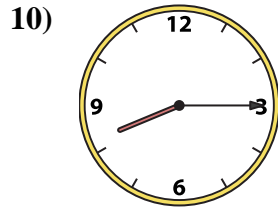
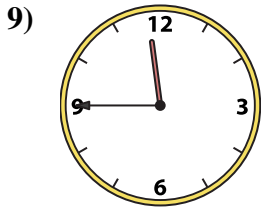
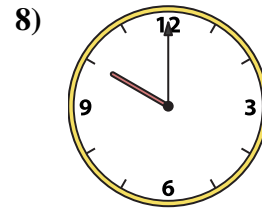
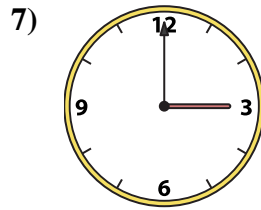
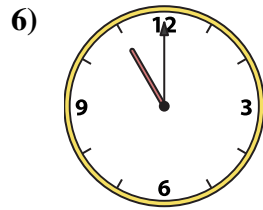
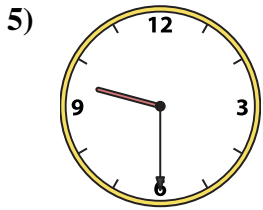
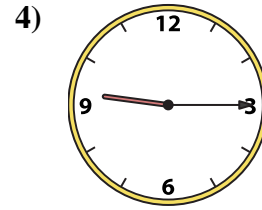
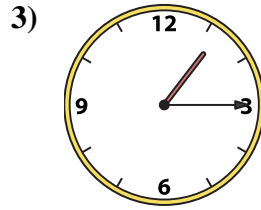
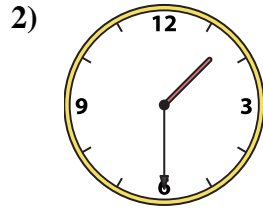
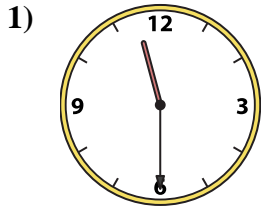
P. 12:15

Answers

1. _____
2. _____
3. _____
4. _____
5. _____
6. _____
7. _____
8. _____
9. _____
10. _____
11. _____
12. _____
13. _____
14. _____
15. _____
16. _____



Match the analog clock to the digital clock.



A. **11:30**

B. **3:00**

C. **9:30**

D. **1:30**

E. **11:45**

F. **9:45**

G. **10:00**

H. **12:00**

I. **8:15**

J. **1:15**

K. **9:15**

L. **11:00**

M. **7:15**

N. **2:45**

O. **4:30**

P. **12:15**

Answers

1. **A**

2. **D**

3. **J**

4. **K**

5. **C**

6. **L**

7. **B**

8. **G**

9. **E**

10. **I**

11. **H**

12. **P**

13. **F**

14. **N**

15. **M**

16. **O**