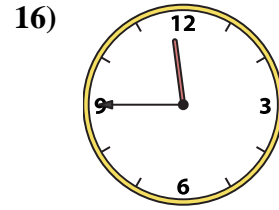
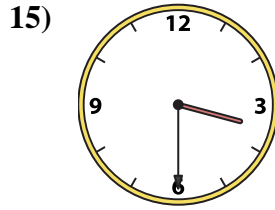
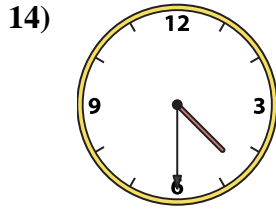
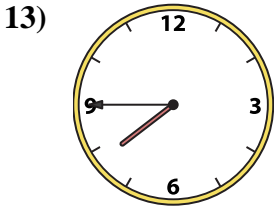
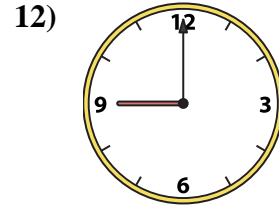
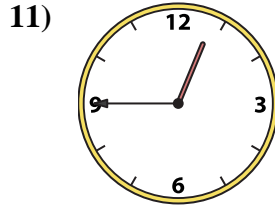
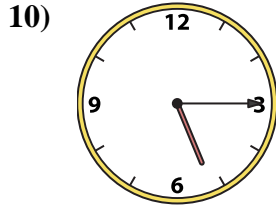
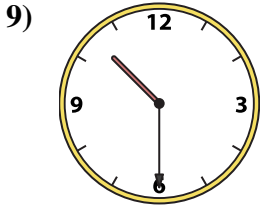
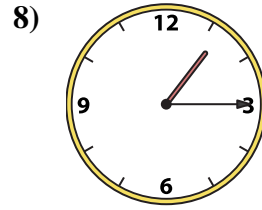
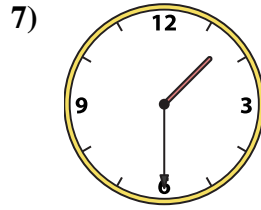
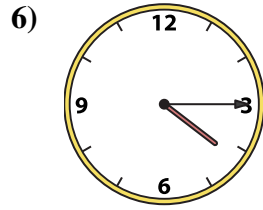
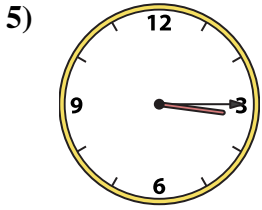
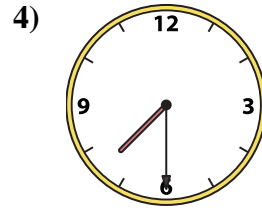
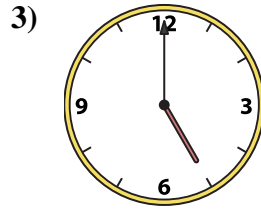
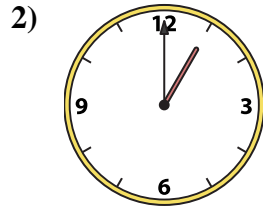
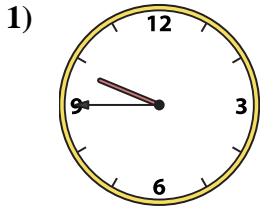




Match the analog clock to the digital clock.

**Answers**



A. 11:45

B. 10:30

C. 1:00

D. 7:45

E. 5:00

F. 4:30

G. 4:15

H. 5:15

I. 3:15

J. 3:30

K. 9:00

L. 7:30

M. 1:30

N. 9:45

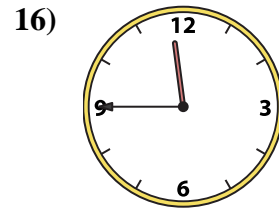
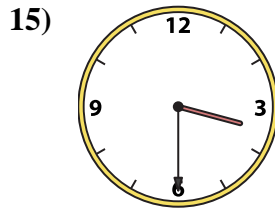
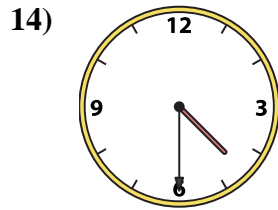
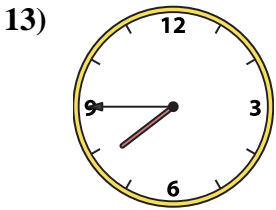
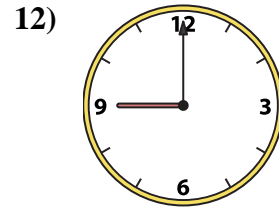
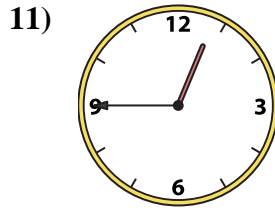
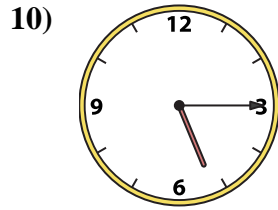
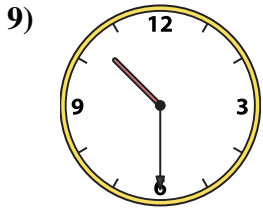
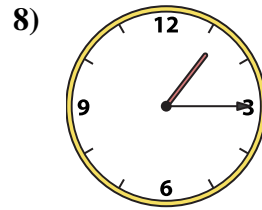
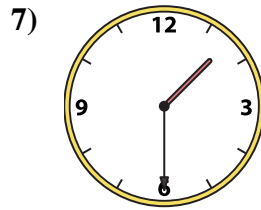
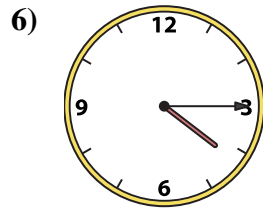
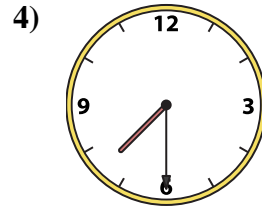
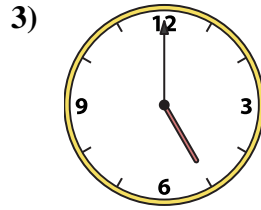
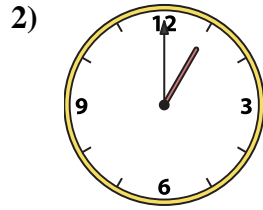
O. 1:15

P. 12:45

1. \_\_\_\_\_
2. \_\_\_\_\_
3. \_\_\_\_\_
4. \_\_\_\_\_
5. \_\_\_\_\_
6. \_\_\_\_\_
7. \_\_\_\_\_
8. \_\_\_\_\_
9. \_\_\_\_\_
10. \_\_\_\_\_
11. \_\_\_\_\_
12. \_\_\_\_\_
13. \_\_\_\_\_
14. \_\_\_\_\_
15. \_\_\_\_\_
16. \_\_\_\_\_



Match the analog clock to the digital clock.



A. 11:45

B. 10:30

C. 1:00

D. 7:45

E. 5:00

F. 4:30

G. 4:15

H. 5:15

I. 3:15

J. 3:30

K. 9:00

L. 7:30

M. 1:30

N. 9:45

O. 1:15

P. 12:45

**Answers**

1. **N**

2. **C**

3. **E**

4. **L**

5. **I**

6. **G**

7. **M**

8. **O**

9. **B**

10. **H**

11. **P**

12. **K**

13. **D**

14. **F**

15. **J**

16. **A**