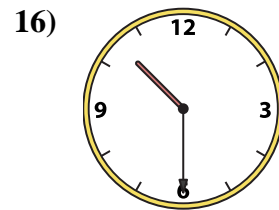
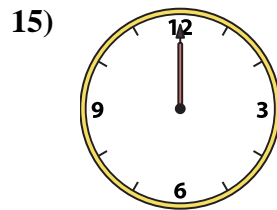
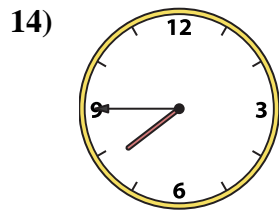
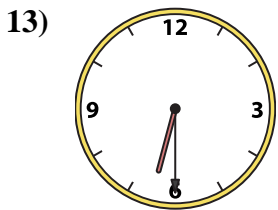
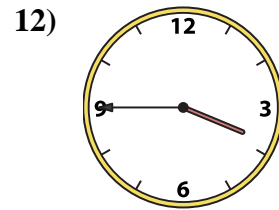
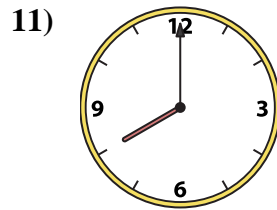
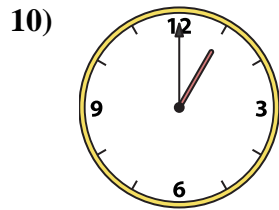
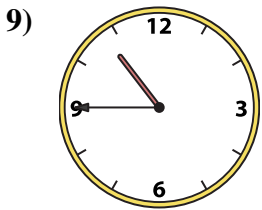
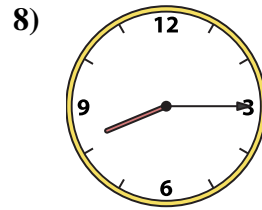
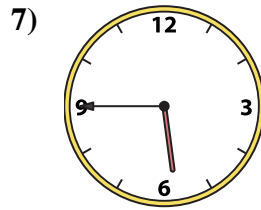
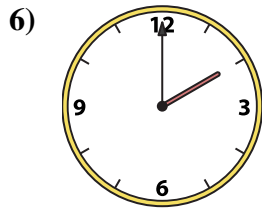
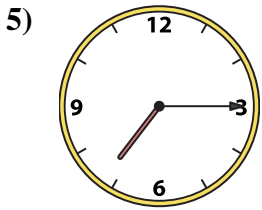
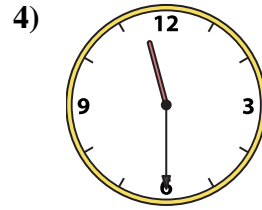
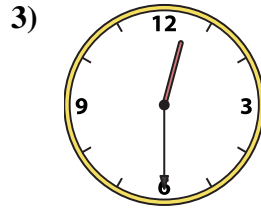
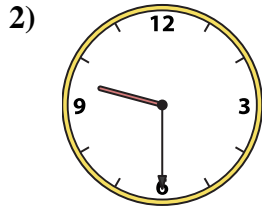
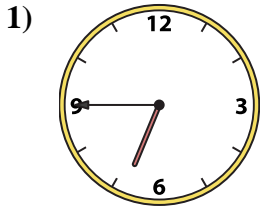




Match the analog clock to the digital clock.

**Answers**



A. 5:45

B. 7:45

C. 8:15

D. 12:00

E. 7:15

F. 12:30

G. 8:00

H. 11:30

I. 3:45

J. 10:30

K. 10:45

L. 9:30

M. 2:00

N. 6:45

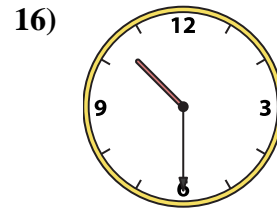
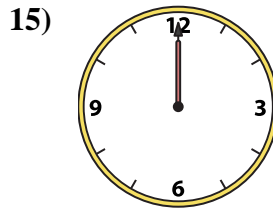
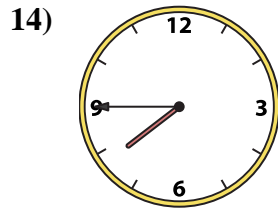
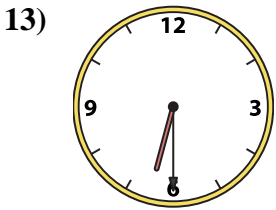
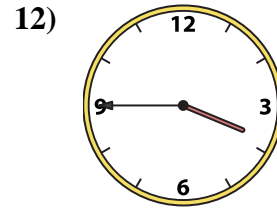
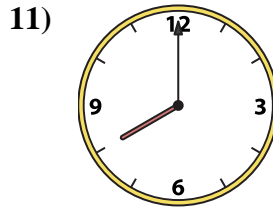
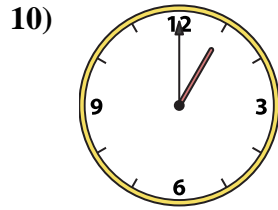
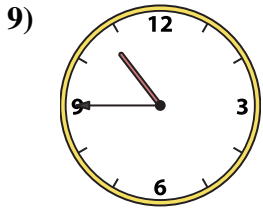
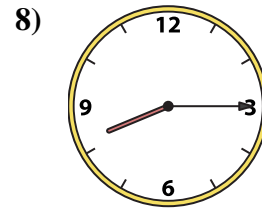
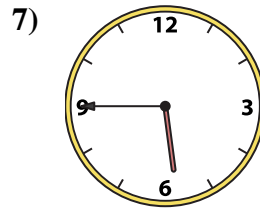
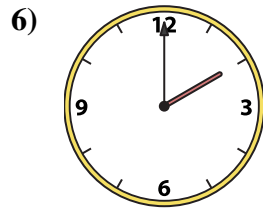
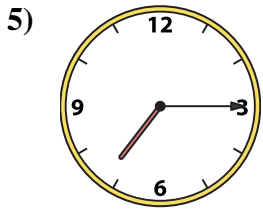
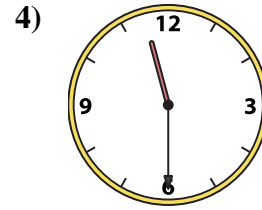
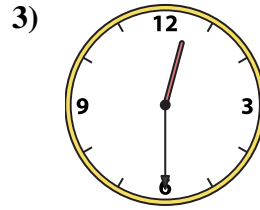
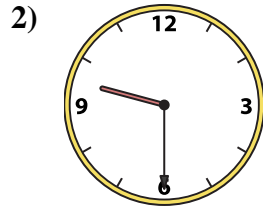
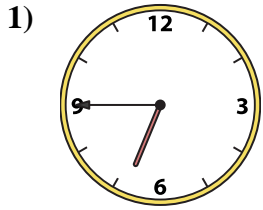
O. 6:30

P. 1:00

1. \_\_\_\_\_
2. \_\_\_\_\_
3. \_\_\_\_\_
4. \_\_\_\_\_
5. \_\_\_\_\_
6. \_\_\_\_\_
7. \_\_\_\_\_
8. \_\_\_\_\_
9. \_\_\_\_\_
10. \_\_\_\_\_
11. \_\_\_\_\_
12. \_\_\_\_\_
13. \_\_\_\_\_
14. \_\_\_\_\_
15. \_\_\_\_\_
16. \_\_\_\_\_



Match the analog clock to the digital clock.



A. 5:45

B. 7:45

C. 8:15

D. 12:00

E. 7:15

F. 12:30

G. 8:00

H. 11:30

I. 3:45

J. 10:30

K. 10:45

L. 9:30

M. 2:00

N. 6:45

O. 6:30

P. 1:00

**Answers**

1. **N**

2. **L**

3. **F**

4. **H**

5. **E**

6. **M**

7. **A**

8. **C**

9. **K**

10. **P**

11. **G**

12. **I**

13. **O**

14. **B**

15. **D**

16. **J**