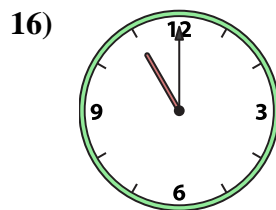
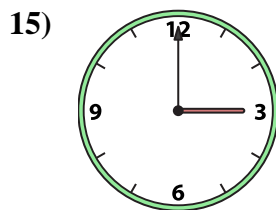
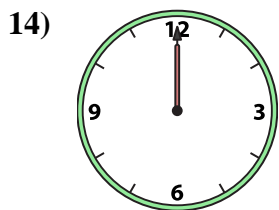
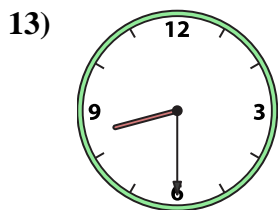
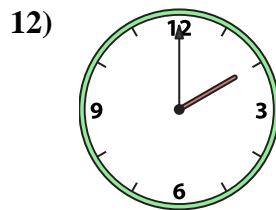
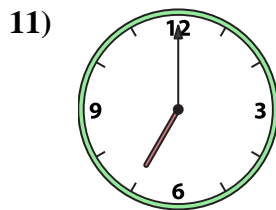
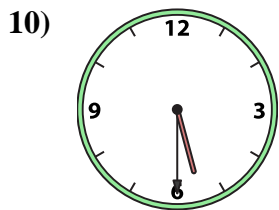
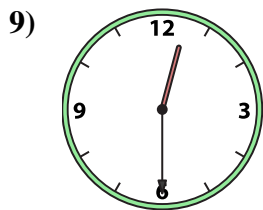
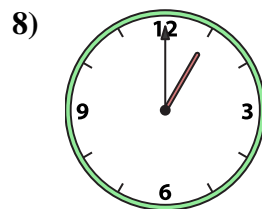
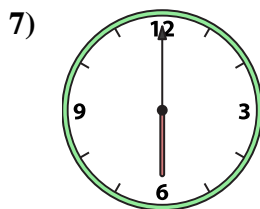
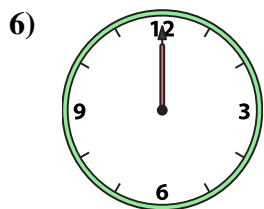
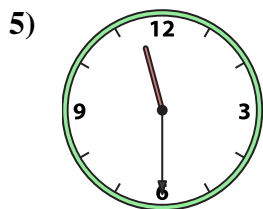
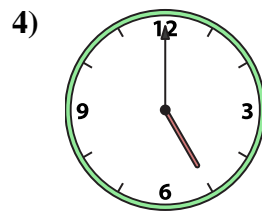
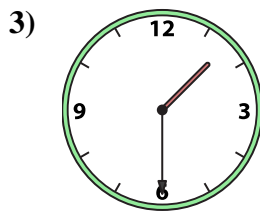
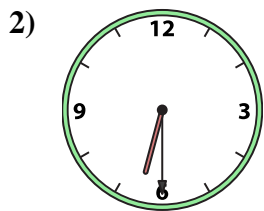
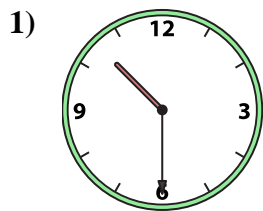




Match the analog clock to the digital clock.



A. 6:00

B. 1:30

C. 6:30

D. 12:00

E. 2:00

F. 12:30

G. 10:30

H. 1:00

I. 8:30

J. 5:30

K. 11:00

L. 5:00

M. 12:00

N. 7:00

O. 3:00

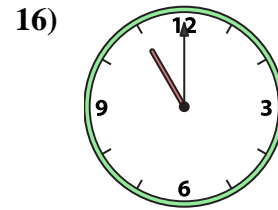
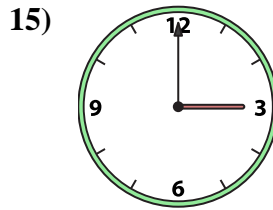
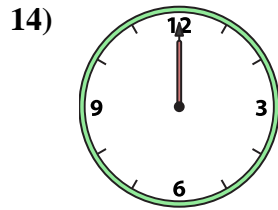
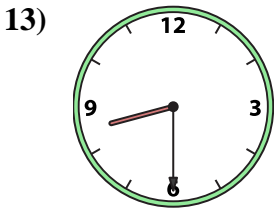
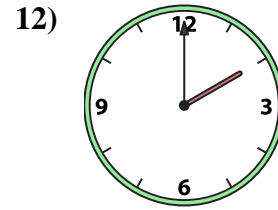
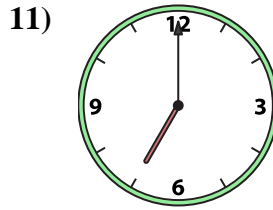
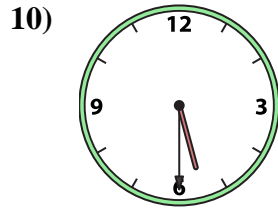
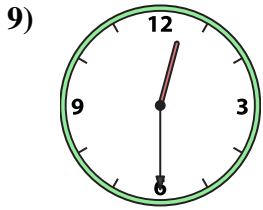
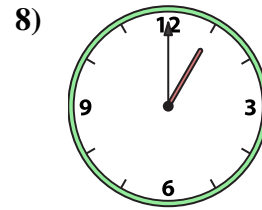
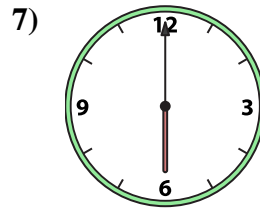
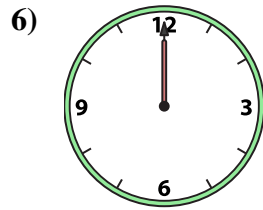
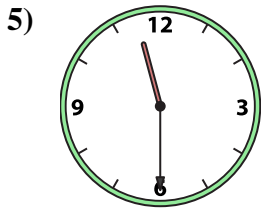
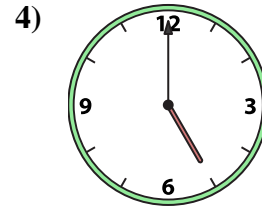
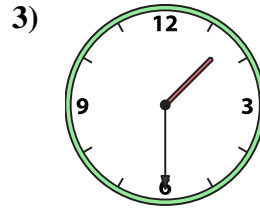
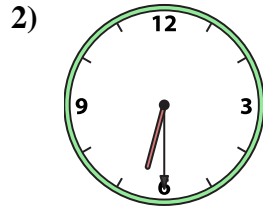
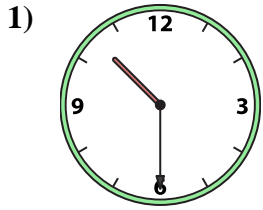
P. 11:30

Answers

1. _____
2. _____
3. _____
4. _____
5. _____
6. _____
7. _____
8. _____
9. _____
10. _____
11. _____
12. _____
13. _____
14. _____
15. _____
16. _____



Match the analog clock to the digital clock.



A. **6:00**

B. **1:30**

C. **6:30**

D. **12:00**

E. **2:00**

F. **12:30**

G. **10:30**

H. **1:00**

I. **8:30**

J. **5:30**

K. **11:00**

L. **5:00**

M. **12:00**

N. **7:00**

O. **3:00**

P. **11:30**

Answers

1. **G**

2. **C**

3. **B**

4. **L**

5. **P**

6. **D**

7. **A**

8. **H**

9. **F**

10. **J**

11. **N**

12. **E**

13. **I**

14. **M**

15. **O**

16. **K**