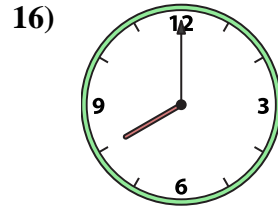
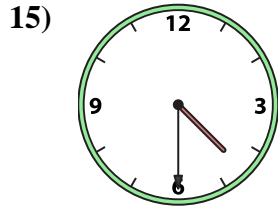
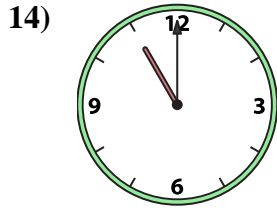
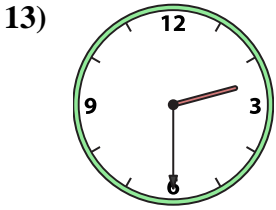
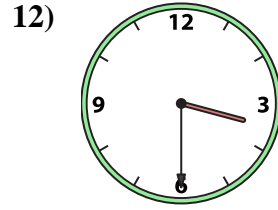
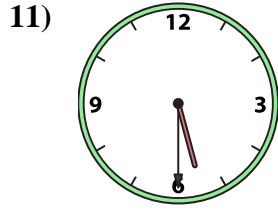
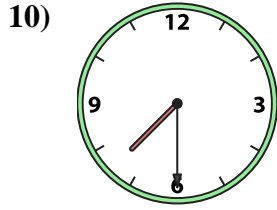
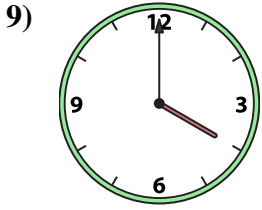
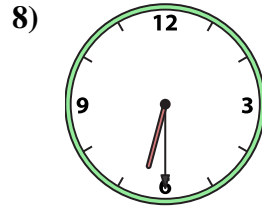
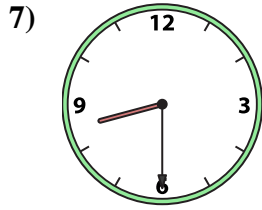
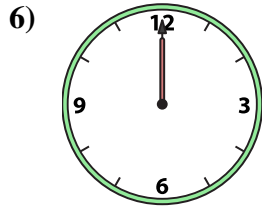
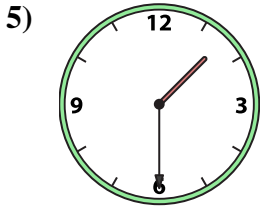
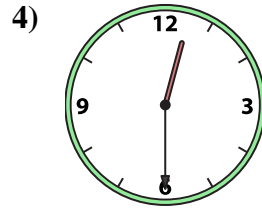
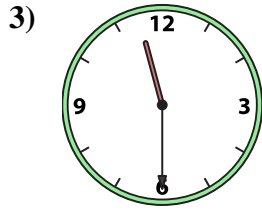
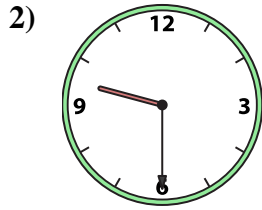





Match the analog clock to the digital clock.



A. 9:30

B. 5:30

C. 4:30

D. 11:30

E. 3:30

F. 1:30

G. 8:00

H. 1:00

I. 6:30

J. 8:30

K. 12:30

L. 12:00

M. 2:30

N. 11:00

O. 7:30

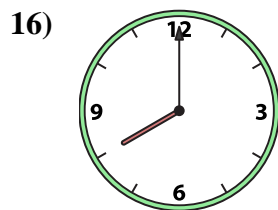
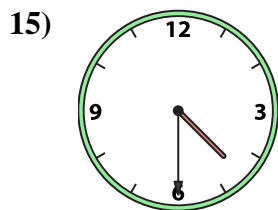
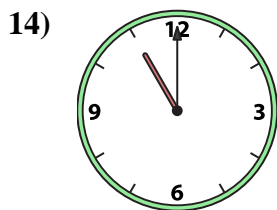
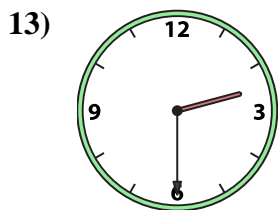
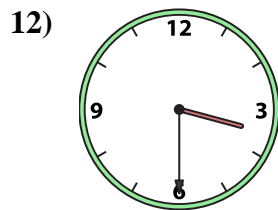
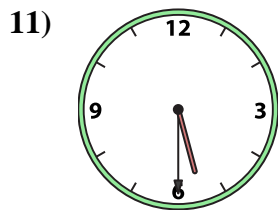
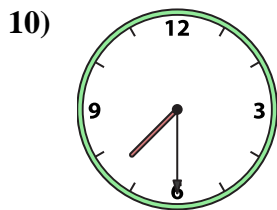
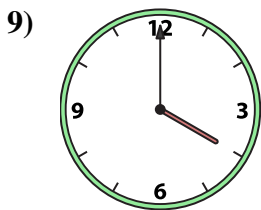
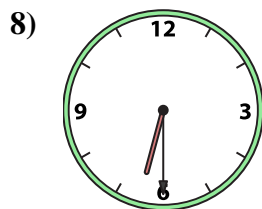
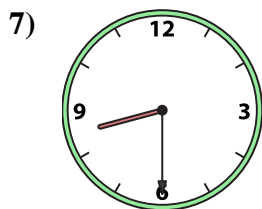
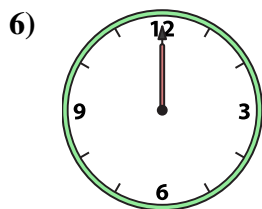
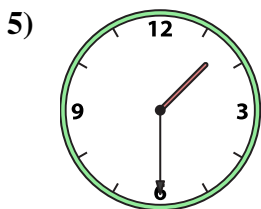
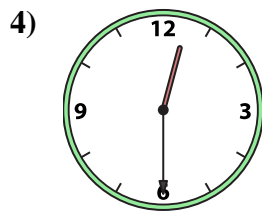
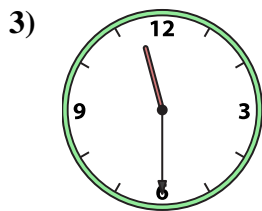
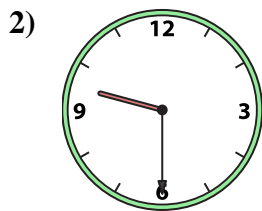

P. 4:00

Answers

1. _____
2. _____
3. _____
4. _____
5. _____
6. _____
7. _____
8. _____
9. _____
10. _____
11. _____
12. _____
13. _____
14. _____
15. _____
16. _____



Match the analog clock to the digital clock.



A. **9:30**

B. **5:30**

C. **4:30**

D. **11:30**

E. **3:30**

F. **1:30**

G. **8:00**

H. **1:00**

I. **6:30**

J. **8:30**

K. **12:30**

L. **12:00**

M. **2:30**

N. **11:00**

O. **7:30**

P. **4:00**

Answers

1. **H**

2. **A**

3. **D**

4. **K**

5. **F**

6. **L**

7. **J**

8. **I**

9. **P**

10. **O**

11. **B**

12. **E**

13. **M**

14. **N**

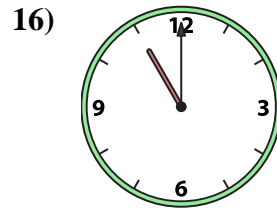
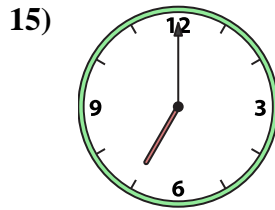
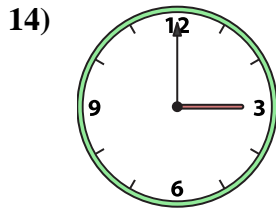
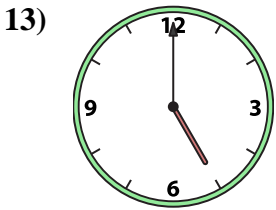
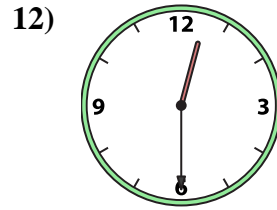
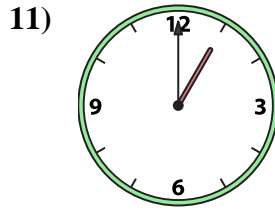
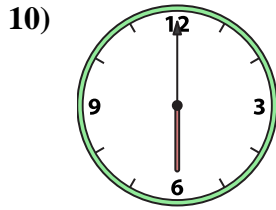
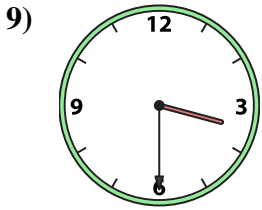
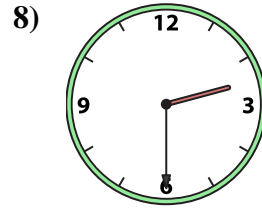
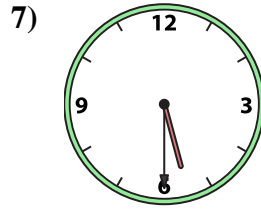
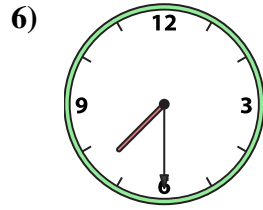
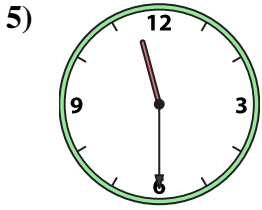
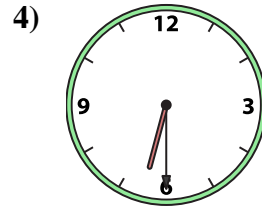
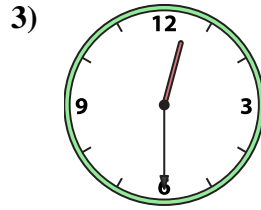
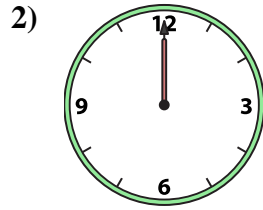
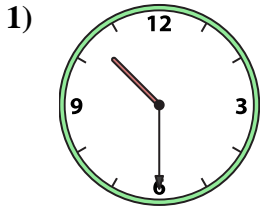
15. **C**

16. **G**



Match the analog clock to the digital clock.

Answers



A.

B.

C.

D.

E.

F.

G.

H.

I.

J.

K.

L.

M.

N.

O.

P.

1. _____

2. _____

3. _____

4. _____

5. _____

6. _____

7. _____

8. _____

9. _____

10. _____

11. _____

12. _____

13. _____

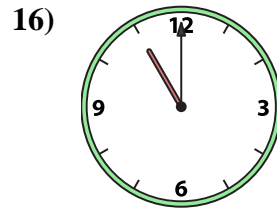
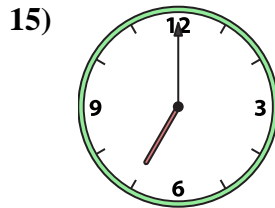
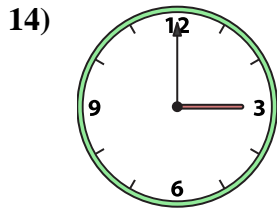
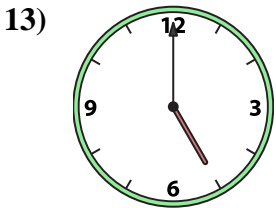
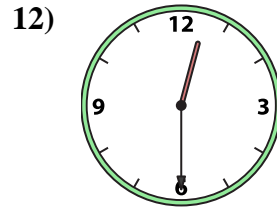
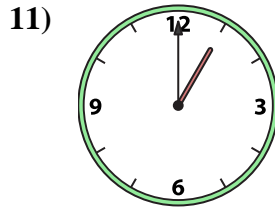
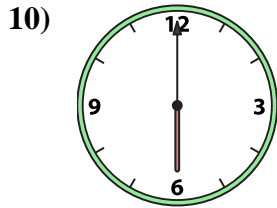
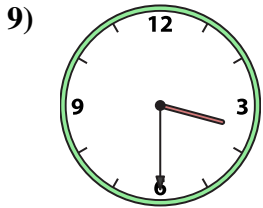
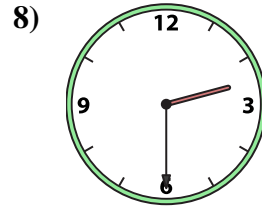
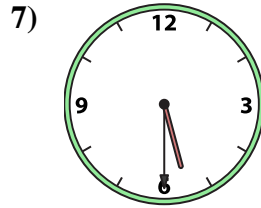
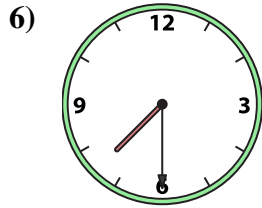
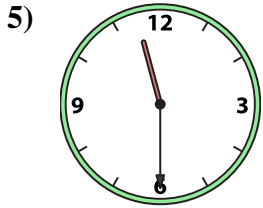
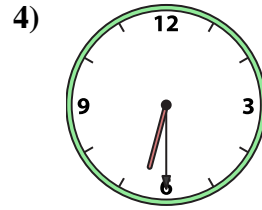
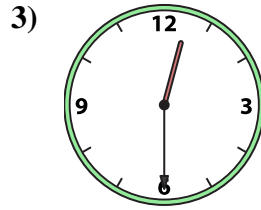
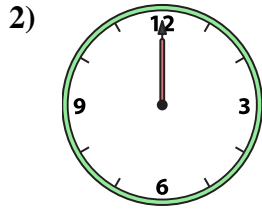
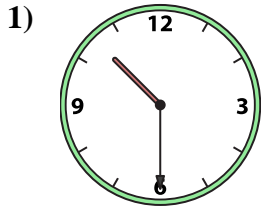
14. _____

15. _____

16. _____



Match the analog clock to the digital clock.



A. **2:30**

B. **10:30**

C. **7:30**

D. **6:00**

E. **3:00**

F. **5:30**

G. **1:00**

H. **5:00**

I. **7:00**

J. **12:30**

K. **11:00**

L. **6:30**

M. **12:30**

N. **11:30**

O. **3:30**

P. **12:00**

Answers

1. **B**

2. **P**

3. **J**

4. **L**

5. **N**

6. **C**

7. **F**

8. **A**

9. **O**

10. **D**

11. **G**

12. **M**

13. **H**

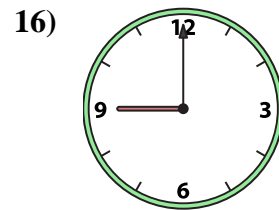
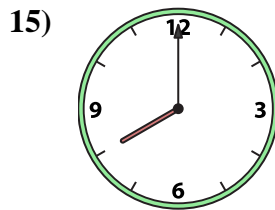
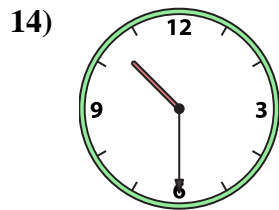
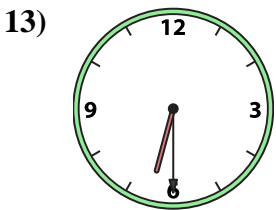
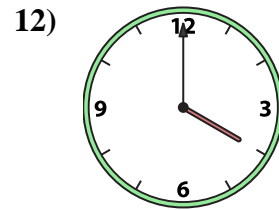
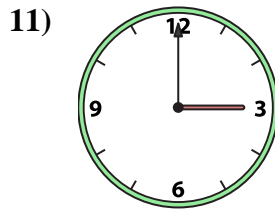
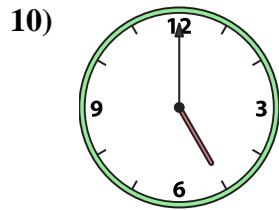
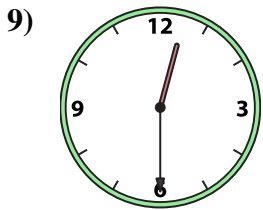
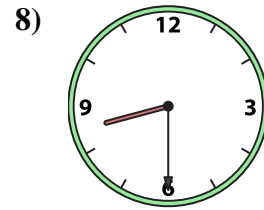
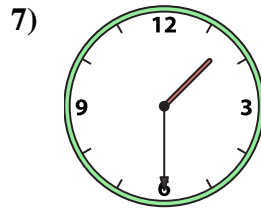
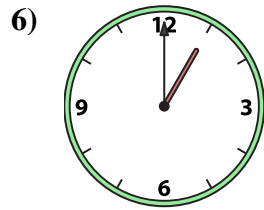
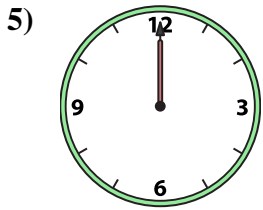
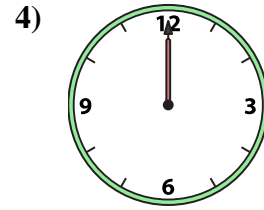
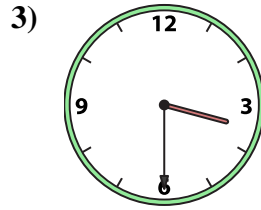
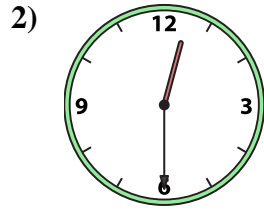

14. **E**

15. **I**

16. **K**



Match the analog clock to the digital clock.



A. 3:30

B. 9:00

C. 12:00

D. 12:00

E. 10:30

F. 12:30

G. 8:00

H. 11:00

I. 5:00

J. 1:30

K. 12:30

L. 4:00

M. 3:00

N. 6:30

O. 8:30

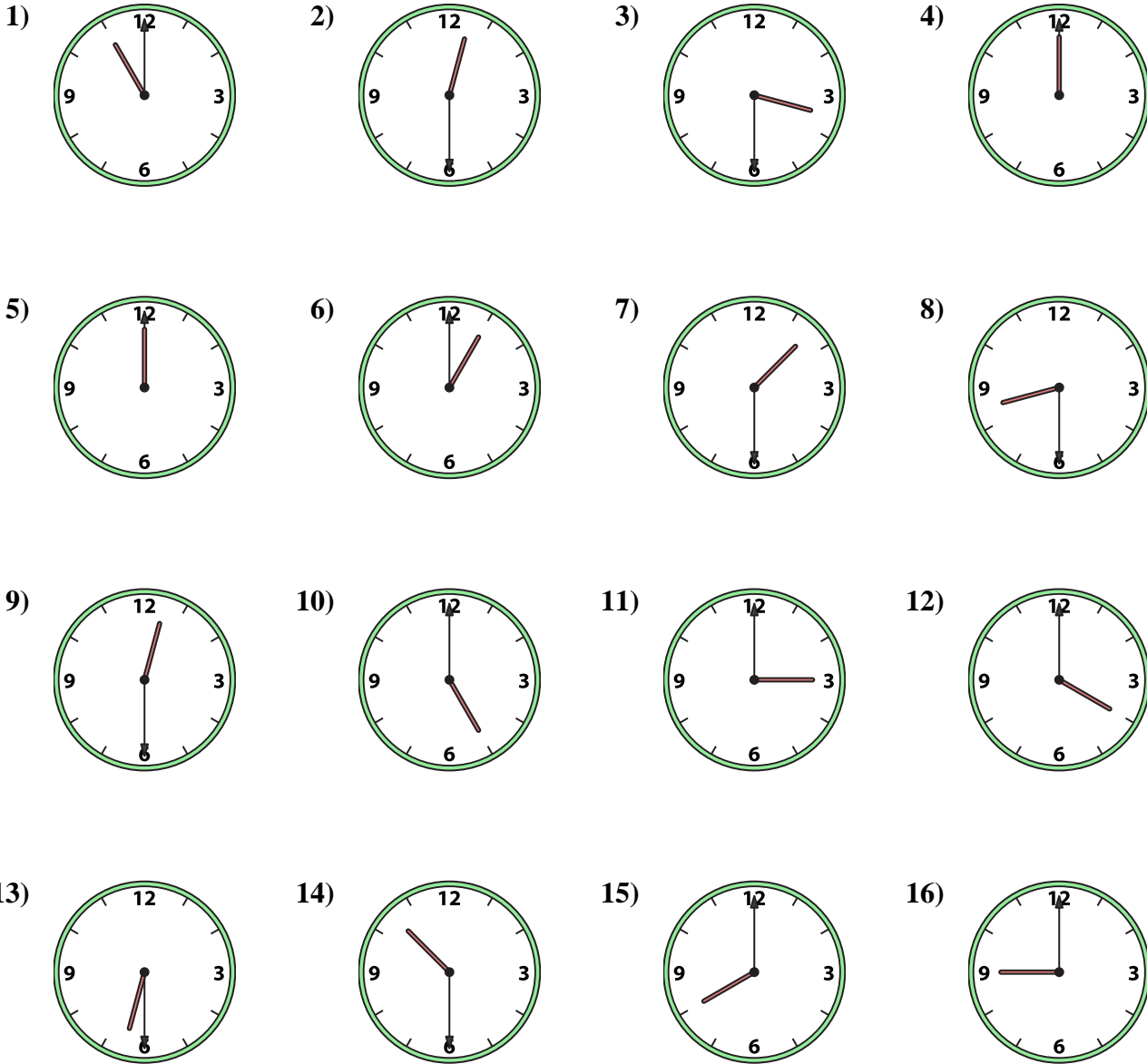
P. 1:00

Answers

1. _____
2. _____
3. _____
4. _____
5. _____
6. _____
7. _____
8. _____
9. _____
10. _____
11. _____
12. _____
13. _____
14. _____
15. _____
16. _____



Match the analog clock to the digital clock.



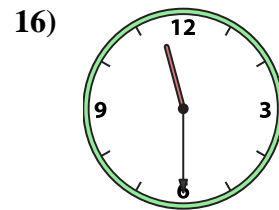
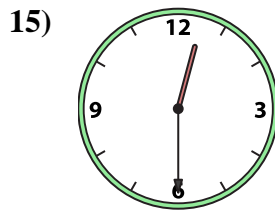
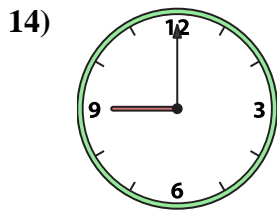
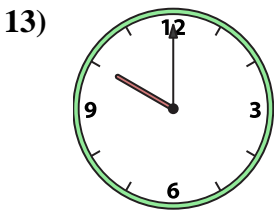
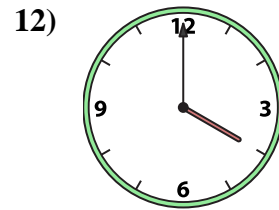
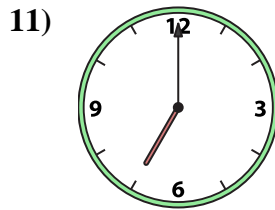
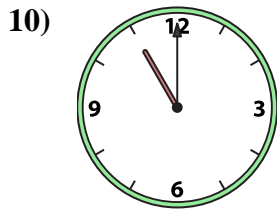
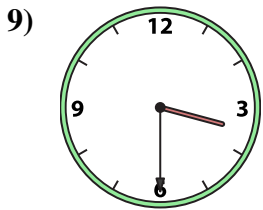
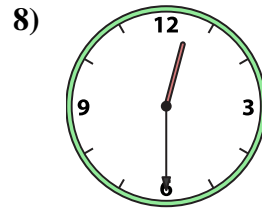
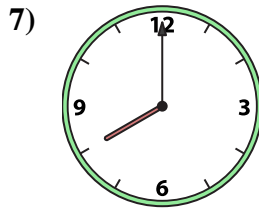
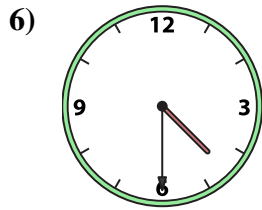
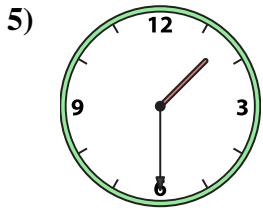
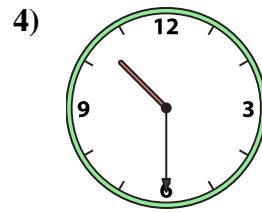
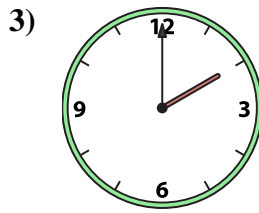
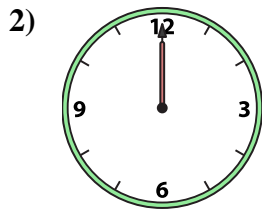

- A.
- B.
- C.
- D.
- E.
- F.
- G.
- H.
- I.
- J.
- K.
- L.
- M.
- N.
- O.
- P.

Answers

- 1. **H**
- 2. **F**
- 3. **A**
- 4. **C**
- 5. **D**
- 6. **P**
- 7. **J**
- 8. **O**
- 9. **K**
- 10. **I**
- 11. **M**
- 12. **L**
- 13. **N**
- 14. **E**
- 15. **G**
- 16. **B**



Match the analog clock to the digital clock.



A. 11:30

B. 9:00

C. 3:30

D. 12:30

E. 1:30

F. 11:00

G. 7:00

H. 4:30

I. 5:00

J. 10:00

K. 4:00

L. 8:00

M. 2:00

N. 12:00

O. 10:30

P. 12:30

Answers

1. _____

2. _____

3. _____

4. _____

5. _____

6. _____

7. _____

8. _____

9. _____

10. _____

11. _____

12. _____

13. _____

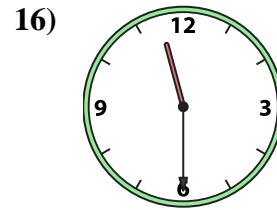
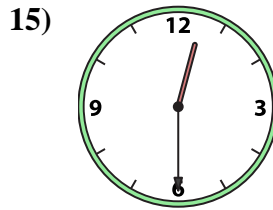
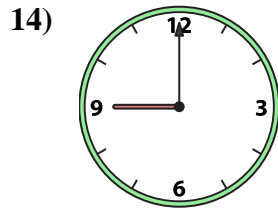
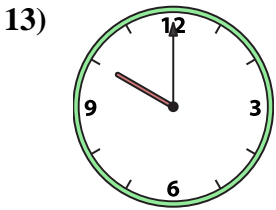
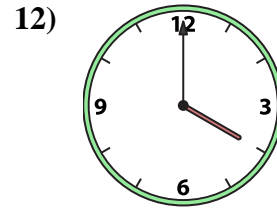
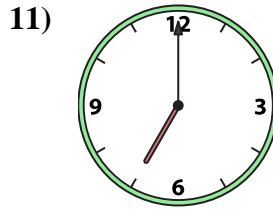
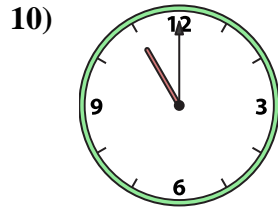
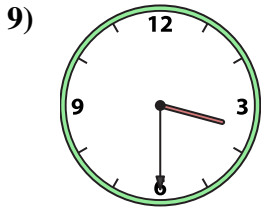
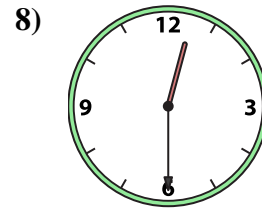
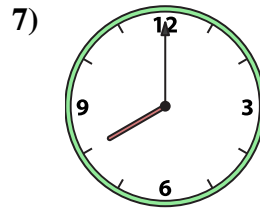
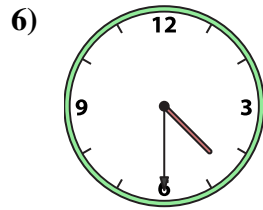
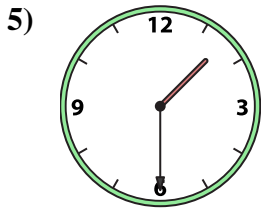
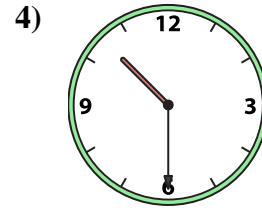
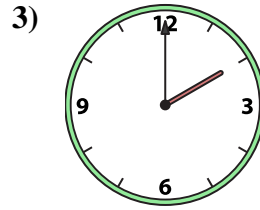
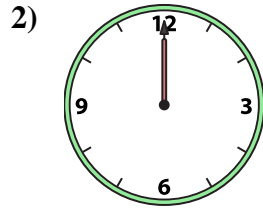
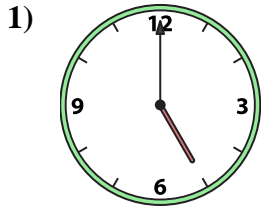
14. _____

15. _____

16. _____



Match the analog clock to the digital clock.



A. 11:30

B. 9:00

C. 3:30

D. 12:30

E. 1:30

F. 11:00

G. 7:00

H. 4:30

I. 5:00

J. 10:00

K. 4:00

L. 8:00

M. 2:00

N. 12:00

O. 10:30

P. 12:30

Answers

1. **I**

2. **N**

3. **M**

4. **O**

5. **E**

6. **H**

7. **L**

8. **P**

9. **C**

10. **F**

11. **G**

12. **K**

13. **J**

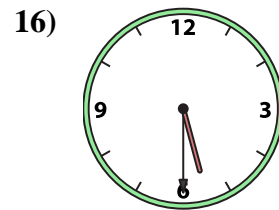
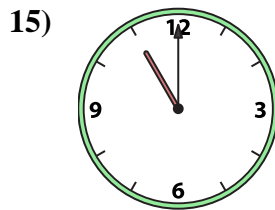
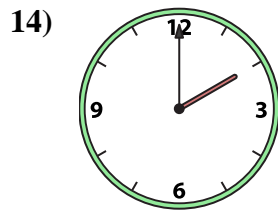
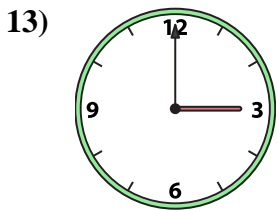
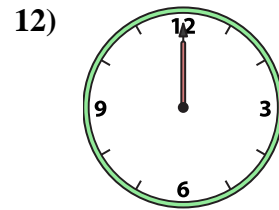
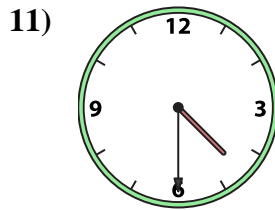
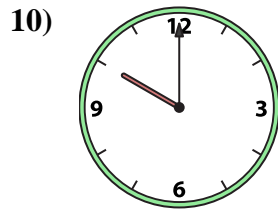
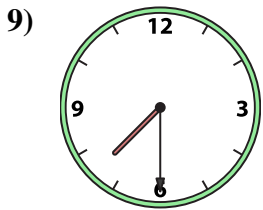
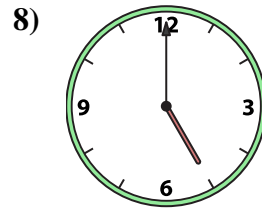
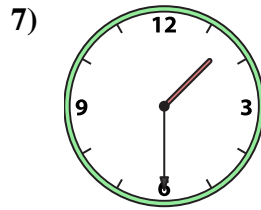
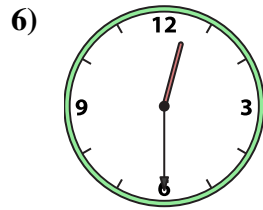
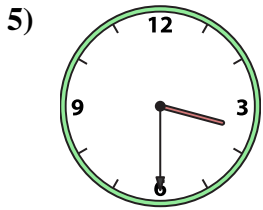
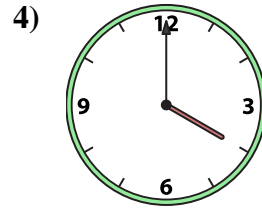
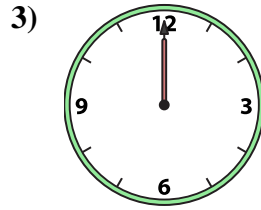
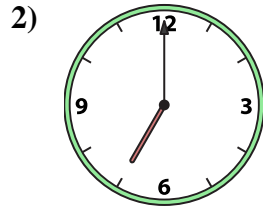

14. **B**

15. **D**

16. **A**



Match the analog clock to the digital clock.



A. 11:00

B. 1:00

C. 5:00

D. 4:30

E. 4:00

F. 3:30

G. 5:30

H. 7:30

I. 12:30

J. 2:00

K. 10:00

L. 7:00

M. 12:00

N. 1:30

O. 3:00

P. 12:00

Answers

1. _____

2. _____

3. _____

4. _____

5. _____

6. _____

7. _____

8. _____

9. _____

10. _____

11. _____

12. _____

13. _____

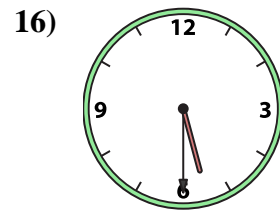
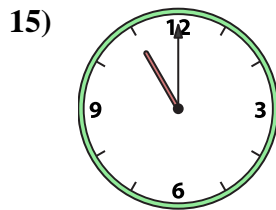
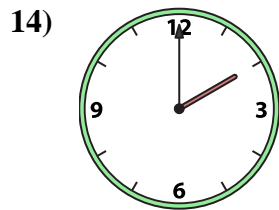
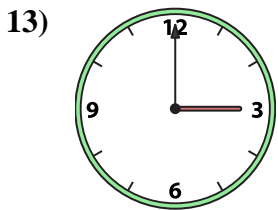
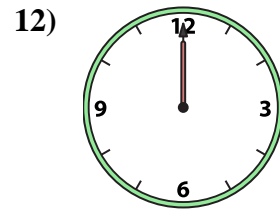
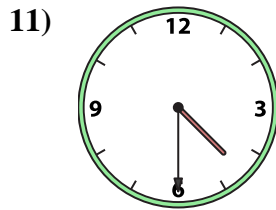
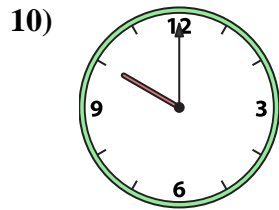
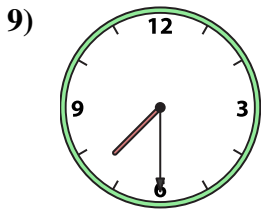
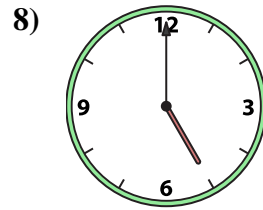
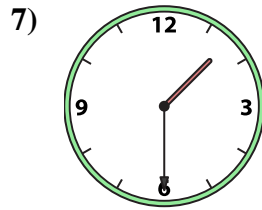
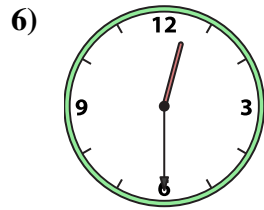
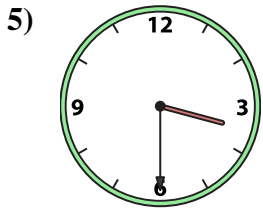
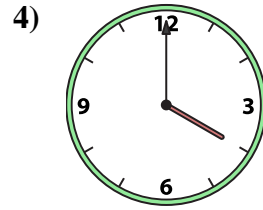
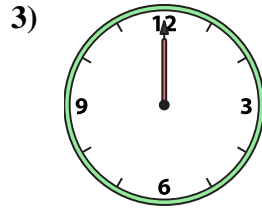
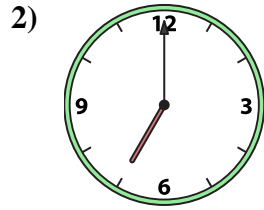

14. _____

15. _____

16. _____



Match the analog clock to the digital clock.



A. 11:00

B. 1:00

C. 5:00

D. 4:30

E. 4:00

F. 3:30

G. 5:30

H. 7:30

I. 12:30

J. 2:00

K. 10:00

L. 7:00

M. 12:00

N. 1:30

O. 3:00

P. 12:00

Answers

1. **B**

2. **L**

3. **M**

4. **E**

5. **F**

6. **I**

7. **N**

8. **C**

9. **H**

10. **K**

11. **D**

12. **P**

13. **O**

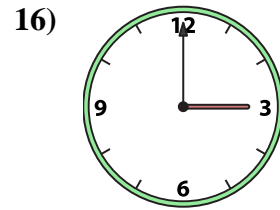
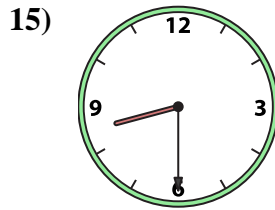
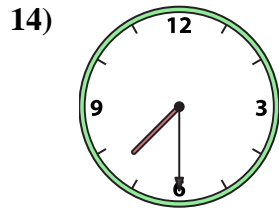
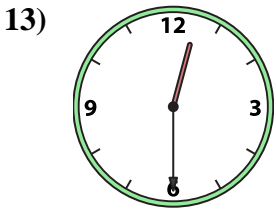
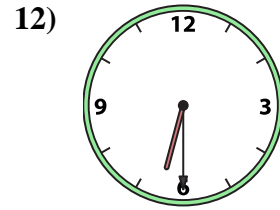
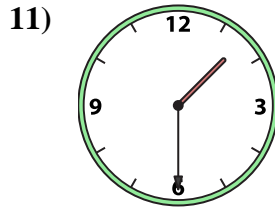
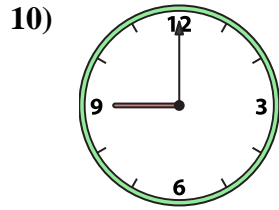
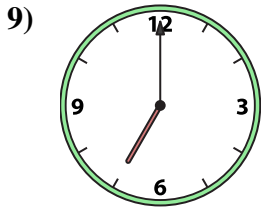
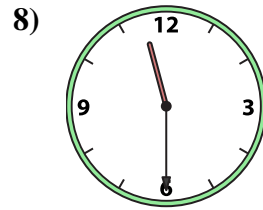
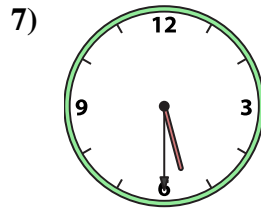
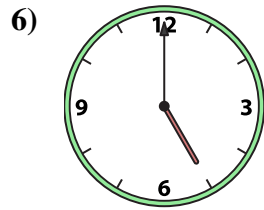
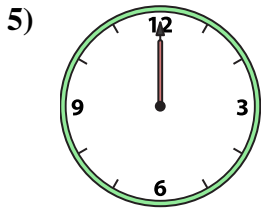
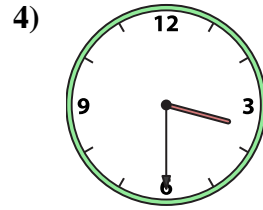
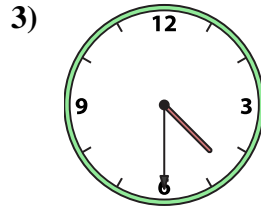
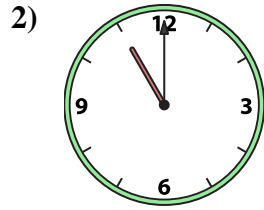
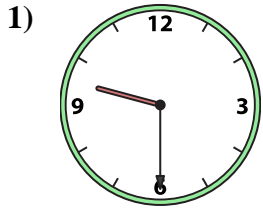
14. **J**

15. **A**

16. **G**



Match the analog clock to the digital clock.



A. 5:30

B. 3:00

C. 3:30

D. 12:00

E. 6:30

F. 7:30

G. 9:30

H. 4:30

I. 8:30

J. 5:00

K. 9:00

L. 11:00

M. 7:00

N. 1:30

O. 12:30

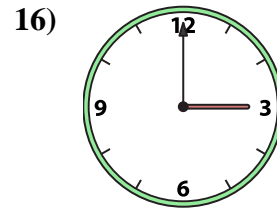
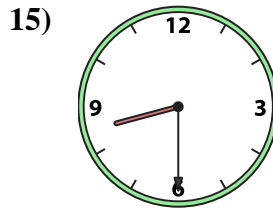
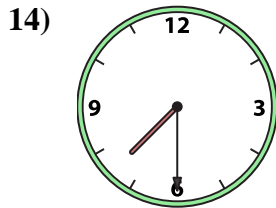
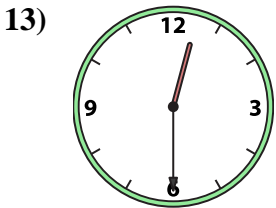
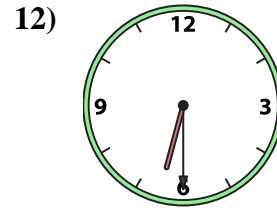
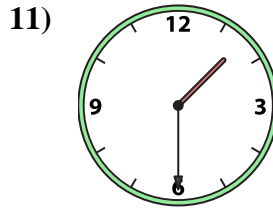
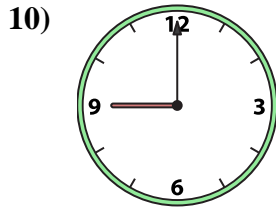

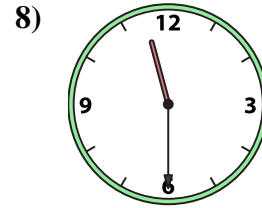
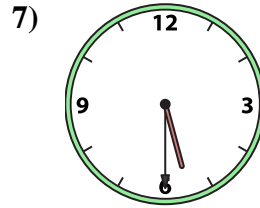
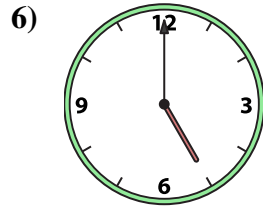
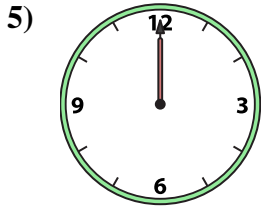
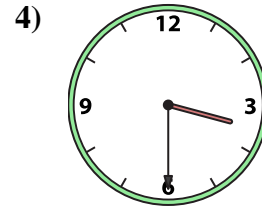
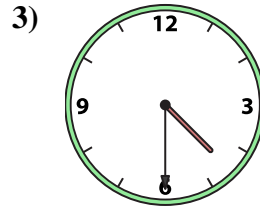
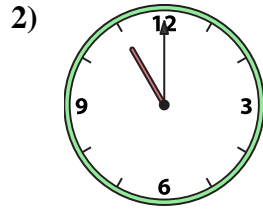
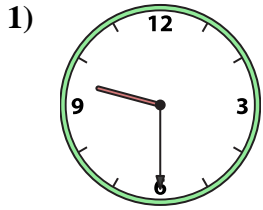
P. 11:30

Answers

1. _____
2. _____
3. _____
4. _____
5. _____
6. _____
7. _____
8. _____
9. _____
10. _____
11. _____
12. _____
13. _____
14. _____
15. _____
16. _____



Match the analog clock to the digital clock.



A. 5:30

B. 3:00

C. 3:30

D. 12:00

E. 6:30

F. 7:30

G. 9:30

H. 4:30

I. 8:30

J. 5:00

K. 9:00

L. 11:00

M. 7:00

N. 1:30

O. 12:30

P. 11:30

Answers

1. **G**

2. **L**

3. **H**

4. **C**

5. **D**

6. **J**

7. **A**

8. **P**

9. **M**

10. **K**

11. **N**

12. **E**

13. **O**

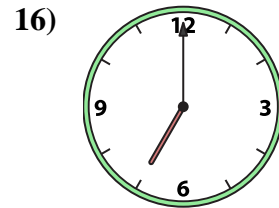
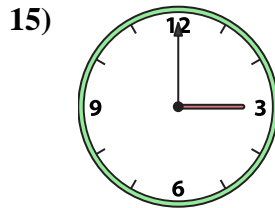
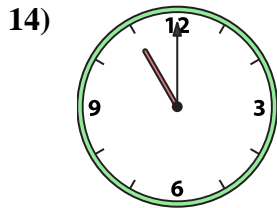
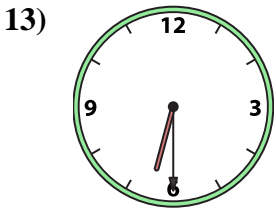
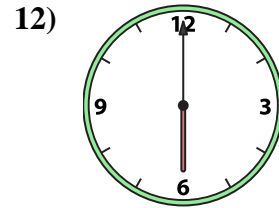
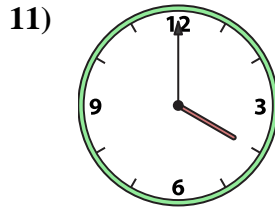
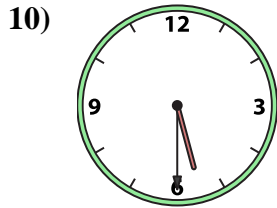

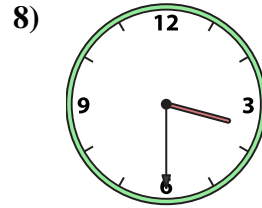
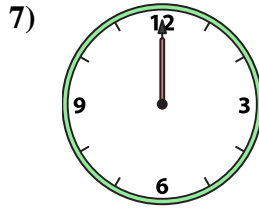
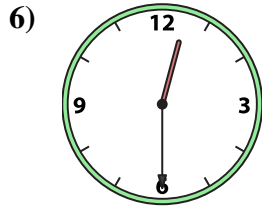
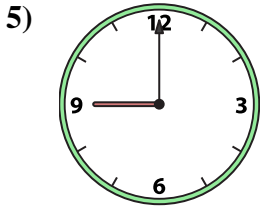
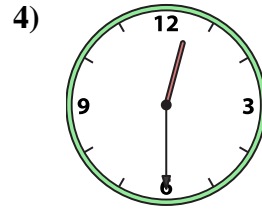
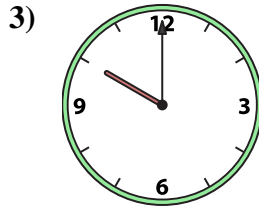
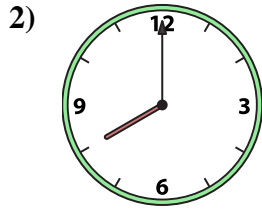

14. **F**

15. **I**

16. **B**



Match the analog clock to the digital clock.



A. 10:00

B. 3:30

C. 1:00

D. 12:30

E. 12:00

F. 3:00

G. 6:00

H. 5:30

I. 2:00

J. 12:30

K. 11:00

L. 9:00

M. 6:30

N. 4:00

O. 8:00

P. 7:00

Answers

1. _____

2. _____

3. _____

4. _____

5. _____

6. _____

7. _____

8. _____

9. _____

10. _____

11. _____

12. _____

13. _____

14. _____

15. _____

16. _____



Match the analog clock to the digital clock.

1)

2)

3)

4)

5)

6)

7)

8)

9)

10)

11)

12)

13)

14)

15)

16)

A.

B.

C.

D.

E.

F.

G.

H.

I.

J.

K.

L.

M.

N.

O.

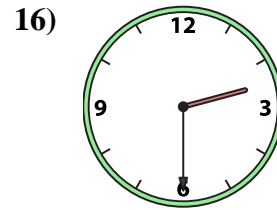
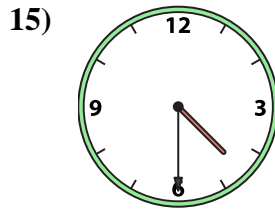
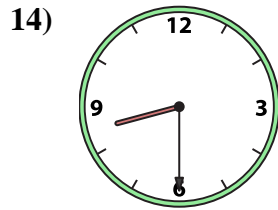
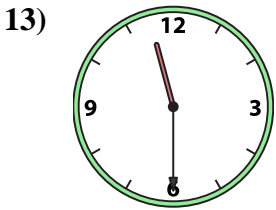
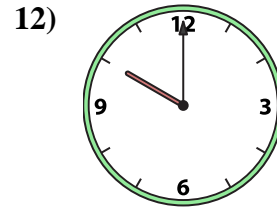
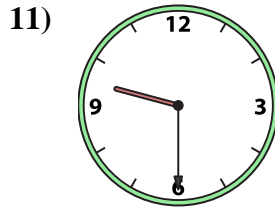
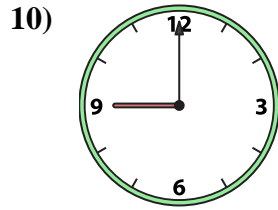
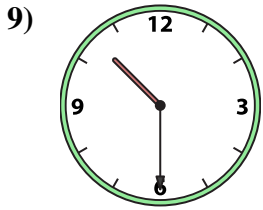
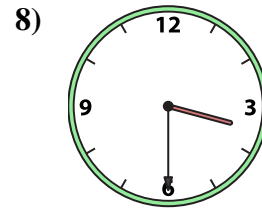
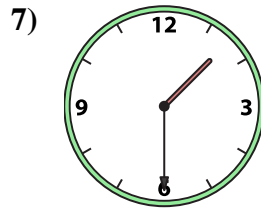
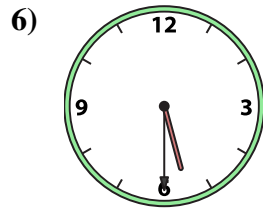
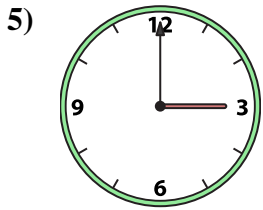
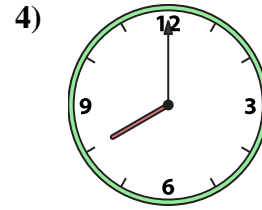
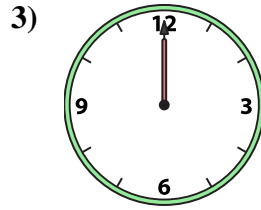
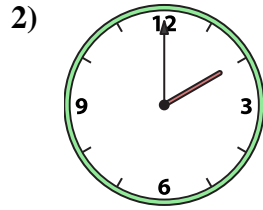
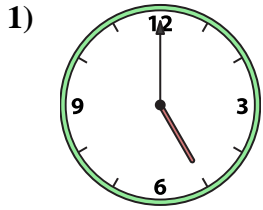
P.

Answers

1. **C**
2. **O**
3. **A**
4. **J**
5. **L**
6. **D**
7. **E**
8. **B**
9. **I**
10. **H**
11. **N**
12. **G**
13. **M**
14. **K**
15. **F**
16. **P**



Match the analog clock to the digital clock.



A. 12:00

B. 8:00

C. 1:30

D. 3:00

E. 2:30

F. 4:30

G. 2:00

H. 10:30

I. 9:00

J. 10:00

K. 5:30

L. 9:30

M. 8:30

N. 5:00

O. 11:30

P. 3:30

Answers

1. _____

2. _____

3. _____

4. _____

5. _____

6. _____

7. _____

8. _____

9. _____

10. _____

11. _____

12. _____

13. _____

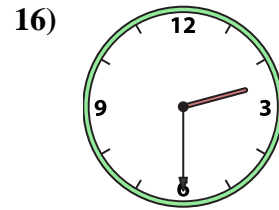
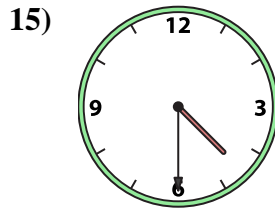
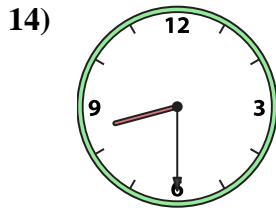
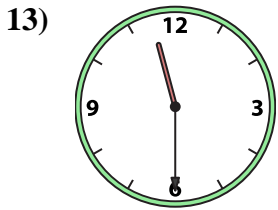
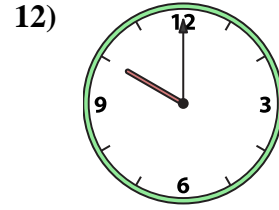
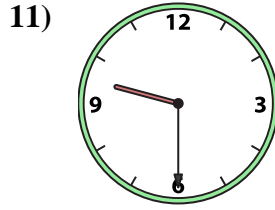
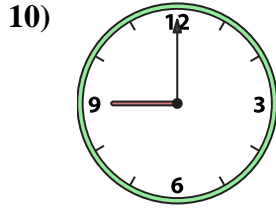
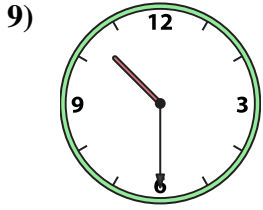
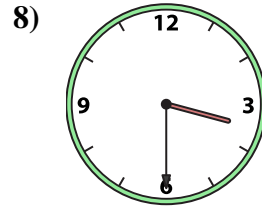
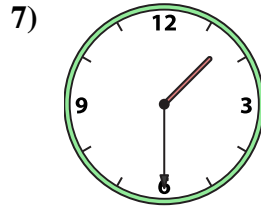
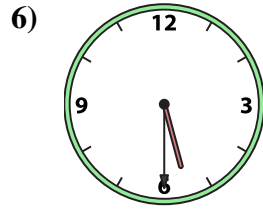
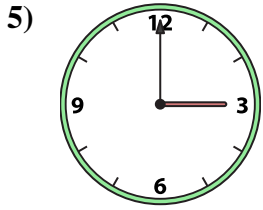
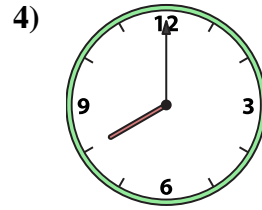
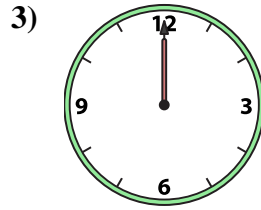
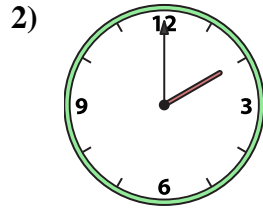
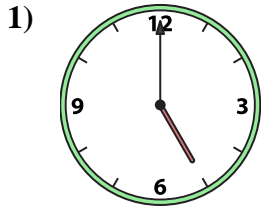
14. _____

15. _____

16. _____



Match the analog clock to the digital clock.



A. **12:00**

B. **8:00**

C. **1:30**

D. **3:00**

E. **2:30**

F. **4:30**

G. **2:00**

H. **10:30**

I. **9:00**

J. **10:00**

K. **5:30**

L. **9:30**

M. **8:30**

N. **5:00**

O. **11:30**

P. **3:30**

Answers

1. **N**

2. **G**

3. **A**

4. **B**

5. **D**

6. **K**

7. **C**

8. **P**

9. **H**

10. **I**

11. **L**

12. **J**

13. **O**

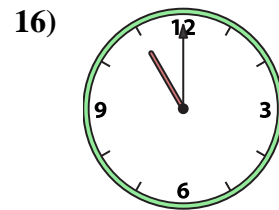
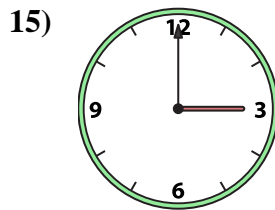
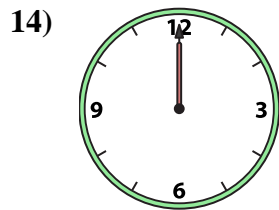
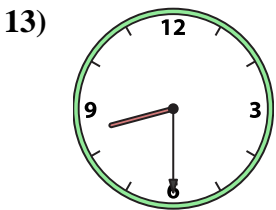
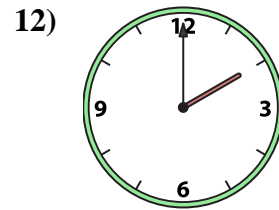
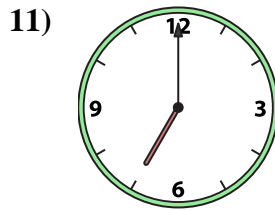
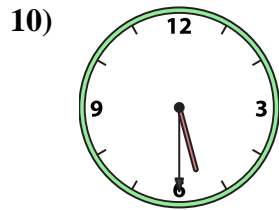
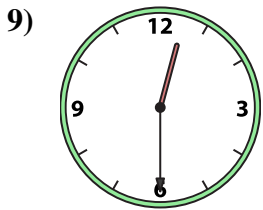
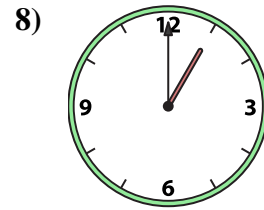
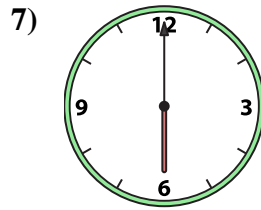
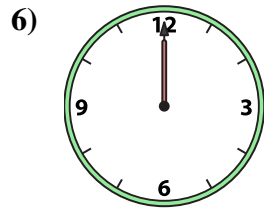
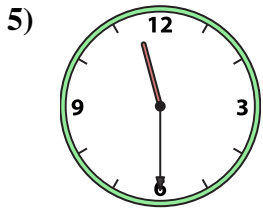
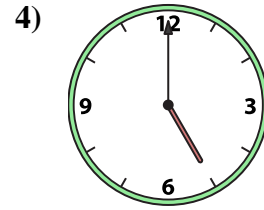
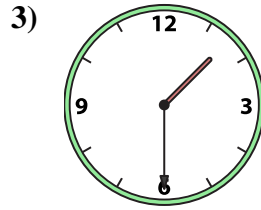
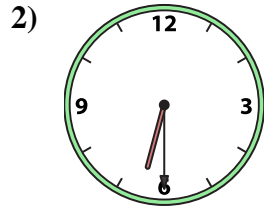
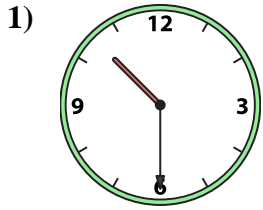
14. **M**

15. **F**

16. **E**



Match the analog clock to the digital clock.



A. 6:00

B. 1:30

C. 6:30

D. 12:00

E. 2:00

F. 12:30

G. 10:30

H. 1:00

I. 8:30

J. 5:30

K. 11:00

L. 5:00

M. 12:00

N. 7:00

O. 3:00

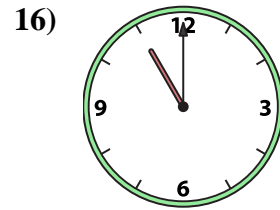
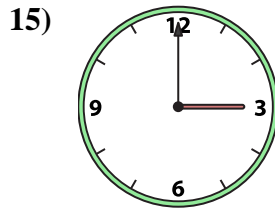
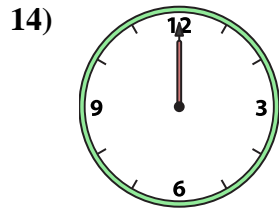
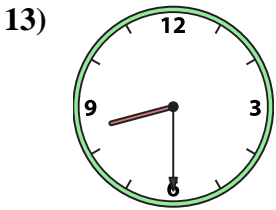
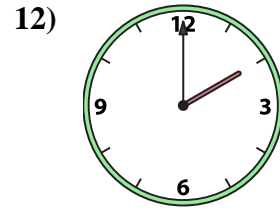
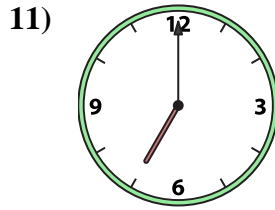
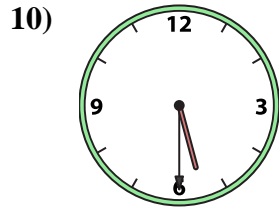
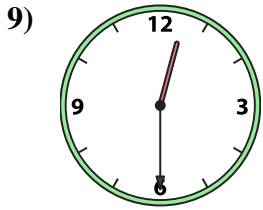
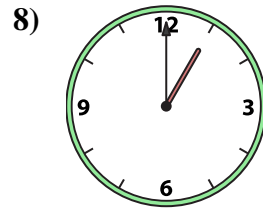
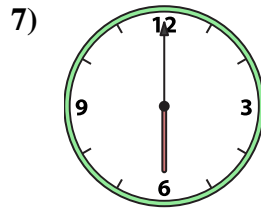
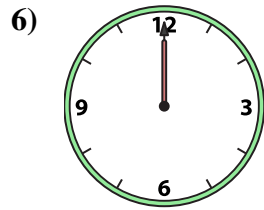
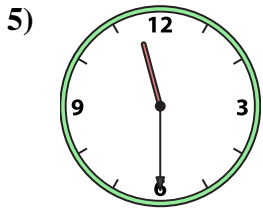
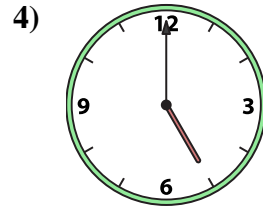
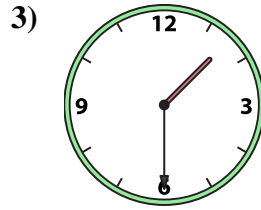
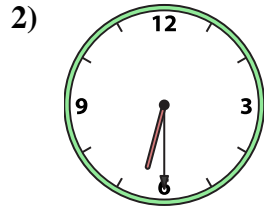
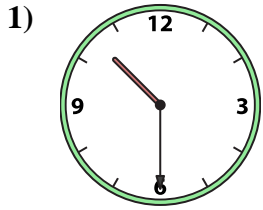
P. 11:30

Answers

1. _____
2. _____
3. _____
4. _____
5. _____
6. _____
7. _____
8. _____
9. _____
10. _____
11. _____
12. _____
13. _____
14. _____
15. _____
16. _____



Match the analog clock to the digital clock.



A. **6:00**

B. **1:30**

C. **6:30**

D. **12:00**

E. **2:00**

F. **12:30**

G. **10:30**

H. **1:00**

I. **8:30**

J. **5:30**

K. **11:00**

L. **5:00**

M. **12:00**

N. **7:00**

O. **3:00**

P. **11:30**

Answers

1. **G**

2. **C**

3. **B**

4. **L**

5. **P**

6. **D**

7. **A**

8. **H**

9. **F**

10. **J**

11. **N**

12. **E**

13. **I**

14. **M**

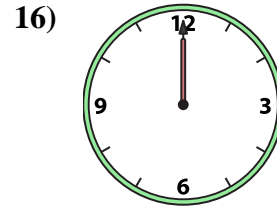
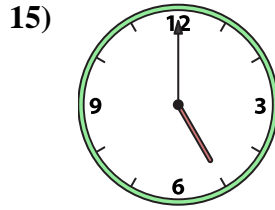
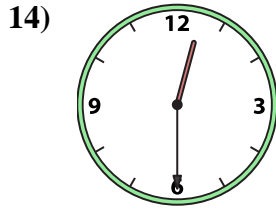
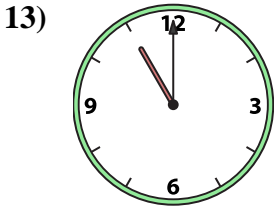
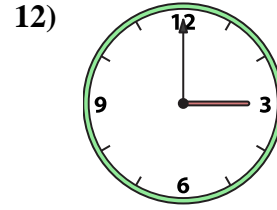
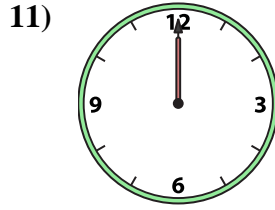
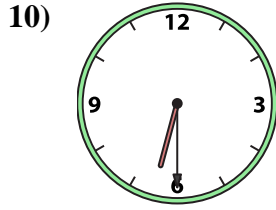
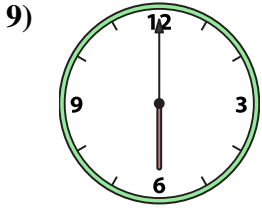
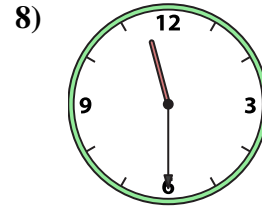
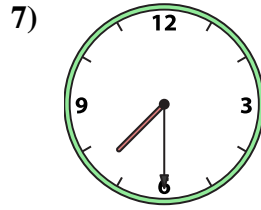
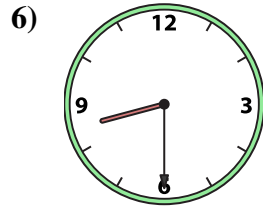
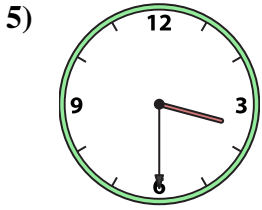
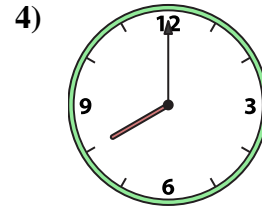
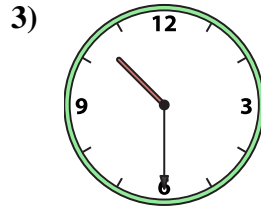
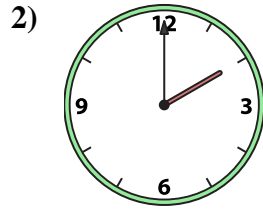

15. **O**

16. **K**



Match the analog clock to the digital clock.

Answers



A. 10:30

B. 2:00

C. 7:30

D. 12:30

E. 6:30

F. 1:00

G. 12:00

H. 6:00

I. 3:30

J. 3:00

K. 11:30

L. 5:00

M. 8:00

N. 12:00

O. 11:00

P. 8:30

1. _____

2. _____

3. _____

4. _____

5. _____

6. _____

7. _____

8. _____

9. _____

10. _____

11. _____

12. _____

13. _____

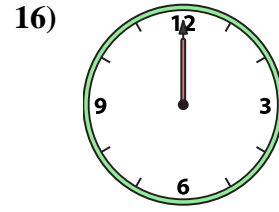
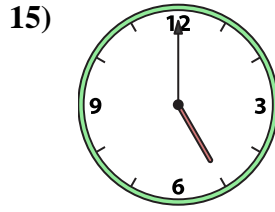
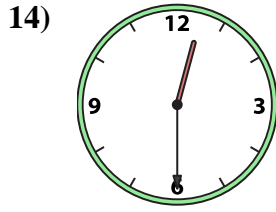
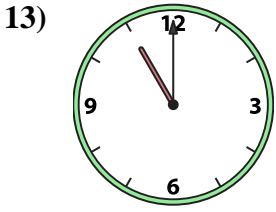
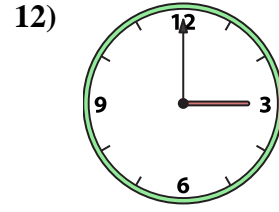
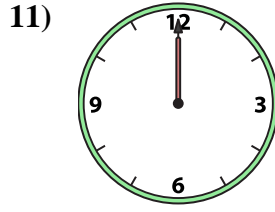
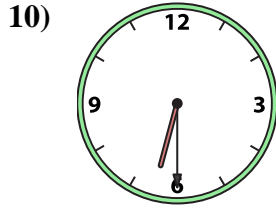
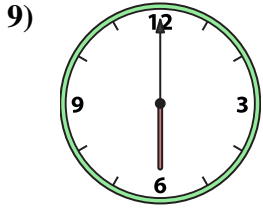
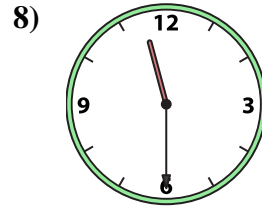
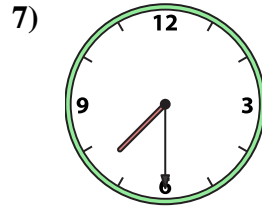
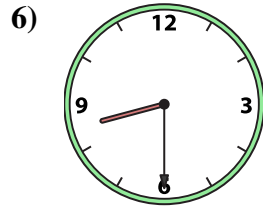
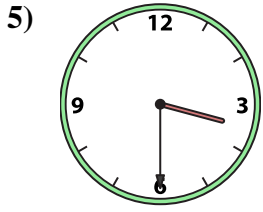
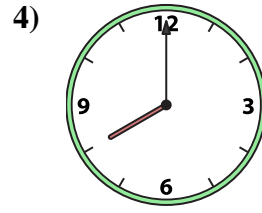
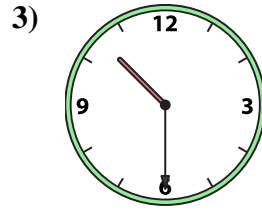
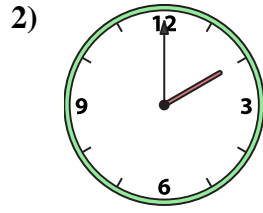

14. _____

15. _____

16. _____



Match the analog clock to the digital clock.



A. 10:30

B. 2:00

C. 7:30

D. 12:30

E. 6:30

F. 1:00

G. 12:00

H. 6:00

I. 3:30

J. 3:00

K. 11:30

L. 5:00

M. 8:00

N. 12:00

O. 11:00

P. 8:30

Answers

1. **F**

2. **B**

3. **A**

4. **M**

5. **I**

6. **P**

7. **C**

8. **K**

9. **H**

10. **E**

11. **N**

12. **J**

13. **O**

14. **D**

15. **L**

16. **G**