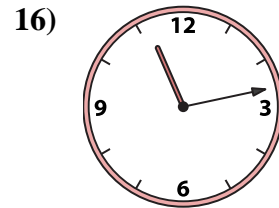
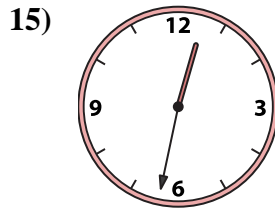
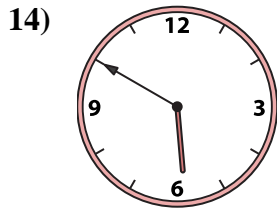
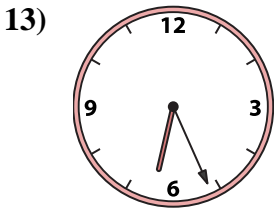
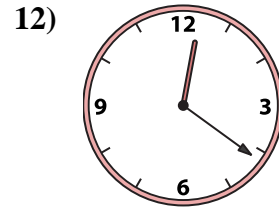
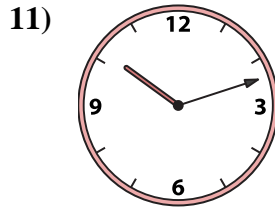
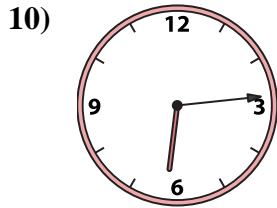
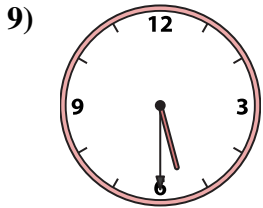
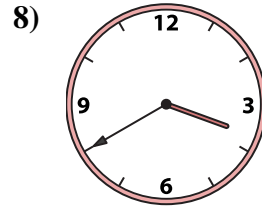
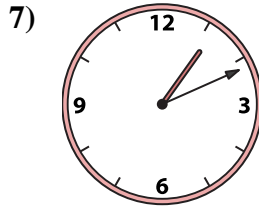


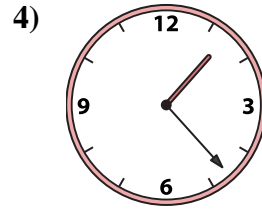
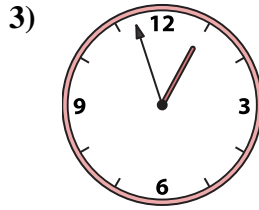
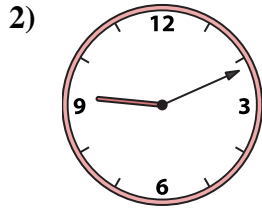
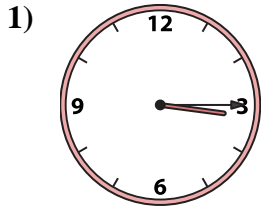




Match the analog clock to the digital clock.



**Answers**

1. \_\_\_\_\_
2. \_\_\_\_\_
3. \_\_\_\_\_
4. \_\_\_\_\_
5. \_\_\_\_\_
6. \_\_\_\_\_
7. \_\_\_\_\_
8. \_\_\_\_\_
9. \_\_\_\_\_
10. \_\_\_\_\_
11. \_\_\_\_\_
12. \_\_\_\_\_
13. \_\_\_\_\_
14. \_\_\_\_\_
15. \_\_\_\_\_
16. \_\_\_\_\_

A. **10:12**

B. **3:40**

C. **1:23**

D. **12:32**

E. **12:21**

F. **3:15**

G. **1:11**

H. **6:14**

I. **5:50**

J. **2:02**

K. **5:30**

L. **6:26**

M. **12:57**

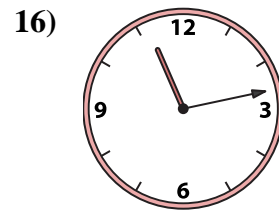
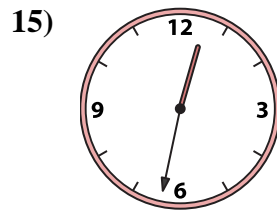
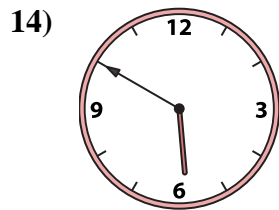
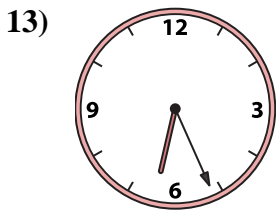
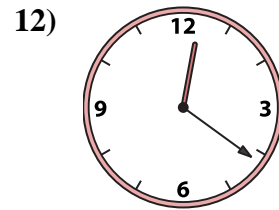
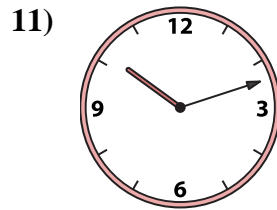
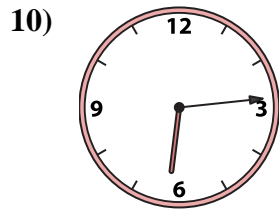
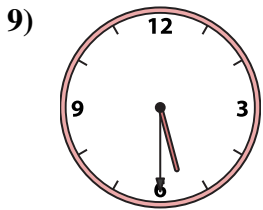
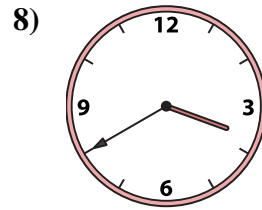
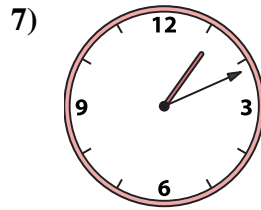

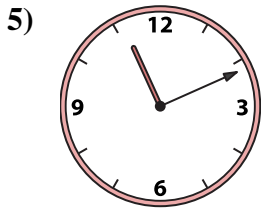
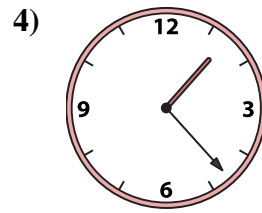
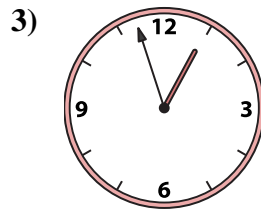
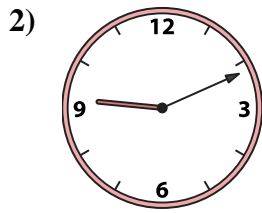
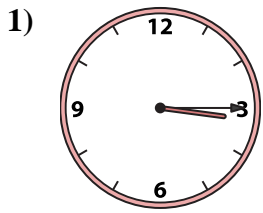
N. **11:11**

O. **11:13**

P. **9:11**



Match the analog clock to the digital clock.



A. **10:12**

B. **3:40**

C. **1:23**

D. **12:32**

E. **12:21**

F. **3:15**

G. **1:11**

H. **6:14**

I. **5:50**

J. **2:02**

K. **5:30**

L. **6:26**

M. **12:57**

N. **11:11**

O. **11:13**

P. **9:11**

**Answers**

1. **F**

2. **P**

3. **M**

4. **C**

5. **N**

6. **J**

7. **G**

8. **B**

9. **K**

10. **H**

11. **A**

12. **E**

13. **L**

14. **I**

15. **D**

16. **O**