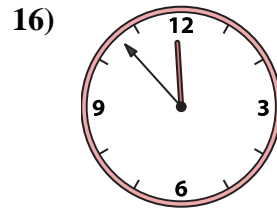
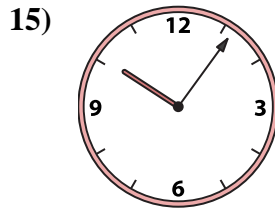
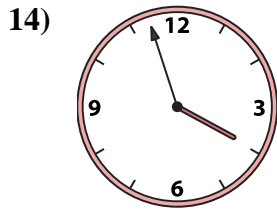
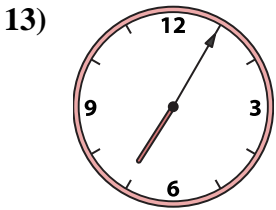
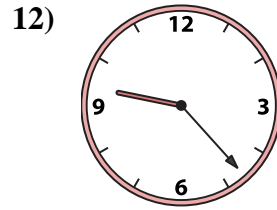
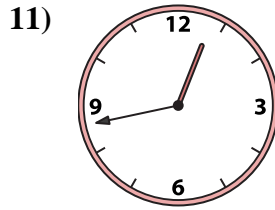
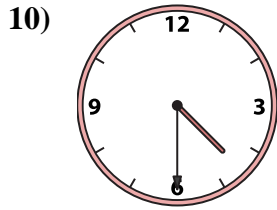
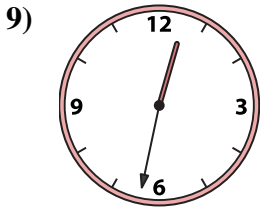
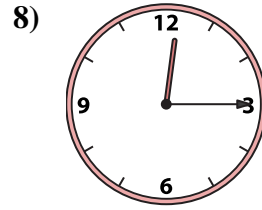
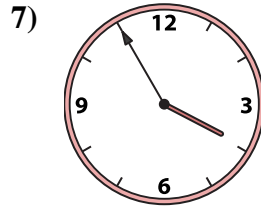
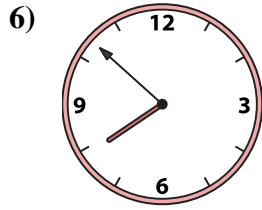
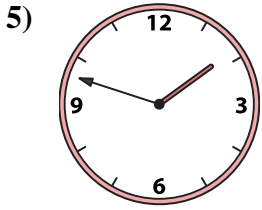
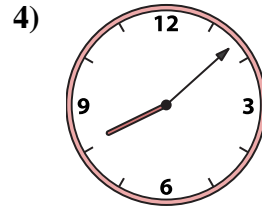
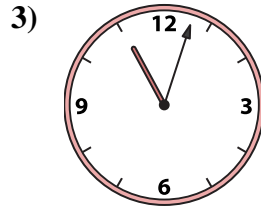
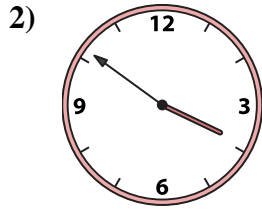
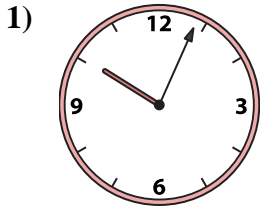




Match the analog clock to the digital clock.

Answers



A. 4:30

B. 1:48

C. 12:43

D. 3:57

E. 7:52

F. 3:51

G. 11:53

H. 3:55

I. 10:04

J. 10:06

K. 8:08

L. 11:03

M. 7:05

N. 9:23

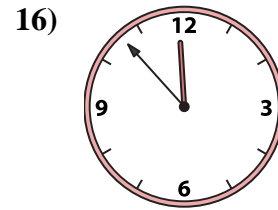
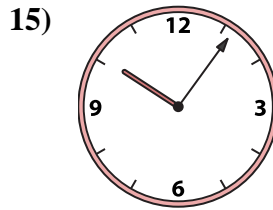
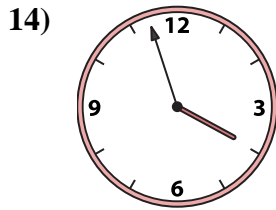
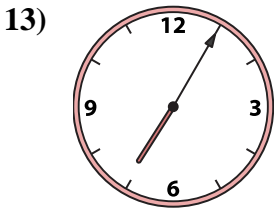
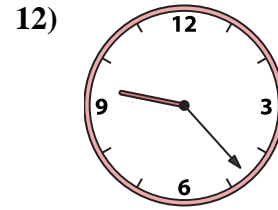
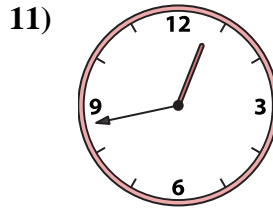
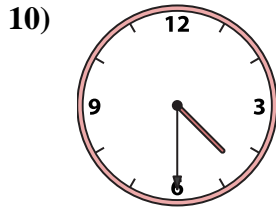
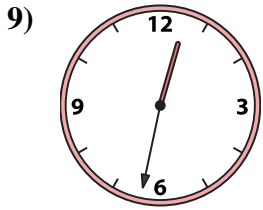
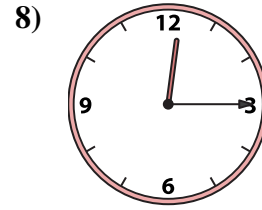
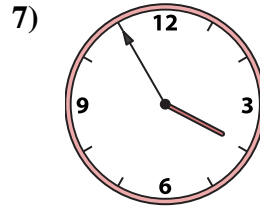
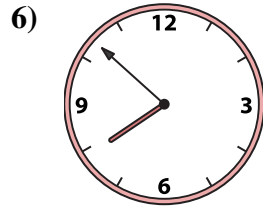
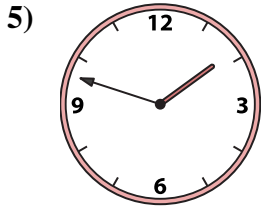
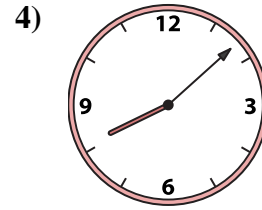
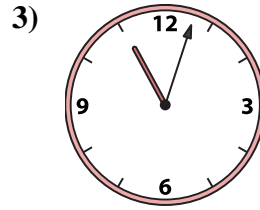
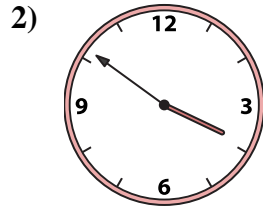
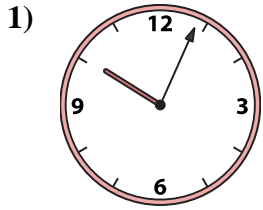
O. 12:32

P. 12:15

1. _____
2. _____
3. _____
4. _____
5. _____
6. _____
7. _____
8. _____
9. _____
10. _____
11. _____
12. _____
13. _____
14. _____
15. _____
16. _____



Match the analog clock to the digital clock.



A. 4:30

B. 1:48

C. 12:43

D. 3:57

E. 7:52

F. 3:51

G. 11:53

H. 3:55

I. 10:04

J. 10:06

K. 8:08

L. 11:03

M. 7:05

N. 9:23

O. 12:32

P. 12:15

Answers

1. **I**

2. **F**

3. **L**

4. **K**

5. **B**

6. **E**

7. **H**

8. **P**

9. **O**

10. **A**

11. **C**

12. **N**

13. **M**

14. **D**

15. **J**

16. **G**