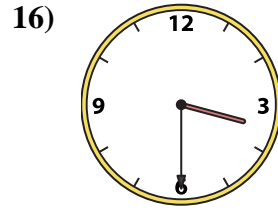
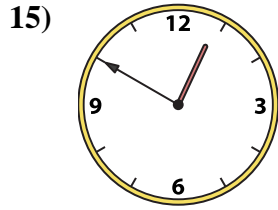
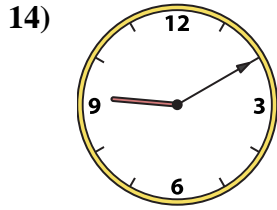
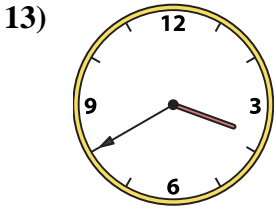
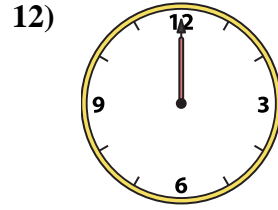
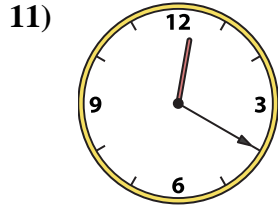
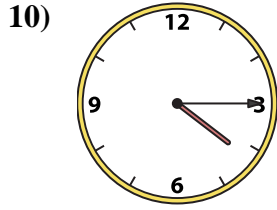
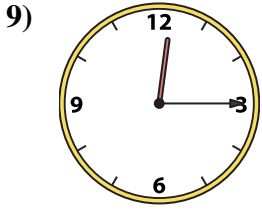
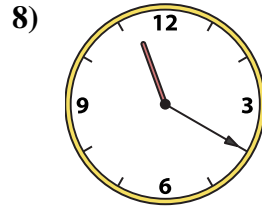
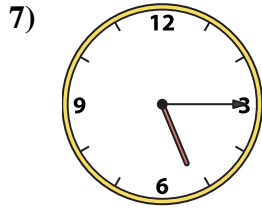
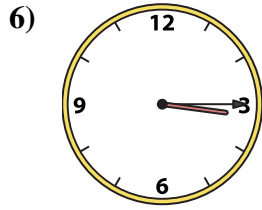
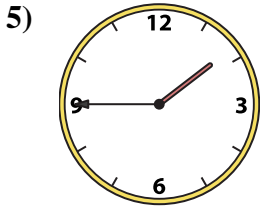
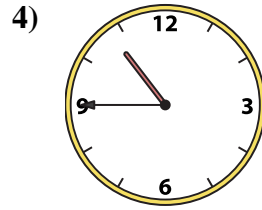
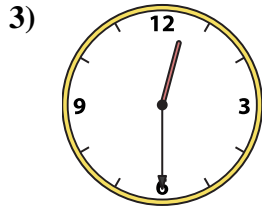
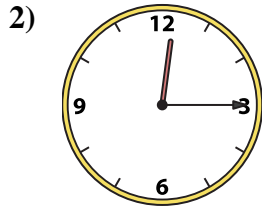
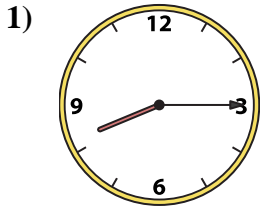




Match the analog clock to the digital clock.

Answers



A. 3:40

B. 9:10

C. 12:20

D. 12:15

E. 12:00

F. 12:15

G. 10:45

H. 12:50

I. 8:15

J. 11:20

K. 5:15

L. 1:45

M. 12:30

N. 4:15

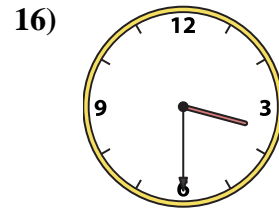
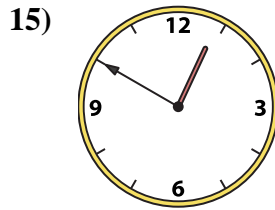
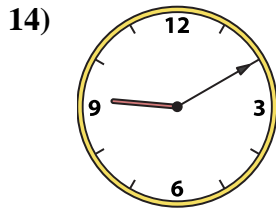
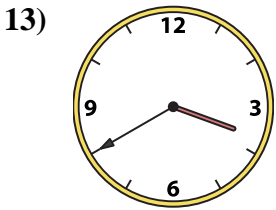
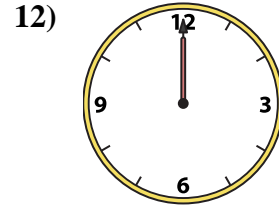
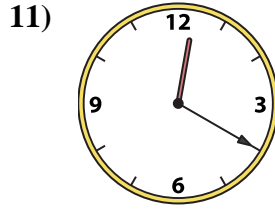
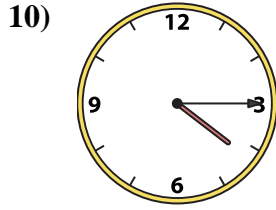
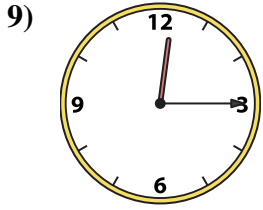
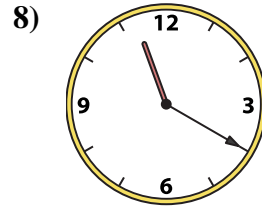
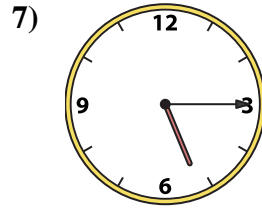
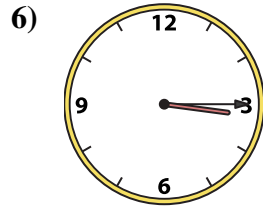
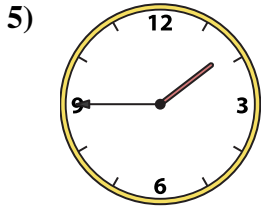
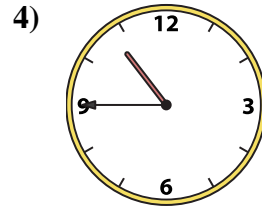
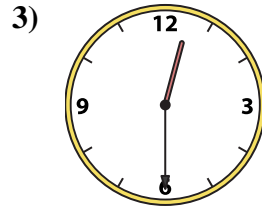
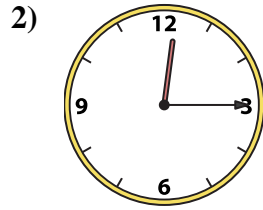
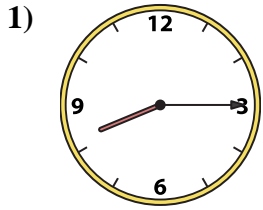
O. 3:30

P. 3:15

1. _____
2. _____
3. _____
4. _____
5. _____
6. _____
7. _____
8. _____
9. _____
10. _____
11. _____
12. _____
13. _____
14. _____
15. _____
16. _____



Match the analog clock to the digital clock.



A. **3:40**

B. **9:10**

C. **12:20**

D. **12:15**

E. **12:00**

F. **12:15**

G. **10:45**

H. **12:50**

I. **8:15**

J. **11:20**

K. **5:15**

L. **1:45**

M. **12:30**

N. **4:15**

O. **3:30**

P. **3:15**

Answers

1. **I**

2. **D**

3. **M**

4. **G**

5. **L**

6. **P**

7. **K**

8. **J**

9. **F**

10. **N**

11. **C**

12. **E**

13. **A**

14. **B**

15. **H**

16. **O**