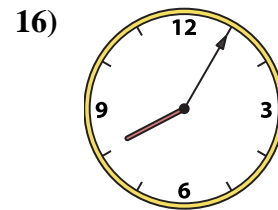
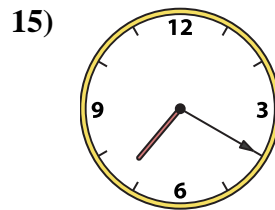
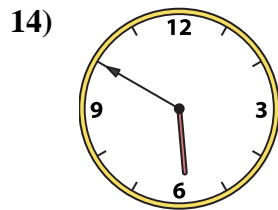
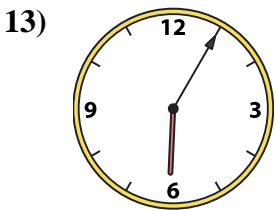
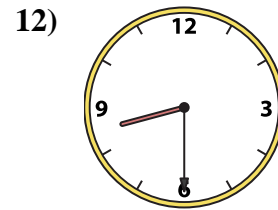
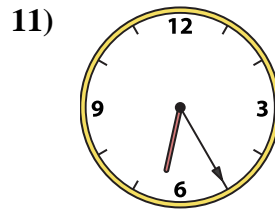
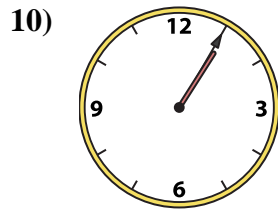
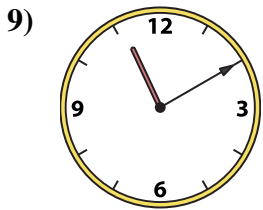
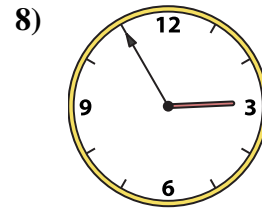
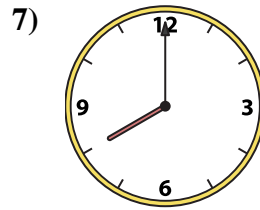
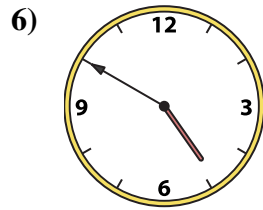
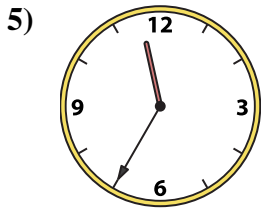
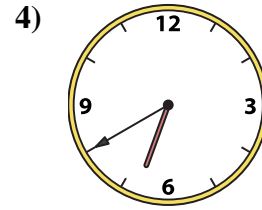
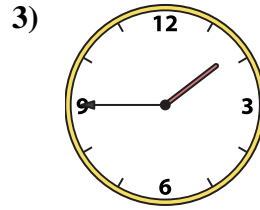
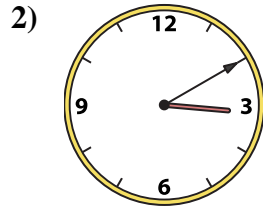
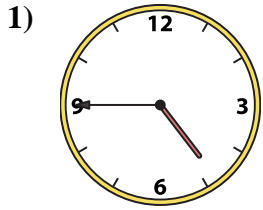




Match the analog clock to the digital clock.



Answers

1. _____
2. _____
3. _____
4. _____
5. _____
6. _____
7. _____
8. _____
9. _____
10. _____
11. _____
12. _____
13. _____
14. _____
15. _____
16. _____

A. 8:05

B. 11:10

C. 8:00

D. 2:55

E. 3:10

F. 5:50

G. 8:30

H. 4:45

I. 1:45

J. 6:40

K. 6:05

L. 6:25

M. 4:50

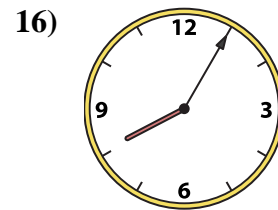
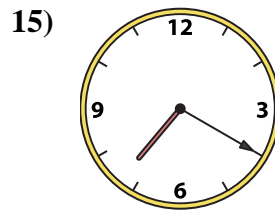
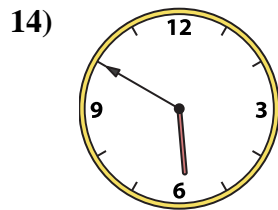
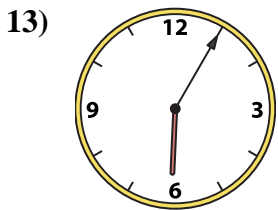
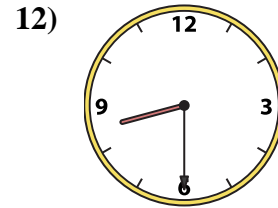
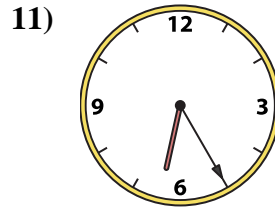
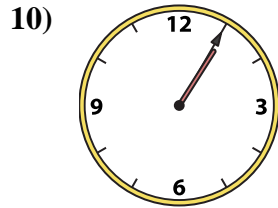

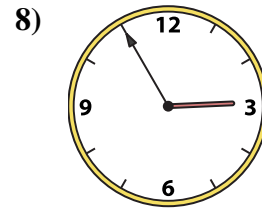
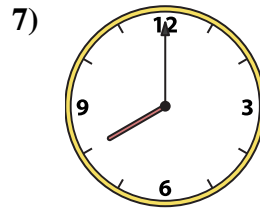
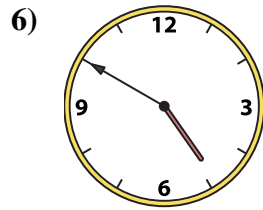
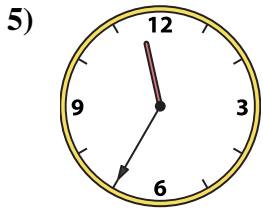
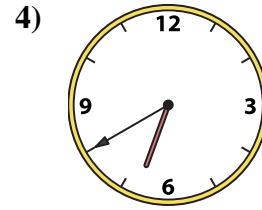
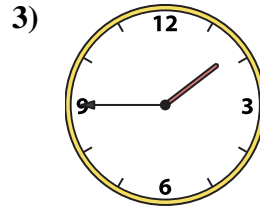
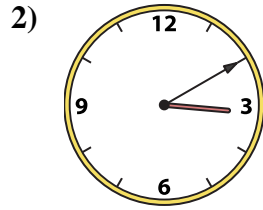
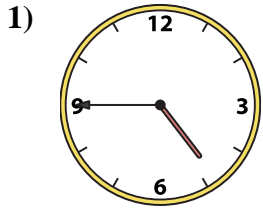
N. 7:20

O. 11:35

P. 1:05



Match the analog clock to the digital clock.



A. 8:05

B. 11:10

C. 8:00

D. 2:55

E. 3:10

F. 5:50

G. 8:30

H. 4:45

I. 1:45

J. 6:40

K. 6:05

L. 6:25

M. 4:50

N. 7:20

O. 11:35

P. 1:05

Answers

1. **H**

2. **E**

3. **I**

4. **J**

5. **O**

6. **M**

7. **C**

8. **D**

9. **B**

10. **P**

11. **L**

12. **G**

13. **K**

14. **F**

15. **N**

16. **A**