



Use  $<$ ,  $>$ , or  $=$  to compare the numbers.

Answers

- 1) 78 \_\_\_ 33
- 2) 97 \_\_\_ 30
- 3) 51 \_\_\_ 42
- 4) 25 \_\_\_ 36
- 5) 82 \_\_\_ 11
- 6) 42 \_\_\_ 20
- 7) 65 \_\_\_ 56
- 8) 39 \_\_\_ 93
- 9) 45 \_\_\_ 54
- 10) 12 \_\_\_ 21
- 11) 56 \_\_\_ 65
- 12) 98 \_\_\_ 89
- 13) 71 \_\_\_ 17
- 14) 42 \_\_\_ 24
- 15) 74 \_\_\_ 75
- 16) 49 \_\_\_ 48
- 17) 77 \_\_\_ 75
- 18) 17 \_\_\_ 18
- 19) 18 \_\_\_ 19
- 20) 12 \_\_\_ 13

- 1. \_\_\_\_\_
- 2. \_\_\_\_\_
- 3. \_\_\_\_\_
- 4. \_\_\_\_\_
- 5. \_\_\_\_\_
- 6. \_\_\_\_\_
- 7. \_\_\_\_\_
- 8. \_\_\_\_\_
- 9. \_\_\_\_\_
- 10. \_\_\_\_\_
- 11. \_\_\_\_\_
- 12. \_\_\_\_\_
- 13. \_\_\_\_\_
- 14. \_\_\_\_\_
- 15. \_\_\_\_\_
- 16. \_\_\_\_\_
- 17. \_\_\_\_\_
- 18. \_\_\_\_\_
- 19. \_\_\_\_\_
- 20. \_\_\_\_\_

Use  $<$ ,  $>$ , or  $=$  to compare the numbers.

1)  $78 > 33$

2)  $97 > 30$

3)  $51 > 42$

4)  $25 < 36$

5)  $82 > 11$

6)  $42 > 20$

7)  $65 > 56$

8)  $39 < 93$

9)  $45 < 54$

10)  $12 < 21$

11)  $56 < 65$

12)  $98 > 89$

13)  $71 > 17$

14)  $42 > 24$

15)  $74 < 75$

16)  $49 > 48$

17)  $77 > 75$

18)  $17 < 18$

19)  $18 < 19$

20)  $12 < 13$

Answers1.  $>$ 2.  $>$ 3.  $>$ 4.  $<$ 5.  $>$ 6.  $>$ 7.  $>$ 8.  $<$ 9.  $<$ 10.  $<$ 11.  $<$ 12.  $>$ 13.  $>$ 14.  $>$ 15.  $<$ 16.  $>$ 17.  $>$ 18.  $<$ 19.  $<$ 20.  $<$


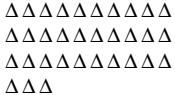


Use < , > , or = to compare the numbers.

Answers



1)                      78      33

  \_\_\_\_\_



2)                      97      30

  \_\_\_\_\_



3)                      51      42

  \_\_\_\_\_



4)                      25      36

  \_\_\_\_\_


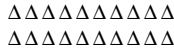
5)                      82      11

  \_\_\_\_\_



6)                      42      20

  \_\_\_\_\_



7)                      65      56

  \_\_\_\_\_



8)                      39      93

  \_\_\_\_\_



9)                      45      54

  \_\_\_\_\_

10)                      12      21

  \_\_\_\_\_

1. \_\_\_\_\_
2. \_\_\_\_\_
3. \_\_\_\_\_
4. \_\_\_\_\_
5. \_\_\_\_\_
6. \_\_\_\_\_
7. \_\_\_\_\_
8. \_\_\_\_\_
9. \_\_\_\_\_
10. \_\_\_\_\_



Use < , > , or = to compare the numbers.

Answers

1) 36 \_\_\_ 55

1. \_\_\_\_\_

2) 75 \_\_\_ 79

2. \_\_\_\_\_

3) 77 \_\_\_ 29

3. \_\_\_\_\_

4) 30 \_\_\_ 83

4. \_\_\_\_\_

5) 44 \_\_\_ 70

5. \_\_\_\_\_

6) 87 \_\_\_ 91

6. \_\_\_\_\_

7) 15 \_\_\_ 51

7. \_\_\_\_\_

8) 71 \_\_\_ 17

8. \_\_\_\_\_

9) 62 \_\_\_ 26

9. \_\_\_\_\_

10) 31 \_\_\_ 13

10. \_\_\_\_\_

11) 71 \_\_\_ 17

11. \_\_\_\_\_

12) 26 \_\_\_ 62

12. \_\_\_\_\_

13) 26 \_\_\_ 62

13. \_\_\_\_\_

14) 15 \_\_\_ 51

14. \_\_\_\_\_

15) 99 \_\_\_ 98

15. \_\_\_\_\_

16) 65 \_\_\_ 68

16. \_\_\_\_\_

17) 34 \_\_\_ 35

17. \_\_\_\_\_

18) 97 \_\_\_ 96

18. \_\_\_\_\_

19) 70 \_\_\_ 71

19. \_\_\_\_\_

20) 68 \_\_\_ 65

20. \_\_\_\_\_

Use  $<$ ,  $>$ , or  $=$  to compare the numbers.

1)  $36 < 55$

2)  $75 < 79$

3)  $77 > 29$

4)  $30 < 83$

5)  $44 < 70$

6)  $87 < 91$

7)  $15 < 51$

8)  $71 > 17$

9)  $62 > 26$

10)  $31 > 13$

11)  $71 > 17$

12)  $26 < 62$

13)  $26 < 62$

14)  $15 < 51$

15)  $99 > 98$

16)  $65 < 68$

17)  $34 < 35$

18)  $97 > 96$

19)  $70 < 71$

20)  $68 > 65$

Answers1.  $<$ 2.  $<$ 3.  $>$ 4.  $<$ 5.  $<$ 6.  $<$ 7.  $<$ 8.  $>$ 9.  $>$ 10.  $>$ 11.  $>$ 12.  $<$ 13.  $<$ 14.  $<$ 15.  $>$ 16.  $<$ 17.  $<$ 18.  $>$ 19.  $<$ 20.  $>$



Use  $<$ ,  $>$ , or  $=$  to compare the numbers.**Answers**

1) 21 \_\_\_ 26

2) 28 \_\_\_ 89

3) 62 \_\_\_ 37

4) 38 \_\_\_ 95

5) 59 \_\_\_ 61

6) 69 \_\_\_ 26

7) 85 \_\_\_ 58

8) 39 \_\_\_ 93

9) 58 \_\_\_ 85

10) 54 \_\_\_ 45

11) 12 \_\_\_ 21

12) 85 \_\_\_ 58

13) 48 \_\_\_ 84

14) 97 \_\_\_ 79

15) 38 \_\_\_ 35

16) 76 \_\_\_ 75

17) 59 \_\_\_ 61

18) 36 \_\_\_ 33

19) 99 \_\_\_ 98

20) 17 \_\_\_ 14

1. \_\_\_\_\_

2. \_\_\_\_\_

3. \_\_\_\_\_

4. \_\_\_\_\_

5. \_\_\_\_\_

6. \_\_\_\_\_

7. \_\_\_\_\_

8. \_\_\_\_\_

9. \_\_\_\_\_

10. \_\_\_\_\_

11. \_\_\_\_\_

12. \_\_\_\_\_

13. \_\_\_\_\_

14. \_\_\_\_\_

15. \_\_\_\_\_

16. \_\_\_\_\_

17. \_\_\_\_\_

18. \_\_\_\_\_

19. \_\_\_\_\_

20. \_\_\_\_\_

Use  $<$ ,  $>$ , or  $=$  to compare the numbers.

1)  $21 < 26$

2)  $28 < 89$

3)  $62 > 37$

4)  $38 < 95$

5)  $59 < 61$

6)  $69 > 26$

7)  $85 > 58$

8)  $39 < 93$

9)  $58 < 85$

10)  $54 > 45$

11)  $12 < 21$

12)  $85 > 58$

13)  $48 < 84$

14)  $97 > 79$

15)  $38 > 35$

16)  $76 > 75$

17)  $59 < 61$

18)  $36 > 33$

19)  $99 > 98$

20)  $17 > 14$

Answers

1.  $<$

2.  $<$

3.  $>$

4.  $<$

5.  $<$

6.  $>$

7.  $>$

8.  $<$

9.  $<$

10.  $>$

11.  $<$

12.  $>$

13.  $<$

14.  $>$

15.  $>$

16.  $>$

17.  $<$

18.  $>$

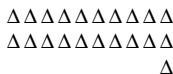

19.  $>$



20.  $>$











Use  $<$ ,  $>$ , or  $=$  to compare the numbers.



1)  $21$  \_\_\_\_\_  $26$   





2)  $28$  \_\_\_\_\_  $89$   





3)  $62$  \_\_\_\_\_  $37$   





4)  $38$  \_\_\_\_\_  $95$   





5)  $59$  \_\_\_\_\_  $61$   



6)  $69$  \_\_\_\_\_  $26$   



7)  $85$  \_\_\_\_\_  $58$   



8)  $39$  \_\_\_\_\_  $93$   



9)  $58$  \_\_\_\_\_  $85$   



10)  $54$  \_\_\_\_\_  $45$   



## Answers

1. \_\_\_\_\_
2. \_\_\_\_\_
3. \_\_\_\_\_
4. \_\_\_\_\_
5. \_\_\_\_\_
6. \_\_\_\_\_
7. \_\_\_\_\_
8. \_\_\_\_\_
9. \_\_\_\_\_
10. \_\_\_\_\_



Use  $<$ ,  $>$ , or  $=$  to compare the numbers.

Answers

- 1) 89 \_\_\_ 27
- 2) 62 \_\_\_ 44
- 3) 44 \_\_\_ 68
- 4) 20 \_\_\_ 76
- 5) 31 \_\_\_ 79
- 6) 12 \_\_\_ 37
- 7) 71 \_\_\_ 17
- 8) 45 \_\_\_ 54
- 9) 13 \_\_\_ 31
- 10) 84 \_\_\_ 48
- 11) 23 \_\_\_ 32
- 12) 73 \_\_\_ 37
- 13) 67 \_\_\_ 76
- 14) 34 \_\_\_ 43
- 15) 35 \_\_\_ 34
- 16) 44 \_\_\_ 42
- 17) 11 \_\_\_ 14
- 18) 73 \_\_\_ 72
- 19) 28 \_\_\_ 29
- 20) 54 \_\_\_ 55

1. \_\_\_\_\_
2. \_\_\_\_\_
3. \_\_\_\_\_
4. \_\_\_\_\_
5. \_\_\_\_\_
6. \_\_\_\_\_
7. \_\_\_\_\_
8. \_\_\_\_\_
9. \_\_\_\_\_
10. \_\_\_\_\_
11. \_\_\_\_\_
12. \_\_\_\_\_
13. \_\_\_\_\_
14. \_\_\_\_\_
15. \_\_\_\_\_
16. \_\_\_\_\_
17. \_\_\_\_\_
18. \_\_\_\_\_
19. \_\_\_\_\_
20. \_\_\_\_\_

Use  $<$ ,  $>$ , or  $=$  to compare the numbers.

- 1) 89 > 27
- 2) 62 > 44
- 3) 44 < 68
- 4) 20 < 76
- 5) 31 < 79
- 6) 12 < 37
- 7) 71 > 17
- 8) 45 < 54
- 9) 13 < 31
- 10) 84 > 48
- 11) 23 < 32
- 12) 73 > 37
- 13) 67 < 76
- 14) 34 < 43
- 15) 35 > 34
- 16) 44 > 42
- 17) 11 < 14
- 18) 73 > 72
- 19) 28 < 29
- 20) 54 < 55

Answers

1. >
2. >
3. <
4. <
5. <
6. <
7. >
8. <
9. <
10. >
11. <
12. >
13. <
14. <
15. >
16. >
17. <
18. >
19. <
20. <



Use  $<$ ,  $>$ , or  $=$  to compare the numbers.

1) 19 \_\_\_ 56

2) 14 \_\_\_ 56

3) 62 \_\_\_ 16

4) 63 \_\_\_ 87

5) 20 \_\_\_ 48

6) 80 \_\_\_ 81

7) 41 \_\_\_ 14

8) 46 \_\_\_ 64

9) 45 \_\_\_ 54

10) 87 \_\_\_ 78

11) 25 \_\_\_ 52

12) 49 \_\_\_ 94

13) 92 \_\_\_ 29

14) 67 \_\_\_ 76

15) 58 \_\_\_ 61

16) 49 \_\_\_ 51

17) 83 \_\_\_ 81

18) 26 \_\_\_ 24

19) 74 \_\_\_ 76

20) 68 \_\_\_ 67

**Answers**

1. \_\_\_\_\_

2. \_\_\_\_\_

3. \_\_\_\_\_

4. \_\_\_\_\_

5. \_\_\_\_\_

6. \_\_\_\_\_

7. \_\_\_\_\_

8. \_\_\_\_\_

9. \_\_\_\_\_

10. \_\_\_\_\_

11. \_\_\_\_\_

12. \_\_\_\_\_

13. \_\_\_\_\_

14. \_\_\_\_\_

15. \_\_\_\_\_

16. \_\_\_\_\_

17. \_\_\_\_\_

18. \_\_\_\_\_

19. \_\_\_\_\_

20. \_\_\_\_\_



Use  $<$ ,  $>$ , or  $=$  to compare the numbers.

- 1) 19 < 56
- 2) 14 < 56
- 3) 62 > 16
- 4) 63 < 87
- 5) 20 < 48
- 6) 80 < 81
- 7) 41 > 14
- 8) 46 < 64
- 9) 45 < 54
- 10) 87 > 78
- 11) 25 < 52
- 12) 49 < 94
- 13) 92 > 29
- 14) 67 < 76
- 15) 58 < 61
- 16) 49 < 51
- 17) 83 > 81
- 18) 26 > 24
- 19) 74 < 76
- 20) 68 > 67

Answers

- 1. <
- 2. <
- 3. >
- 4. <
- 5. <
- 6. <
- 7. >
- 8. <
- 9. <
- 10. >
- 11. <
- 12. <
- 13. >
- 14. <
- 15. <
- 16. <
- 17. >
- 18. >
- 19. <
- 20. >



Use < , > , or = to compare the numbers.

Answers

1)                      19      56

    △△△△△△△△△△      △△△△△△△△△△  
    △△△△△△△△△△      △△△△△△△△△△  
                                 △△△△△△△△△△  
                                 △△△△△△△△△△  
                                 △△△△△△△△△△  
                                 △△△△△△△△△△  
                                 △△△△△△△

2)                      14      56

    ????????????      ???????????  
                              ????      ???????????  
  ????????????  
  ????????????  
  ????????????  
  ????????????  
  ????????

1. \_\_\_\_\_
2. \_\_\_\_\_
3. \_\_\_\_\_
4. \_\_\_\_\_
5. \_\_\_\_\_
6. \_\_\_\_\_
7. \_\_\_\_\_
8. \_\_\_\_\_
9. \_\_\_\_\_
10. \_\_\_\_\_

3)                      62      16

    ????????????      ???????????  
    ????????????      ???????  
    ????????????  
    ????????????  
    ????????????  
    ????????????  
    ????????????  
                              ??

4)                      63      87

    ♥♥♥♥♥♥♥♥♥♥      ♥♥♥♥♥♥♥♥♥♥  
    ♥♥♥♥♥♥♥♥♥♥      ♥♥♥♥♥♥♥♥♥♥  
    ♥♥♥♥♥♥♥♥♥♥      ♥♥♥♥♥♥♥♥♥♥  
    ♥♥♥♥♥♥♥♥♥♥      ♥♥♥♥♥♥♥♥♥♥  
    ♥♥♥♥♥♥♥♥♥♥      ♥♥♥♥♥♥♥♥♥♥  
    ♥♥♥♥♥♥♥♥♥♥      ♥♥♥♥♥♥♥♥♥♥  
                                 ♥♥♥      ♥♥♥♥♥♥♥♥♥♥  
                                                      ♥♥♥♥♥♥♥♥♥♥  
                                                      ♥♥♥♥♥♥♥♥♥♥  
                                                      ♥♥♥♥♥♥♥♥♥♥

5)                      20      48

    ■ ■ ■ ■ ■ ■ ■ ■ ■ ■      ■ ■ ■ ■ ■ ■ ■ ■ ■ ■  
    ■ ■ ■ ■ ■ ■ ■ ■ ■ ■      ■ ■ ■ ■ ■ ■ ■ ■ ■ ■  
                                      ■ ■ ■ ■ ■ ■ ■ ■ ■ ■  
                                      ■ ■ ■ ■ ■ ■ ■ ■ ■ ■

6)                      80      81

    △△△△△△△△△△      △△△△△△△△△△  
    △△△△△△△△△△      △△△△△△△△△△  
    △△△△△△△△△△      △△△△△△△△△△  
    △△△△△△△△△△      △△△△△△△△△△  
    △△△△△△△△△△      △△△△△△△△△△  
    △△△△△△△△△△      △△△△△△△△△△  
    △△△△△△△△△△      △△△△△△△△△△  
    △△△△△△△△△△      △△△△△△△△△△  
                                      △

7)                      41      14

    ◆◆◆◆◆◆◆◆◆◆      ◆◆◆◆◆◆◆◆◆◆  
    ◆◆◆◆◆◆◆◆◆◆      ◆◆◆◆  
    ◆◆◆◆◆◆◆◆◆◆  
    ◆◆◆◆◆◆◆◆◆◆  
                                 ◆

8)                      46      64

    ????????????      ???????????  
    ????????????      ???????????  
    ????????????      ???????????  
    ????????????      ???????????  
                              ??????      ???????????  
  ????????????  
  ?????

9)                      45      54

    ♥♥♥♥♥♥♥♥♥♥      ♥♥♥♥♥♥♥♥♥♥  
    ♥♥♥♥♥♥♥♥♥♥      ♥♥♥♥♥♥♥♥♥♥  
    ♥♥♥♥♥♥♥♥♥♥      ♥♥♥♥♥♥♥♥♥♥  
    ♥♥♥♥♥♥♥♥♥♥      ♥♥♥♥♥♥♥♥♥♥  
                                 ♥♥♥♥♥      ♥♥♥♥♥♥♥♥♥♥  
                                                      ♥♥♥♥♥

10)                      87      78

    ●●●●●●●●●●      ●●●●●●●●●●  
    ●●●●●●●●●●      ●●●●●●●●●●  
    ●●●●●●●●●●      ●●●●●●●●●●  
    ●●●●●●●●●●      ●●●●●●●●●●  
    ●●●●●●●●●●      ●●●●●●●●●●  
    ●●●●●●●●●●      ●●●●●●●●●●  
    ●●●●●●●●●●      ●●●●●●●●●●  
    ●●●●●●●●●●      ●●●●●●●●●●  
                                 ●●●●●●●●

Use  $<$ ,  $>$ , or  $=$  to compare the numbers.Answers

1)  $16 \underline{\quad} 87$

2)  $17 \underline{\quad} 70$

3)  $73 \underline{\quad} 92$

4)  $64 \underline{\quad} 97$

5)  $91 \underline{\quad} 94$

6)  $94 \underline{\quad} 87$

7)  $96 \underline{\quad} 69$

8)  $39 \underline{\quad} 93$

9)  $25 \underline{\quad} 52$

10)  $96 \underline{\quad} 69$

11)  $35 \underline{\quad} 53$

12)  $34 \underline{\quad} 43$

13)  $45 \underline{\quad} 54$

14)  $13 \underline{\quad} 31$

15)  $53 \underline{\quad} 51$

16)  $93 \underline{\quad} 91$

17)  $67 \underline{\quad} 66$

18)  $41 \underline{\quad} 39$

19)  $58 \underline{\quad} 60$

20)  $46 \underline{\quad} 49$

1. \_\_\_\_\_

2. \_\_\_\_\_

3. \_\_\_\_\_

4. \_\_\_\_\_

5. \_\_\_\_\_

6. \_\_\_\_\_

7. \_\_\_\_\_

8. \_\_\_\_\_

9. \_\_\_\_\_

10. \_\_\_\_\_

11. \_\_\_\_\_

12. \_\_\_\_\_

13. \_\_\_\_\_

14. \_\_\_\_\_

15. \_\_\_\_\_

16. \_\_\_\_\_

17. \_\_\_\_\_

18. \_\_\_\_\_

19. \_\_\_\_\_

20. \_\_\_\_\_



Use  $<$ ,  $>$ , or  $=$  to compare the numbers.

- 1) 16 < 87
- 2) 17 < 70
- 3) 73 < 92
- 4) 64 < 97
- 5) 91 < 94
- 6) 94 > 87
- 7) 96 > 69
- 8) 39 < 93
- 9) 25 < 52
- 10) 96 > 69
- 11) 35 < 53
- 12) 34 < 43
- 13) 45 < 54
- 14) 13 < 31
- 15) 53 > 51
- 16) 93 > 91
- 17) 67 > 66
- 18) 41 > 39
- 19) 58 < 60
- 20) 46 < 49

Answers

1. <
2. <
3. <
4. <
5. <
6. >
7. >
8. <
9. <
10. >
11. <
12. <
13. <
14. <
15. >
16. >
17. >
18. >
19. <
20. <





Use  $<$ ,  $>$ , or  $=$  to compare the numbers.

Answers

- 1) 70 \_\_\_ 51
- 2) 18 \_\_\_ 96
- 3) 49 \_\_\_ 91
- 4) 82 \_\_\_ 93
- 5) 44 \_\_\_ 76
- 6) 80 \_\_\_ 71
- 7) 27 \_\_\_ 72
- 8) 78 \_\_\_ 87
- 9) 28 \_\_\_ 82
- 10) 89 \_\_\_ 98
- 11) 53 \_\_\_ 35
- 12) 63 \_\_\_ 36
- 13) 24 \_\_\_ 42
- 14) 71 \_\_\_ 17
- 15) 80 \_\_\_ 78
- 16) 92 \_\_\_ 89
- 17) 60 \_\_\_ 57
- 18) 29 \_\_\_ 31
- 19) 96 \_\_\_ 98
- 20) 57 \_\_\_ 55

- 1. \_\_\_\_\_
- 2. \_\_\_\_\_
- 3. \_\_\_\_\_
- 4. \_\_\_\_\_
- 5. \_\_\_\_\_
- 6. \_\_\_\_\_
- 7. \_\_\_\_\_
- 8. \_\_\_\_\_
- 9. \_\_\_\_\_
- 10. \_\_\_\_\_
- 11. \_\_\_\_\_
- 12. \_\_\_\_\_
- 13. \_\_\_\_\_
- 14. \_\_\_\_\_
- 15. \_\_\_\_\_
- 16. \_\_\_\_\_
- 17. \_\_\_\_\_
- 18. \_\_\_\_\_
- 19. \_\_\_\_\_
- 20. \_\_\_\_\_

Use  $<$ ,  $>$ , or  $=$  to compare the numbers.

1)  $70 > 51$

2)  $18 < 96$

3)  $49 < 91$

4)  $82 < 93$

5)  $44 < 76$

6)  $80 > 71$

7)  $27 < 72$

8)  $78 < 87$

9)  $28 < 82$

10)  $89 < 98$

11)  $53 > 35$

12)  $63 > 36$

13)  $24 < 42$

14)  $71 > 17$

15)  $80 > 78$

16)  $92 > 89$

17)  $60 > 57$

18)  $29 < 31$

19)  $96 < 98$

20)  $57 > 55$

Answers

1.  $>$

2.  $<$

3.  $<$

4.  $<$

5.  $<$

6.  $>$

7.  $<$

8.  $<$

9.  $<$

10.  $<$

11.  $>$

12.  $>$

13.  $<$

14.  $>$

15.  $>$

16.  $>$

17.  $>$

18.  $<$

19.  $<$

20.  $>$



Use  $<$ ,  $>$ , or  $=$  to compare the numbers.

1) 28 \_\_\_ 16

2) 37 \_\_\_ 62

3) 11 \_\_\_ 61

4) 55 \_\_\_ 37

5) 85 \_\_\_ 50

6) 91 \_\_\_ 84

7) 39 \_\_\_ 93

8) 17 \_\_\_ 71

9) 78 \_\_\_ 87

10) 37 \_\_\_ 73

11) 68 \_\_\_ 86

12) 16 \_\_\_ 61

13) 29 \_\_\_ 92

14) 48 \_\_\_ 84

15) 49 \_\_\_ 48

16) 43 \_\_\_ 45

17) 67 \_\_\_ 69

18) 20 \_\_\_ 17

19) 21 \_\_\_ 19

20) 13 \_\_\_ 11

**Answers**

1. \_\_\_\_\_

2. \_\_\_\_\_

3. \_\_\_\_\_

4. \_\_\_\_\_

5. \_\_\_\_\_

6. \_\_\_\_\_

7. \_\_\_\_\_

8. \_\_\_\_\_

9. \_\_\_\_\_

10. \_\_\_\_\_

11. \_\_\_\_\_

12. \_\_\_\_\_

13. \_\_\_\_\_

14. \_\_\_\_\_

15. \_\_\_\_\_

16. \_\_\_\_\_

17. \_\_\_\_\_

18. \_\_\_\_\_

19. \_\_\_\_\_

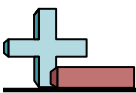
20. \_\_\_\_\_

Use  $<$ ,  $>$ , or  $=$  to compare the numbers.

- 1) 28  $>$  16
- 2) 37  $<$  62
- 3) 11  $<$  61
- 4) 55  $>$  37
- 5) 85  $>$  50
- 6) 91  $>$  84
- 7) 39  $<$  93
- 8) 17  $<$  71
- 9) 78  $<$  87
- 10) 37  $<$  73
- 11) 68  $<$  86
- 12) 16  $<$  61
- 13) 29  $<$  92
- 14) 48  $<$  84
- 15) 49  $>$  48
- 16) 43  $<$  45
- 17) 67  $<$  69
- 18) 20  $>$  17
- 19) 21  $>$  19
- 20) 13  $>$  11

Answers

1.  $>$
2.  $<$
3.  $<$
4.  $>$
5.  $>$
6.  $>$
7.  $<$
8.  $<$
9.  $<$
10.  $<$
11.  $<$
12.  $<$
13.  $<$
14.  $<$
15.  $>$
16.  $<$
17.  $<$
18.  $>$
19.  $>$
20.  $>$



Use  $<$ ,  $>$ , or  $=$  to compare the numbers.

1)                    28      16      \_\_\_\_\_

△△△△△△△△△△	△△△△△△△△△△
△△△△△△△△△△	△△△△△△
△△△△△△△△	

2)                    37      62      \_\_\_\_\_

??????????	??????????
??????????	??????????
??????????	??????????
????????	??????????
	??????????
	??????????
	??????????
	??

3)                    11      61      \_\_\_\_\_

??????????	??????????
?	??????????
	??????????
	??????????
	??????????
	??????????
	??

4)                    55      37      \_\_\_\_\_

♥♥♥♥♥♥♥♥♥♥	♥♥♥♥♥♥♥♥♥♥
♥♥♥♥♥♥♥♥♥♥	♥♥♥♥♥♥♥♥♥♥
♥♥♥♥♥♥♥♥♥♥	♥♥♥♥♥♥♥♥♥♥
♥♥♥♥♥♥♥♥♥♥	♥♥♥♥♥♥♥♥
♥♥♥♥♥♥♥♥♥♥	
♥♥♥♥♥	

5)                    85      50      \_\_\_\_\_

■ ■ ■ ■ ■ ■ ■ ■ ■ ■	■ ■ ■ ■ ■ ■ ■ ■ ■ ■
■ ■ ■ ■ ■ ■ ■ ■ ■ ■	■ ■ ■ ■ ■ ■ ■ ■ ■ ■
■ ■ ■ ■ ■ ■ ■ ■ ■ ■	■ ■ ■ ■ ■ ■ ■ ■ ■ ■
■ ■ ■ ■ ■ ■ ■ ■ ■ ■	■ ■ ■ ■ ■ ■ ■ ■ ■ ■
■ ■ ■ ■ ■ ■ ■ ■ ■ ■	■ ■ ■ ■ ■ ■ ■ ■ ■ ■
■ ■ ■ ■ ■ ■ ■ ■ ■ ■	■ ■ ■ ■ ■ ■ ■ ■ ■ ■
■ ■ ■ ■ ■ ■ ■ ■ ■ ■	■ ■ ■ ■ ■ ■ ■ ■ ■ ■
■ ■ ■ ■ ■	

6)                    91      84      \_\_\_\_\_

△△△△△△△△△△	△△△△△△△△△△
△△△△△△△△△△	△△△△△△△△△△
△△△△△△△△△△	△△△△△△△△△△
△△△△△△△△△△	△△△△△△△△△△
△△△△△△△△△△	△△△△△△△△△△
△△△△△△△△△△	△△△△△△△△△△
△△△△△△△△△△	△△△△△△△△△△
△△△△△△△△△△	△△△△△△△△△△
△△△△△△△△△△	△△△△△△△△△△
△△△△△△△△△△	△△△△
△	

7)                    39      93      \_\_\_\_\_

◆◆◆◆◆◆◆◆◆◆	◆◆◆◆◆◆◆◆◆◆
◆◆◆◆◆◆◆◆◆◆	◆◆◆◆◆◆◆◆◆◆
◆◆◆◆◆◆◆◆◆◆	◆◆◆◆◆◆◆◆◆◆
◆◆◆◆◆◆◆◆◆◆	◆◆◆◆◆◆◆◆◆◆
	◆◆◆◆◆◆◆◆◆◆
	◆◆◆◆◆◆◆◆◆◆
	◆◆◆◆◆◆◆◆◆◆
	◆◆◆◆◆◆◆◆◆◆
	◆◆◆◆◆◆◆◆◆◆
	◆◆◆◆◆◆◆◆◆◆
	◆◆◆◆

8)                    17      71      \_\_\_\_\_

??????????	??????????
????????	??????????
	??????????
	??????????
	??????????
	??????????
	??????????
	??????????
	??

9)                    78      87      \_\_\_\_\_

♥♥♥♥♥♥♥♥♥♥	♥♥♥♥♥♥♥♥♥♥
♥♥♥♥♥♥♥♥♥♥	♥♥♥♥♥♥♥♥♥♥
♥♥♥♥♥♥♥♥♥♥	♥♥♥♥♥♥♥♥♥♥
♥♥♥♥♥♥♥♥♥♥	♥♥♥♥♥♥♥♥♥♥
♥♥♥♥♥♥♥♥♥♥	♥♥♥♥♥♥♥♥♥♥
♥♥♥♥♥♥♥♥♥♥	♥♥♥♥♥♥♥♥♥♥
♥♥♥♥♥♥♥♥♥♥	♥♥♥♥♥♥♥♥♥♥
♥♥♥♥♥♥♥♥♥♥	♥♥♥♥♥♥♥♥♥♥
♥♥♥♥♥♥♥♥	♥♥♥♥♥♥♥♥♥♥
	♥♥♥♥♥♥♥♥

10)                    37      73      \_\_\_\_\_

●●●●●●●●●●	●●●●●●●●●●
●●●●●●●●●●	●●●●●●●●●●
●●●●●●●●●●	●●●●●●●●●●
●●●●●●●●	●●●●●●●●●●
	●●●●●●●●●●
	●●●●●●●●●●
	●●●●●●●●●●
	●●●●●●●●●●
	●●●●●●●●●●
	●●●●

- Answers**
1. \_\_\_\_\_
  2. \_\_\_\_\_
  3. \_\_\_\_\_
  4. \_\_\_\_\_
  5. \_\_\_\_\_
  6. \_\_\_\_\_
  7. \_\_\_\_\_
  8. \_\_\_\_\_
  9. \_\_\_\_\_
  10. \_\_\_\_\_



Use  $<$ ,  $>$ , or  $=$  to compare the numbers.

1) 54 \_\_\_ 40

2) 86 \_\_\_ 81

3) 55 \_\_\_ 58

4) 80 \_\_\_ 38

5) 36 \_\_\_ 62

6) 26 \_\_\_ 55

7) 98 \_\_\_ 89

8) 19 \_\_\_ 91

9) 58 \_\_\_ 85

10) 25 \_\_\_ 52

11) 94 \_\_\_ 49

12) 78 \_\_\_ 87

13) 49 \_\_\_ 94

14) 38 \_\_\_ 83

15) 39 \_\_\_ 42

16) 37 \_\_\_ 36

17) 36 \_\_\_ 37

18) 85 \_\_\_ 87

19) 49 \_\_\_ 51

20) 25 \_\_\_ 26

**Answers**

1. \_\_\_\_\_

2. \_\_\_\_\_

3. \_\_\_\_\_

4. \_\_\_\_\_

5. \_\_\_\_\_

6. \_\_\_\_\_

7. \_\_\_\_\_

8. \_\_\_\_\_

9. \_\_\_\_\_

10. \_\_\_\_\_

11. \_\_\_\_\_

12. \_\_\_\_\_

13. \_\_\_\_\_

14. \_\_\_\_\_

15. \_\_\_\_\_

16. \_\_\_\_\_

17. \_\_\_\_\_

18. \_\_\_\_\_

19. \_\_\_\_\_

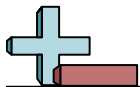
20. \_\_\_\_\_

Use  $<$ ,  $>$ , or  $=$  to compare the numbers.

- 1) 54 > 40
- 2) 86 > 81
- 3) 55 < 58
- 4) 80 > 38
- 5) 36 < 62
- 6) 26 < 55
- 7) 98 > 89
- 8) 19 < 91
- 9) 58 < 85
- 10) 25 < 52
- 11) 94 > 49
- 12) 78 < 87
- 13) 49 < 94
- 14) 38 < 83
- 15) 39 < 42
- 16) 37 > 36
- 17) 36 < 37
- 18) 85 < 87
- 19) 49 < 51
- 20) 25 < 26

Answers

1. >
2. >
3. <
4. >
5. <
6. <
7. >
8. <
9. <
10. <
11. >
12. <
13. <
14. <
15. <
16. >
17. <
18. <
19. <
20. <



Use < , > , or = to compare the numbers.

**Answers**

1)                  54    40    \_\_\_\_\_

$\Delta\Delta\Delta\Delta\Delta\Delta\Delta\Delta\Delta$      $\Delta\Delta\Delta\Delta\Delta\Delta\Delta\Delta\Delta$   
 $\Delta\Delta\Delta\Delta\Delta\Delta\Delta\Delta\Delta$      $\Delta\Delta\Delta\Delta\Delta\Delta\Delta\Delta\Delta$   
 $\Delta\Delta\Delta\Delta\Delta\Delta\Delta\Delta\Delta$      $\Delta\Delta\Delta\Delta\Delta\Delta\Delta\Delta\Delta$   
 $\Delta\Delta\Delta\Delta\Delta\Delta\Delta\Delta\Delta$      $\Delta\Delta\Delta\Delta\Delta\Delta\Delta\Delta\Delta$   
 $\Delta\Delta\Delta\Delta\Delta\Delta\Delta\Delta\Delta$      $\Delta\Delta\Delta\Delta\Delta\Delta\Delta\Delta\Delta$   
                                   $\Delta\Delta\Delta\Delta$

2)                  86    81    \_\_\_\_\_

   ??????????    ??????????  
 ??????????    ??????????  
 ??????????    ??????????  
 ??????????    ??????????  
 ??????????    ??????????  
 ??????????    ??????????  
 ??????????    ??????????  
 ??????????    ??????????  
                           $???????$      $?$

3)                  55    58    \_\_\_\_\_

   ??????????    ??????????  
 ??????????    ??????????  
 ??????????    ??????????  
 ??????????    ??????????  
 ??????????    ??????????  
                           $?????$      $????????$

4)                  80    38    \_\_\_\_\_

   ♥♥♥♥♥♥♥♥♥♥    ♥♥♥♥♥♥♥♥♥♥  
 ♥♥♥♥♥♥♥♥♥♥    ♥♥♥♥♥♥♥♥♥♥  
 ♥♥♥♥♥♥♥♥♥♥    ♥♥♥♥♥♥♥♥♥♥  
 ♥♥♥♥♥♥♥♥♥♥    ♥♥♥♥♥♥♥♥♥♥  
 ♥♥♥♥♥♥♥♥♥♥    ♥♥♥♥♥♥♥♥  
 ♥♥♥♥♥♥♥♥♥♥    ♥♥♥♥♥♥♥♥  
 ♥♥♥♥♥♥♥♥♥♥    ♥♥♥♥♥♥♥♥  
 ♥♥♥♥♥♥♥♥♥♥    ♥♥♥♥♥♥♥♥  
 ♥♥♥♥♥♥♥♥♥♥    ♥♥♥♥♥♥♥♥

5)                  36    62    \_\_\_\_\_

   ■■■■■■■■■■■■    ■■■■■■■■■■■■  
 ■■■■■■■■■■■■    ■■■■■■■■■■■■  
 ■■■■■■■■■■■■    ■■■■■■■■■■■■  
                          ■■■■■■■■■

6)                  26    55    \_\_\_\_\_

$\Delta\Delta\Delta\Delta\Delta\Delta\Delta\Delta\Delta$      $\Delta\Delta\Delta\Delta\Delta\Delta\Delta\Delta\Delta$   
 $\Delta\Delta\Delta\Delta\Delta\Delta\Delta\Delta\Delta$      $\Delta\Delta\Delta\Delta\Delta\Delta\Delta\Delta\Delta$   
                           $\Delta\Delta\Delta\Delta\Delta\Delta$      $\Delta\Delta\Delta\Delta\Delta\Delta\Delta\Delta\Delta$   
                                              $\Delta\Delta\Delta\Delta\Delta\Delta\Delta\Delta\Delta$   
                                              $\Delta\Delta\Delta\Delta\Delta\Delta\Delta\Delta\Delta$   
                                              $\Delta\Delta\Delta\Delta\Delta$

7)                  98    89    \_\_\_\_\_

   ♦♦♦♦♦♦♦♦♦♦    ♦♦♦♦♦♦♦♦♦♦  
 ♦♦♦♦♦♦♦♦♦♦    ♦♦♦♦♦♦♦♦♦♦  
 ♦♦♦♦♦♦♦♦♦♦    ♦♦♦♦♦♦♦♦♦♦  
 ♦♦♦♦♦♦♦♦♦♦    ♦♦♦♦♦♦♦♦♦♦  
 ♦♦♦♦♦♦♦♦♦♦    ♦♦♦♦♦♦♦♦♦♦  
 ♦♦♦♦♦♦♦♦♦♦    ♦♦♦♦♦♦♦♦♦♦  
 ♦♦♦♦♦♦♦♦♦♦    ♦♦♦♦♦♦♦♦♦♦  
 ♦♦♦♦♦♦♦♦♦♦    ♦♦♦♦♦♦♦♦♦♦  
 ♦♦♦♦♦♦♦♦♦♦    ♦♦♦♦♦♦♦♦♦♦

8)                  19    91    \_\_\_\_\_

   ??????????    ??????????  
 ??????????    ??????????  
                                             ??????????  
                                             ??????????  
                                             ??????????  
                                             ??????????  
                                             ??????????  
                                             ??????????  
                                             ??????????  
                                             ??????????  
                                             ?

9)                  58    85    \_\_\_\_\_

   ♥♥♥♥♥♥♥♥♥♥    ♥♥♥♥♥♥♥♥♥♥  
 ♥♥♥♥♥♥♥♥♥♥    ♥♥♥♥♥♥♥♥♥♥  
 ♥♥♥♥♥♥♥♥♥♥    ♥♥♥♥♥♥♥♥♥♥  
 ♥♥♥♥♥♥♥♥♥♥    ♥♥♥♥♥♥♥♥♥♥  
                          ♥♥♥♥♥♥♥♥♥♥    ♥♥♥♥♥♥♥♥♥♥  
                                             ♥♥♥♥♥♥♥♥♥♥  
                                             ♥♥♥♥♥♥♥♥♥♥  
                                             ♥♥♥♥♥♥♥♥♥♥  
                                             ♥♥♥♥♥♥♥

10)                  25    52    \_\_\_\_\_

   ●●●●●●●●●●    ●●●●●●●●●●  
 ●●●●●●●●●●    ●●●●●●●●●●  
                          ●●●●●    ●●●●●●●●●●  
                                             ●●●●●●●●●●  
                                             ●●●●●●●●●●  
                                             ●●●●●●●●●●  
                                             ●●●●●

1. \_\_\_\_\_

2. \_\_\_\_\_

3. \_\_\_\_\_

4. \_\_\_\_\_

5. \_\_\_\_\_

6. \_\_\_\_\_

7. \_\_\_\_\_

8. \_\_\_\_\_

9. \_\_\_\_\_

10. \_\_\_\_\_

Use  $<$ ,  $>$ , or  $=$  to compare the numbers.

1)  $32$  \_\_\_  $86$

2)  $63$  \_\_\_  $42$

3)  $15$  \_\_\_  $58$

4)  $29$  \_\_\_  $42$

5)  $92$  \_\_\_  $47$

6)  $21$  \_\_\_  $20$

7)  $38$  \_\_\_  $83$

8)  $92$  \_\_\_  $29$

9)  $96$  \_\_\_  $69$

10)  $17$  \_\_\_  $71$

11)  $23$  \_\_\_  $32$

12)  $72$  \_\_\_  $27$

13)  $16$  \_\_\_  $61$

14)  $59$  \_\_\_  $95$

15)  $90$  \_\_\_  $87$

16)  $29$  \_\_\_  $32$

17)  $31$  \_\_\_  $32$

18)  $35$  \_\_\_  $38$

19)  $99$  \_\_\_  $100$

20)  $53$  \_\_\_  $50$

**Answers**

1. \_\_\_\_\_

2. \_\_\_\_\_

3. \_\_\_\_\_

4. \_\_\_\_\_

5. \_\_\_\_\_

6. \_\_\_\_\_

7. \_\_\_\_\_

8. \_\_\_\_\_

9. \_\_\_\_\_

10. \_\_\_\_\_

11. \_\_\_\_\_

12. \_\_\_\_\_

13. \_\_\_\_\_

14. \_\_\_\_\_

15. \_\_\_\_\_

16. \_\_\_\_\_

17. \_\_\_\_\_

18. \_\_\_\_\_

19. \_\_\_\_\_

20. \_\_\_\_\_

Use  $<$ ,  $>$ , or  $=$  to compare the numbers.

1)  $32 < 86$

2)  $63 > 42$

3)  $15 < 58$

4)  $29 < 42$

5)  $92 > 47$

6)  $21 > 20$

7)  $38 < 83$

8)  $92 > 29$

9)  $96 > 69$

10)  $17 < 71$

11)  $23 < 32$

12)  $72 > 27$

13)  $16 < 61$

14)  $59 < 95$

15)  $90 > 87$

16)  $29 < 32$

17)  $31 < 32$

18)  $35 < 38$

19)  $99 < 100$

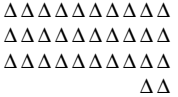

20)  $53 > 50$



Answers1.  $<$ 2.  $>$ 3.  $<$ 4.  $<$ 5.  $>$ 6.  $>$ 7.  $<$ 8.  $>$ 9.  $>$ 10.  $<$ 11.  $<$ 12.  $>$ 13.  $<$ 14.  $<$ 15.  $>$ 16.  $<$ 17.  $<$ 18.  $<$ 19.  $<$ 20.  $>$



Use  $<$ ,  $>$ , or  $=$  to compare the numbers.

## Answers

1)                    32     86  
    

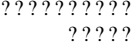

2)                    63     42  
    



1. \_\_\_\_\_

2. \_\_\_\_\_

3. \_\_\_\_\_

4. \_\_\_\_\_

3)                    15     58  
    



4)                    29     42  
    

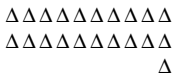
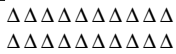
5. \_\_\_\_\_

6. \_\_\_\_\_

7. \_\_\_\_\_



8. \_\_\_\_\_



5)                    92     47  
    



6)                    21     20  
    

9. \_\_\_\_\_

10. \_\_\_\_\_

7)                    38     83  
    

8)                    92     29  
    

9)                    96     69  
    

10)                  17     71  
