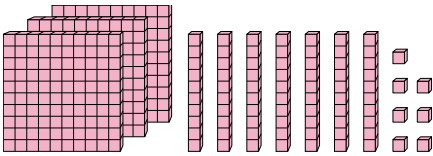




Find the value each set of blocks represents.

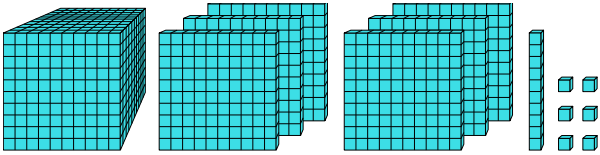
Answers

1)



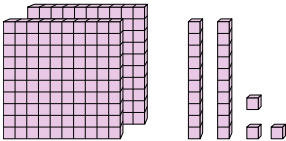
1. \_\_\_\_\_

2)



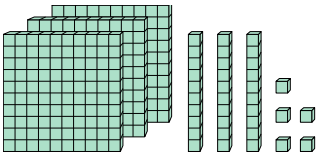
2. \_\_\_\_\_

3)



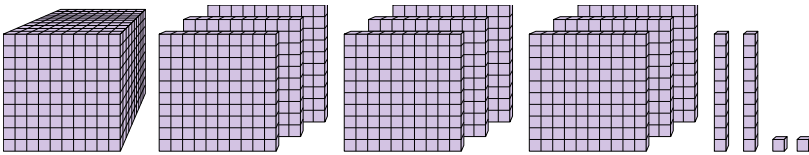
3. \_\_\_\_\_

4)



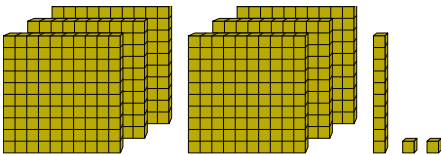
4. \_\_\_\_\_

5)



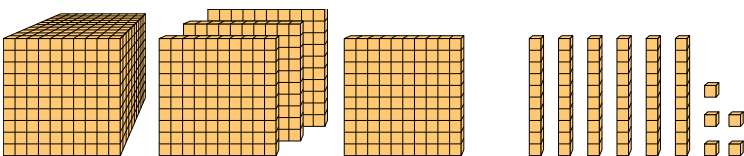
5. \_\_\_\_\_

6)



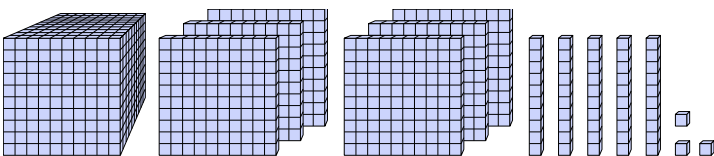
6. \_\_\_\_\_

7)



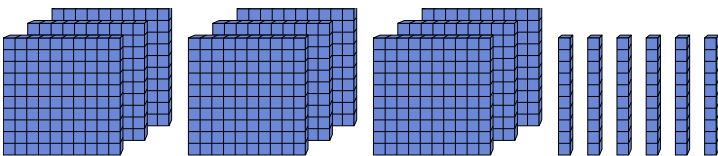
7. \_\_\_\_\_

8)



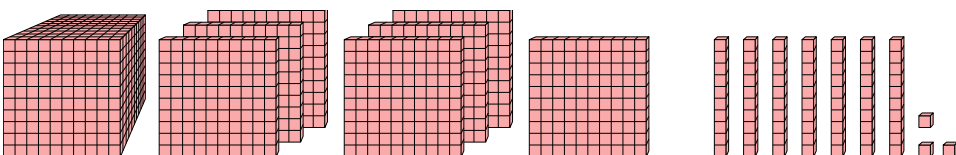
8. \_\_\_\_\_

9)



9. \_\_\_\_\_

10)



10. \_\_\_\_\_



Find the value each set of blocks represents.

- 1)
- 2)
- 3)
- 4)
- 5)
- 6)
- 7)
- 8)
- 9)
- 10)

Answers

- 1. 377
- 2. 1,616
- 3. 223
- 4. 335
- 5. 1,922
- 6. 612
- 7. 1,465
- 8. 1,653
- 9. 960
- 10. 1,773