
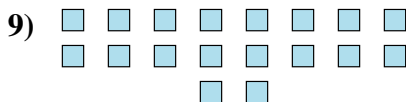




Determine if the number of shapes is even or odd.



**Answers**

1. \_\_\_\_\_

2. \_\_\_\_\_

3. \_\_\_\_\_

4. \_\_\_\_\_

5. \_\_\_\_\_

6. \_\_\_\_\_

7. \_\_\_\_\_

8. \_\_\_\_\_

9. \_\_\_\_\_

10. \_\_\_\_\_



Determine if the number of shapes is even or odd.



5



12



6



8



5



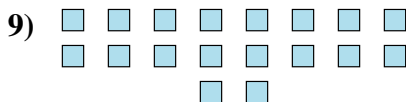
5




5



9



18



17

Answers

1. odd

2. even

3. even

4. even

5. odd

6. odd

7. odd

8. odd

9. even

10. odd