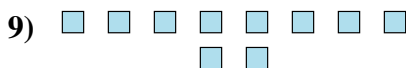
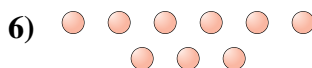
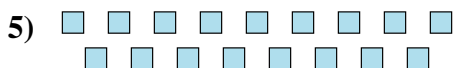





Determine if the number of shapes is even or odd.



Answers

1. _____

2. _____

3. _____

4. _____

5. _____

6. _____

7. _____

8. _____

9. _____


10. _____



Determine if the number of shapes is even or odd.



8



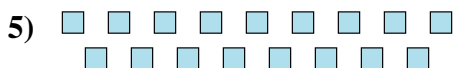
19



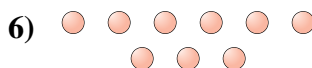
10



10



17



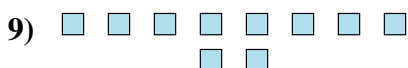
9



7



14



10



8

Answers

1. even

2. odd

3. even

4. even

5. odd

6. odd

7. odd

8. even

9. even

10. even