
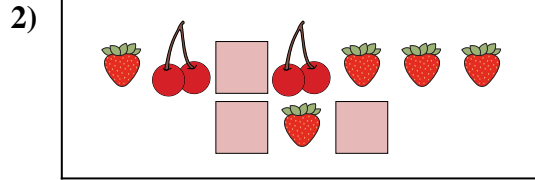





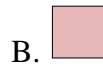
Compare the number of shapes.



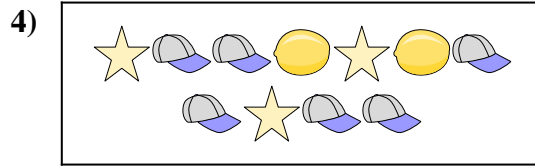
Are there less or less ?




Are there more or more ?




Are there more or more ?



Are there more or more ?



Are there less or less ?



Are there less or less ?



Answers

1. \_\_\_\_\_

2. \_\_\_\_\_

3. \_\_\_\_\_

4. \_\_\_\_\_

5. \_\_\_\_\_


6. \_\_\_\_\_




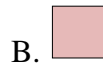
Compare the number of shapes.



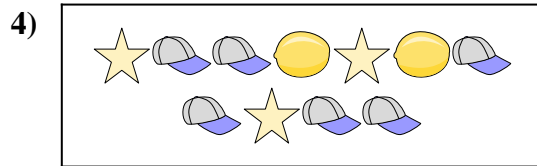
Are there less or less ?




Are there more or more ?




Are there more or more ?



Are there more or more ?



Are there less or less ?



Are there less or less ?



**Answers**

1. **A**

2. **A**

3. **A**

4. **B**

5. **B**

6. **A**