




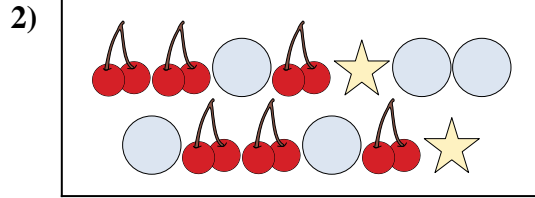
Compare the number of shapes.



Are there more or more ?

A.

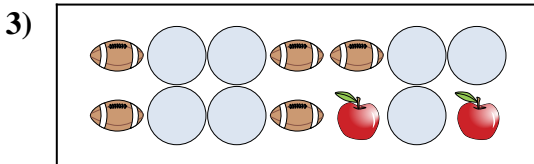
B.



Are there more or more ?

A.

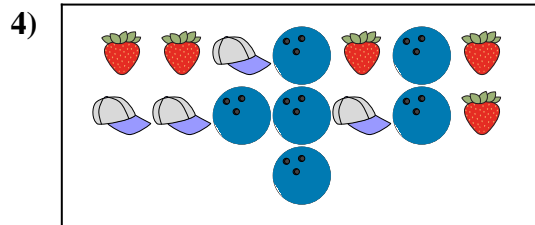
B.



Are there more or more ?

A.


B.



Are there more or more ?

A.


B.



Are there less or less ?

A.

B.



Are there less or less ?

A.

B.

**Answers**

1. \_\_\_\_\_

2. \_\_\_\_\_

3. \_\_\_\_\_


4. \_\_\_\_\_

5. \_\_\_\_\_

6. \_\_\_\_\_



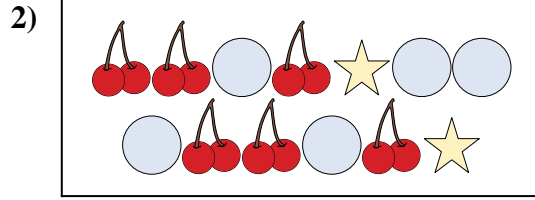
Compare the number of shapes.



Are there more or more ?

A.

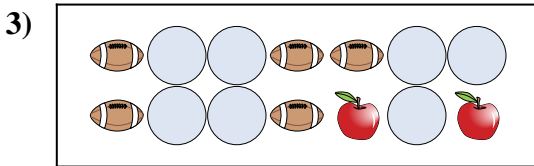
B.



Are there more or more ?

A.

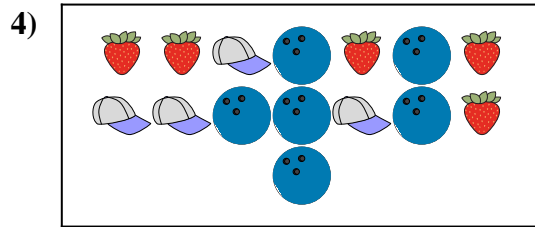
B.



Are there more or more ?

A.


B.



Are there more or more ?

A.


B.



Are there less or less ?

A.

B.



Are there less or less ?

A.

B.

**Answers**

1. **B**

2. **A**

3. **A**


4. **B**

5. **B**

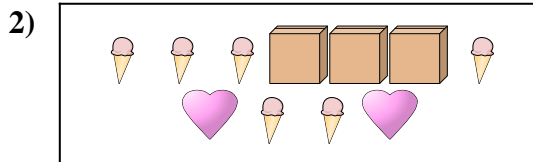
6. **B**




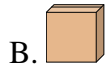
Compare the number of shapes.




Are there more or more ?



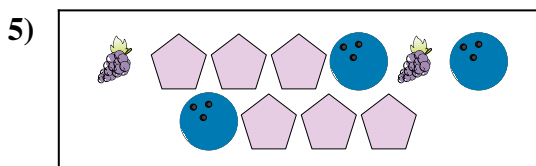
Are there more or more ?




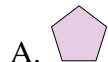
Are there less or less ?



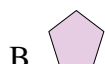
Are there less or less ?



Are there less or less ?



Are there less or less ?



**Answers**

1. \_\_\_\_\_

2. \_\_\_\_\_

3. \_\_\_\_\_


4. \_\_\_\_\_

5. \_\_\_\_\_

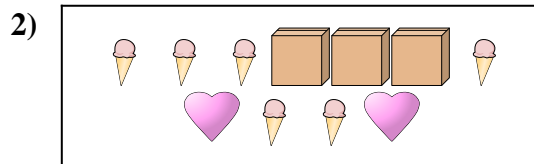
6. \_\_\_\_\_




Compare the number of shapes.




Are there more or more ?



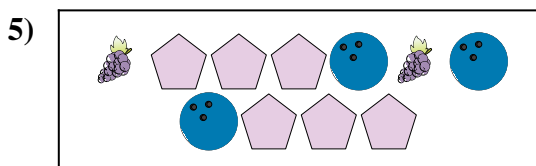
Are there more or more ?




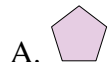
Are there less or less ?



Are there less or less ?



Are there less or less ?



Are there less or less ?



**Answers**

1. **B**

2. **B**

3. **A**


4. **A**

5. **B**

6. **B**




Compare the number of shapes.



Are there more or more ?

A.

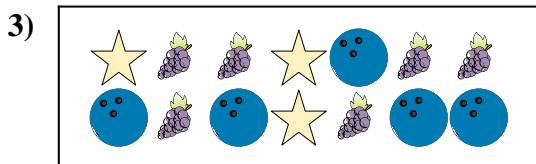
B.



Are there less or less ?

A.


B.



Are there less or less ?

A.


B.



Are there less or less ?

A.

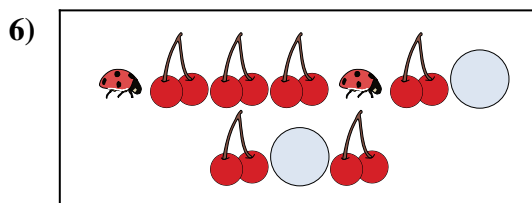
B.



Are there more or more ?

A.

B.



Are there less or less ?

A.

B.

**Answers**

1. \_\_\_\_\_

2. \_\_\_\_\_

3. \_\_\_\_\_


4. \_\_\_\_\_

5. \_\_\_\_\_

6. \_\_\_\_\_




Compare the number of shapes.



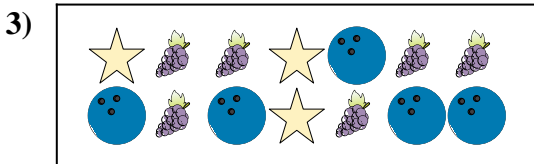
Are there more or more ?

- A.
- B.




Are there less or less ?

- A.
- B.




Are there less or less ?

- A.
- B.



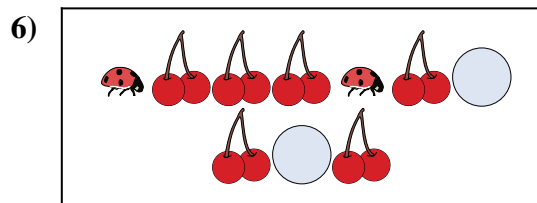
Are there less or less ?

- A.
- B.



Are there more or more ?

- A.
- B.



Are there less or less ?

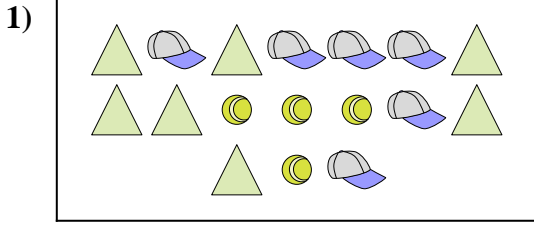
- A.
- B.

**Answers**

- 1.     **B**
- 2.     **B**
- 3.     **B**
- 4.     **B**
- 5.     **A**
- 6.     **B**




Compare the number of shapes.




Are there more or more ?

- A.
- B.



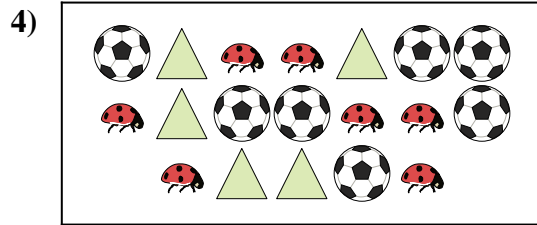
Are there less or less ?

- A.
- B.




Are there less or less ?

- A.
- B.




Are there less or less ?

- A.
- B.



Are there less or less ?

- A.
- B.



Are there less or less ?

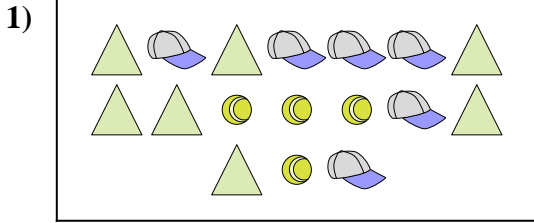
- A.
- B.

**Answers**

- 1. \_\_\_\_\_
- 2. \_\_\_\_\_
- 3. \_\_\_\_\_
- 4. \_\_\_\_\_
- 5. \_\_\_\_\_
- 6. \_\_\_\_\_




Compare the number of shapes.



Are there more or more ?

A.


B.



Are there less or less ?

A.

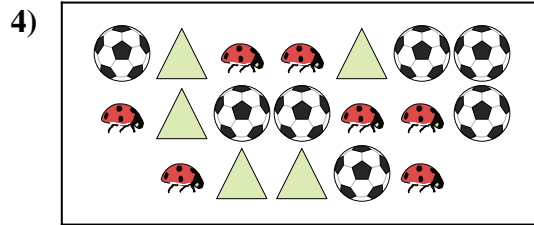
B.



Are there less or less ?

A.

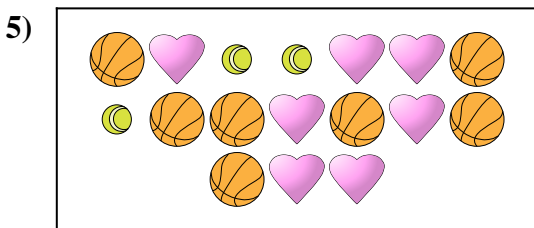
B.



Are there less or less ?

A.


B.



Are there less or less ?

A.

B.



Are there less or less ?

A.

B.

**Answers**

1.     **A**    

2.     **A**    

3.     **A**    

4.     **A**    


5.     **A**    

6.     **A**







Compare the number of shapes.




Are there more or more ?




Are there more or more ?



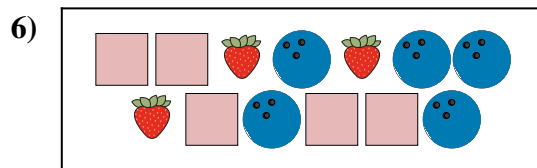
Are there less or less ?



Are there more or more ?



Are there less or less ?



Are there more or more ?

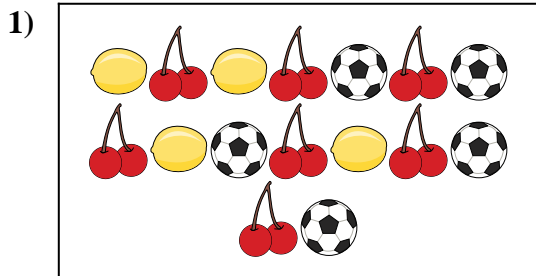


**Answers**

1. \_\_\_\_\_
2. \_\_\_\_\_
3. \_\_\_\_\_
4. \_\_\_\_\_
5. \_\_\_\_\_
6. \_\_\_\_\_




Compare the number of shapes.



Are there more or more ?

A.

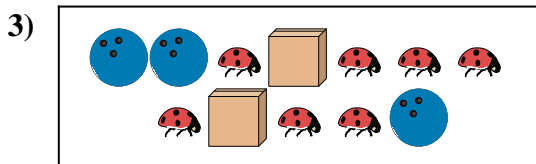
B.



Are there more or more ?

A.


B.



Are there less or less ?

A.


B.



Are there more or more ?

A.

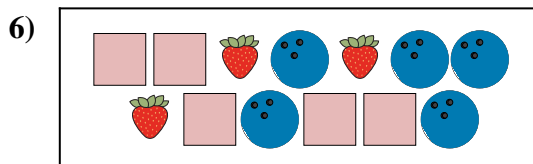
B.



Are there less or less ?

A.

B.



Are there more or more ?

A.

B.

**Answers**

1. **A**

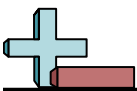
2. **B**

3. **B**


4. **B**

5. **A**


6. **B**




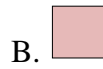
Compare the number of shapes.



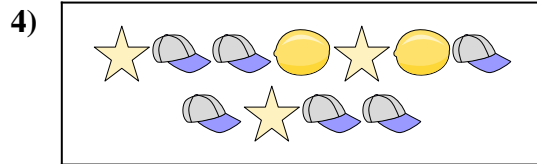
Are there less or less ?




Are there more or more ?




Are there more or more ?



Are there more or more ?



Are there less or less ?



Are there less or less ?



Answers

1. \_\_\_\_\_

2. \_\_\_\_\_

3. \_\_\_\_\_

4. \_\_\_\_\_

5. \_\_\_\_\_


6. \_\_\_\_\_




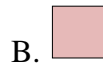
Compare the number of shapes.



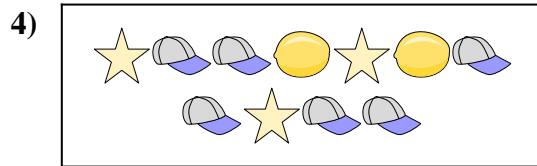
Are there less or less ?




Are there more or more ?




Are there more or more ?



Are there more or more ?



Are there less or less ?



Are there less or less ?



**Answers**

1. **A**

2. **A**

3. **A**

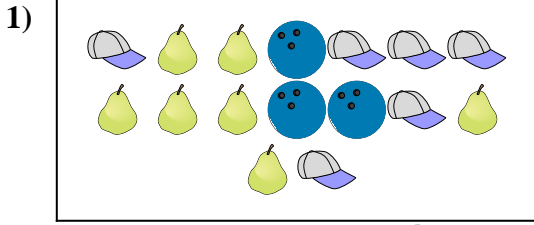
4. **B**

5. **B**

6. **A**




Compare the number of shapes.



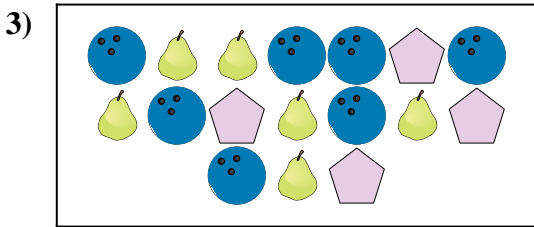
Are there less or less ?

- A.
- B.



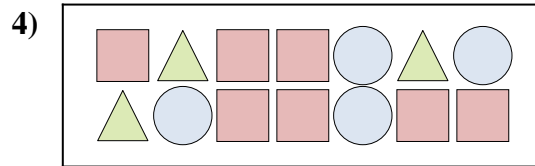
Are there less or less ?

- A.
- B.




Are there more or more ?

- A.
- B.




Are there more or more ?

- A.
- B.



Are there more or more ?

- A.
- B.



Are there less or less ?

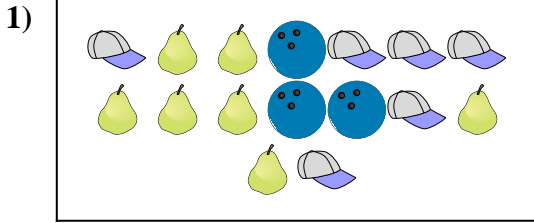
- A.
- B.

**Answers**


1. \_\_\_\_\_
2. \_\_\_\_\_
3. \_\_\_\_\_
4. \_\_\_\_\_
5. \_\_\_\_\_
6. \_\_\_\_\_



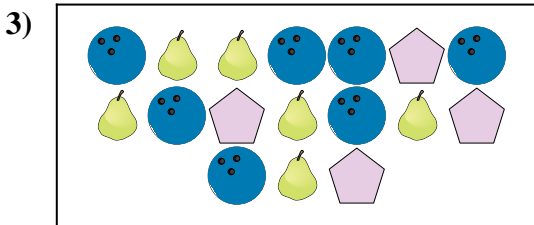
Compare the number of shapes.



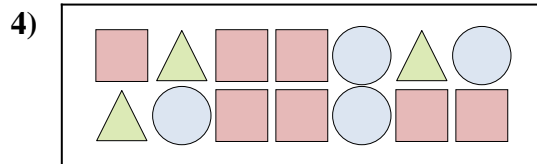
Are there less or less ?




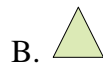
Are there less or less ?




Are there more or more ?



Are there more or more ?



Are there more or more ?



Are there less or less ?



**Answers**

1. **B**

2. **A**

3. **A**

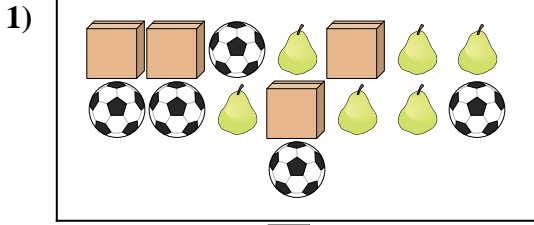
4. **A**

5. **A**

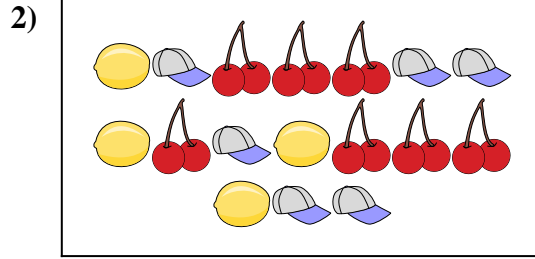
6. **A**



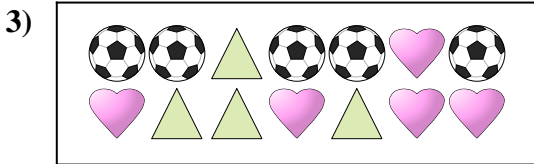
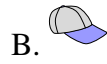
Compare the number of shapes.




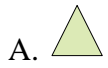
Are there more or more ?




Are there less or less ?



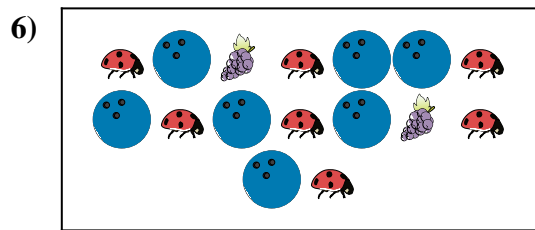
Are there less or less ?



Are there less or less ?



Are there more or more ?



Are there more or more ?



**Answers**

1. \_\_\_\_\_

2. \_\_\_\_\_

3. \_\_\_\_\_

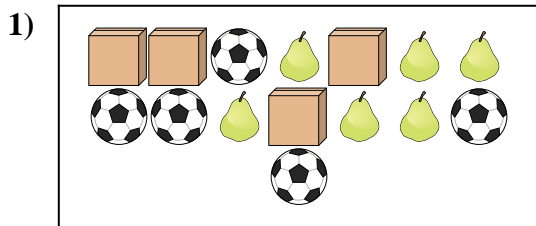
4. \_\_\_\_\_

5. \_\_\_\_\_

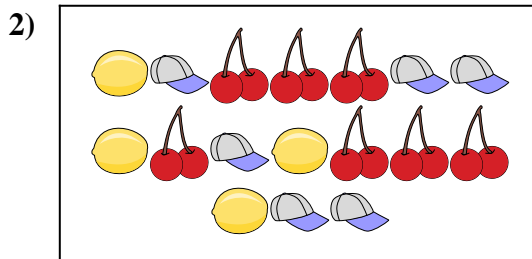
6. \_\_\_\_\_



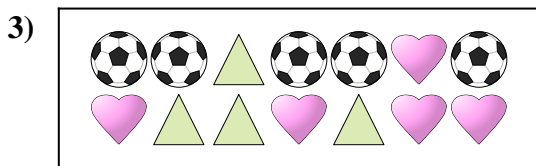
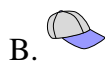
Compare the number of shapes.




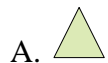
Are there more or more ?




Are there less or less ?



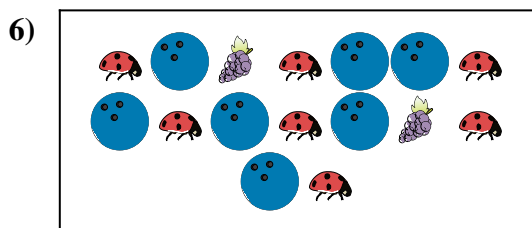
Are there less or less ?



Are there less or less ?



Are there more or more ?



Are there more or more ?



**Answers**

1. **B**

2. **A**

3. **A**

4. **A**


5. **B**

6. **B**






Compare the number of shapes.



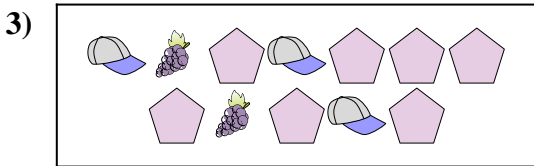
Are there more or more ?

- A.
- B.



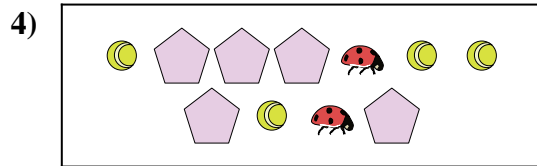
Are there less or less ?

- A.
- B.



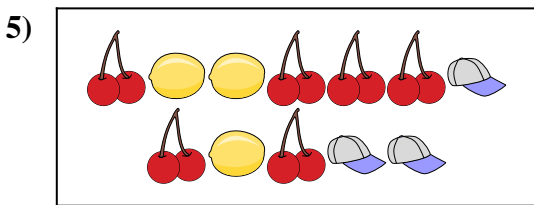
Are there less or less ?

- A.
- B.



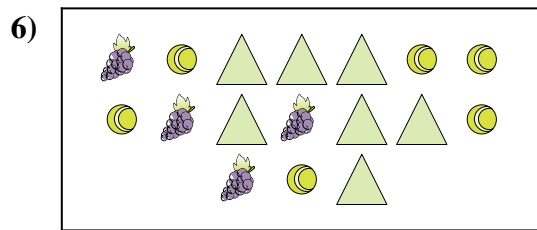
Are there more or more ?

- A.
- B.



Are there less or less ?

- A.
- B.



Are there more or more ?


- A.
- B.

**Answers**

1. \_\_\_\_\_
2. \_\_\_\_\_
3. \_\_\_\_\_
4. \_\_\_\_\_
5. \_\_\_\_\_
6. \_\_\_\_\_




Compare the number of shapes.



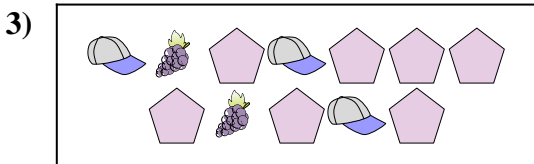
Are there more or more ?

- A.
- B.



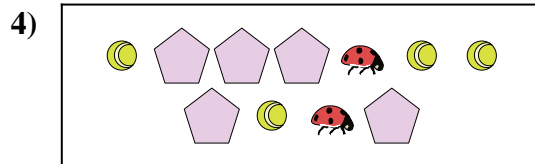
Are there less or less ?

- A.
- B.



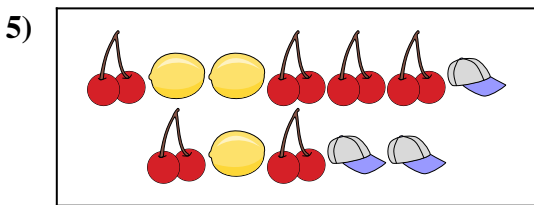
Are there less or less ?

- A.
- B.



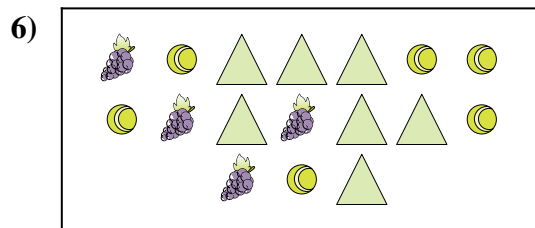
Are there more or more ?

- A.
- B.



Are there less or less ?

- A.
- B.



Are there more or more ?

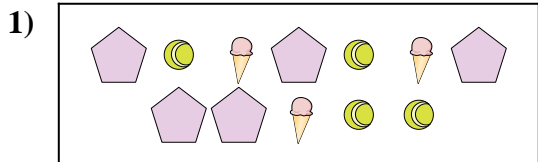
- A.
- B.

**Answers**

- 1.   **A**
- 2.   **A**
- 3.   **B**
- 4.   **B**
- 5.   **B**
- 6.   **B**




Compare the number of shapes.



Are there less or less ?

A.

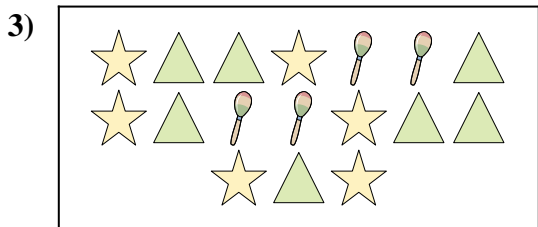
B.



Are there more or more ?

A.


B.



Are there less or less ?

A.


B.



Are there less or less ?

A.

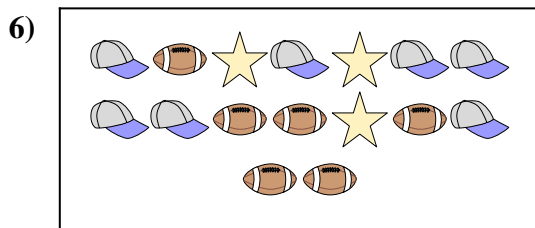
B.



Are there less or less ?

A.

B.



Are there less or less ?

A.

B.

**Answers**

1. \_\_\_\_\_

2. \_\_\_\_\_

3. \_\_\_\_\_

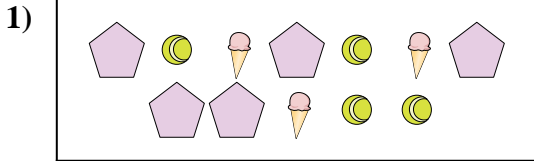
4. \_\_\_\_\_

5. \_\_\_\_\_

6. \_\_\_\_\_



Compare the number of shapes.



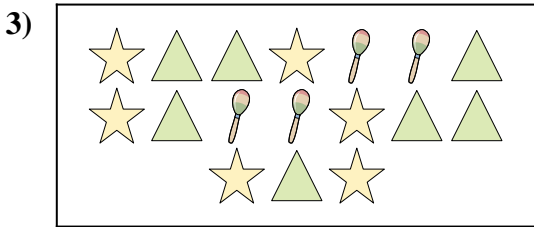
Are there less or less ?

- A.
- B.




Are there more or more ?

- A.
- B.




Are there less or less ?

- A.
- B.



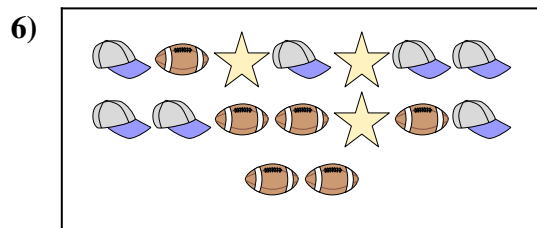
Are there less or less ?

- A.
- B.



Are there less or less ?

- A.
- B.



Are there less or less ?

- A.
- B.

**Answers**

- 1. **A**
- 2. **A**
- 3. **B**
- 4. **B**
- 5. **A**
- 6. **B**