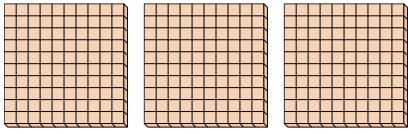




Use the groups to answer each question.

**Answers**

- 1) a. How many groups of 100 are there?
- b. How many small blocks are there total?

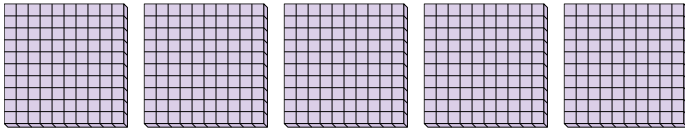


1. \_\_\_\_

2. \_\_\_\_

3. \_\_\_\_

- 2) a. How many groups of 100 are there?
- b. How many small blocks are there total?

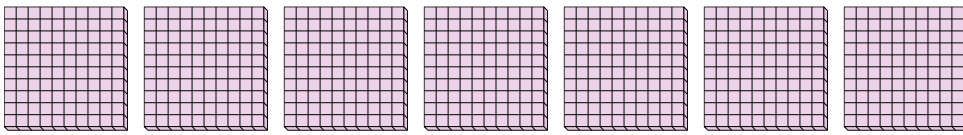


4. \_\_\_\_

5. \_\_\_\_

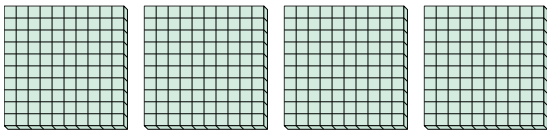
6. \_\_\_\_

- 3) a. How many groups of 100 are there?
- b. How many small blocks are there total?




7. \_\_\_\_


- 4) a. How many groups of 100 are there?
- b. How many small blocks are there total?



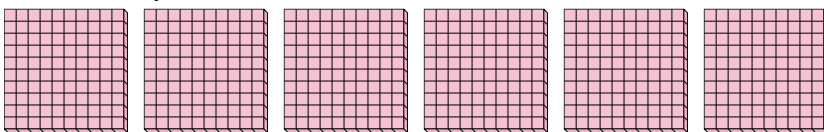
- 5) a. How many groups of 100 are there?
- b. How many small blocks are there total?



- 6) a. How many groups of 100 are there?
- b. How many small blocks are there total?



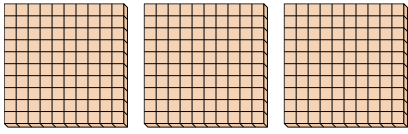
- 7) a. How many groups of 100 are there?
- b. How many small blocks are there total?



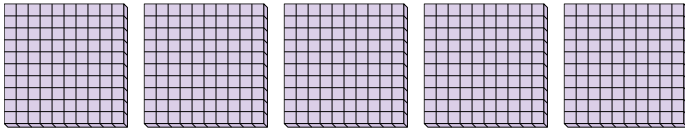


Use the groups to answer each question.

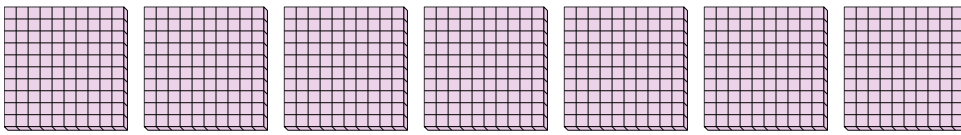
- 1) a. How many groups of 100 are there?  
b. How many small blocks are there total?



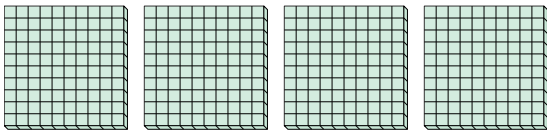
- 2) a. How many groups of 100 are there?  
b. How many small blocks are there total?




- 3) a. How many groups of 100 are there?  
b. How many small blocks are there total?




- 4) a. How many groups of 100 are there?  
b. How many small blocks are there total?



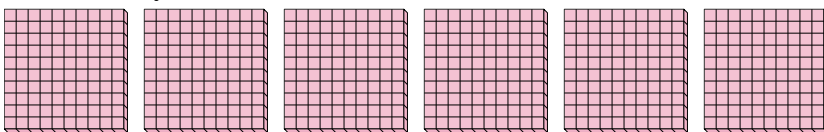
- 5) a. How many groups of 100 are there?  
b. How many small blocks are there total?



- 6) a. How many groups of 100 are there?  
b. How many small blocks are there total?



- 7) a. How many groups of 100 are there?  
b. How many small blocks are there total?



**Answers**

1. 3 300  
2. 5 500  
3. 7 700  
4. 4 400  
5. 9 900  
6. 2 200  
7. 6 600