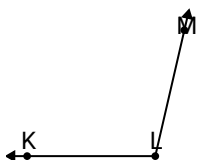




Solve each problem.

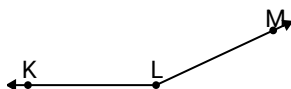
Answers

1)

Which choice best represents $\angle KLM$?

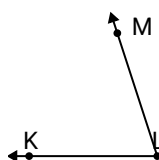
- A. 103°
- B. 55°
- C. 26°
- D. 170°

2)

Which choice best represents $\angle KLM$?

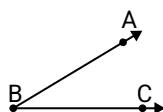
- A. 53°
- B. 23°
- C. 155°
- D. 120°

3)

Which choice best represents $\angle KLM$?

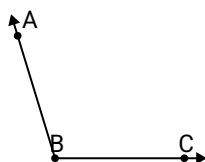
- A. 36°
- B. 72°
- C. 162°
- D. 124°

4)

Which choice best represents $\angle ABC$?

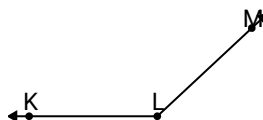
- A. 31°
- B. 136°
- C. 60°
- D. 176°

5)

Which choice best represents $\angle ABC$?

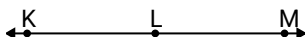
- A. 48°
- B. 24°
- C. 70°
- D. 107°

6)

Which choice best represents $\angle KLM$?

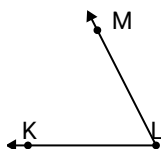
- A. 1°
- B. 23°
- C. 80°
- D. 137°

7)

Which choice best represents $\angle KLM$?

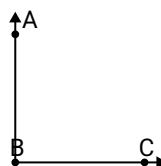
- A. 10°
- B. 49°
- C. 77°
- D. 180°

8)

Which choice best represents $\angle KLM$?

- A. 27°
- B. 6°
- C. 63°
- D. 98°

9)

Which choice best represents $\angle ABC$?

- A. 26°
- B. 47°
- C. 178°
- D. 90°

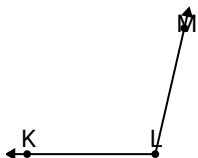
- 1. _____
- 2. _____
- 3. _____
- 4. _____
- 5. _____
- 6. _____
- 7. _____
- 8. _____
- 9. _____



Solve each problem.

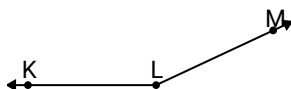
Answers

1)

Which choice best represents $\angle KLM$?

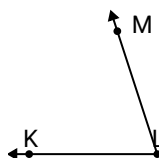
- A. 103°
- B. 55°
- C. 26°
- D. 170°

2)

Which choice best represents $\angle KLM$?

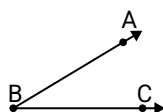
- A. 53°
- B. 23°
- C. 155°
- D. 120°

3)

Which choice best represents $\angle KLM$?

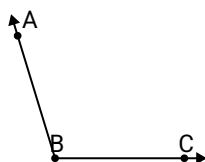
- A. 36°
- B. 72°
- C. 162°
- D. 124°

4)

Which choice best represents $\angle ABC$?

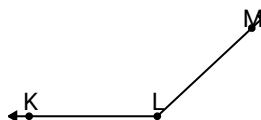
- A. 31°
- B. 136°
- C. 60°
- D. 176°

5)

Which choice best represents $\angle ABC$?

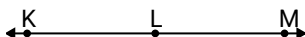
- A. 48°
- B. 24°
- C. 70°
- D. 107°

6)

Which choice best represents $\angle KLM$?

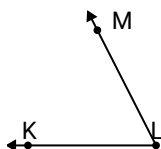
- A. 1°
- B. 23°
- C. 80°
- D. 137°

7)

Which choice best represents $\angle KLM$?

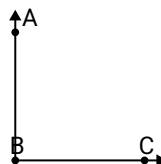
- A. 10°
- B. 49°
- C. 77°
- D. 180°

8)

Which choice best represents $\angle KLM$?

- A. 27°
- B. 6°
- C. 63°
- D. 98°

9)

Which choice best represents $\angle ABC$?

- A. 26°
- B. 47°
- C. 178°
- D. 90°

- 1. **A**
- 2. **C**
- 3. **B**
- 4. **A**
- 5. **D**
- 6. **D**
- 7. **D**
- 8. **C**
- 9. **D**