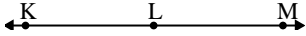




Solve each problem.

Answers

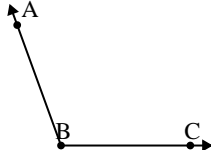
1)



Which choice best represents  $\angle KLM$ ?

- A.  $180^\circ$
- B.  $115^\circ$
- C.  $1^\circ$
- D.  $24^\circ$

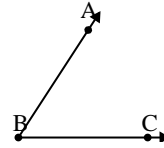
2)



Which choice best represents  $\angle ABC$ ?

- A.  $7^\circ$
- B.  $164^\circ$
- C.  $110^\circ$
- D.  $60^\circ$

3)



Which choice best represents  $\angle ABC$ ?

- A.  $162^\circ$
- B.  $99^\circ$
- C.  $57^\circ$
- D.  $3^\circ$

1. \_\_\_\_\_

2. \_\_\_\_\_

3. \_\_\_\_\_

4. \_\_\_\_\_

5. \_\_\_\_\_

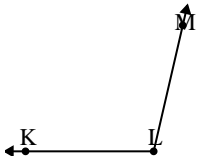
6. \_\_\_\_\_

7. \_\_\_\_\_

8. \_\_\_\_\_

9. \_\_\_\_\_

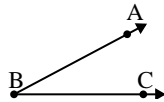
4)



Which choice best represents  $\angle KLM$ ?

- A.  $103^\circ$
- B.  $42^\circ$
- C.  $82^\circ$
- D.  $13^\circ$

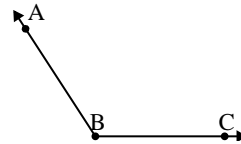
5)



Which choice best represents  $\angle ABC$ ?

- A.  $102^\circ$
- B.  $147^\circ$
- C.  $28^\circ$
- D.  $80^\circ$

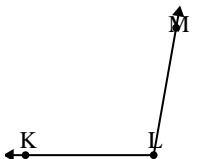
6)



Which choice best represents  $\angle ABC$ ?

- A.  $123^\circ$
- B.  $91^\circ$
- C.  $151^\circ$
- D.  $19^\circ$

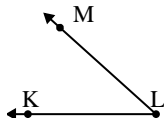
7)



Which choice best represents  $\angle KLM$ ?

- A.  $75^\circ$
- B.  $134^\circ$
- C.  $100^\circ$
- D.  $15^\circ$

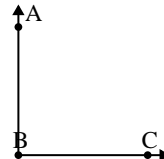
8)



Which choice best represents  $\angle KLM$ ?

- A.  $21^\circ$
- B.  $42^\circ$
- C.  $149^\circ$
- D.  $68^\circ$

9)



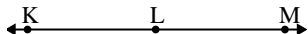
Which choice best represents  $\angle ABC$ ?

- A.  $29^\circ$
- B.  $90^\circ$
- C.  $163^\circ$
- D.  $133^\circ$



Solve each problem.

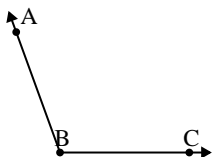
1)



Which choice best represents  $\angle KLM$ ?

- A.  $180^\circ$
- B.  $115^\circ$
- C.  $1^\circ$
- D.  $24^\circ$

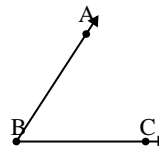
2)



Which choice best represents  $\angle ABC$ ?

- A.  $7^\circ$
- B.  $164^\circ$
- C.  $110^\circ$
- D.  $60^\circ$

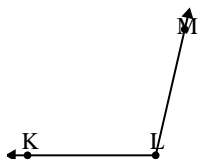
3)



Which choice best represents  $\angle ABC$ ?

- A.  $162^\circ$
- B.  $99^\circ$
- C.  $57^\circ$
- D.  $3^\circ$

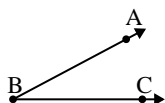
4)



Which choice best represents  $\angle KLM$ ?

- A.  $103^\circ$
- B.  $42^\circ$
- C.  $82^\circ$
- D.  $13^\circ$

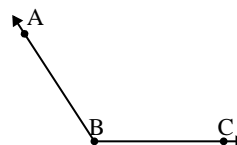
5)



Which choice best represents  $\angle ABC$ ?

- A.  $102^\circ$
- B.  $147^\circ$
- C.  $28^\circ$
- D.  $80^\circ$

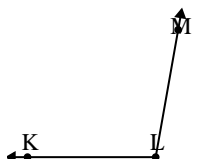
6)



Which choice best represents  $\angle ABC$ ?

- A.  $123^\circ$
- B.  $91^\circ$
- C.  $151^\circ$
- D.  $19^\circ$

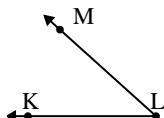
7)



Which choice best represents  $\angle KLM$ ?

- A.  $75^\circ$
- B.  $134^\circ$
- C.  $100^\circ$
- D.  $15^\circ$

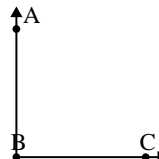
8)



Which choice best represents  $\angle KLM$ ?

- A.  $21^\circ$
- B.  $42^\circ$
- C.  $149^\circ$
- D.  $68^\circ$

9)



Which choice best represents  $\angle ABC$ ?

- A.  $29^\circ$
- B.  $90^\circ$
- C.  $163^\circ$
- D.  $133^\circ$

Answers

- 1.     **A**
- 2.     **C**
- 3.     **C**
- 4.     **A**
- 5.     **C**
- 6.     **A**
- 7.     **C**
- 8.     **B**
- 9.     **B**