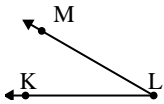




Solve each problem.

Answers

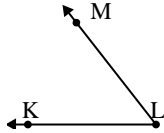
1)



Which choice best represents  $\angle KLM$ ?

- A.  $176^\circ$
- B.  $143^\circ$
- C.  $101^\circ$
- D.  $30^\circ$

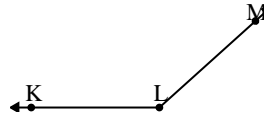
2)



Which choice best represents  $\angle KLM$ ?

- A.  $118^\circ$
- B.  $52^\circ$
- C.  $86^\circ$
- D.  $9^\circ$

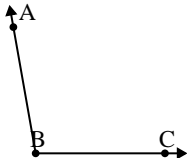
3)



Which choice best represents  $\angle KLM$ ?

- A.  $5^\circ$
- B.  $116^\circ$
- C.  $138^\circ$
- D.  $79^\circ$

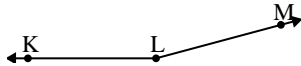
4)



Which choice best represents  $\angle ABC$ ?

- A.  $19^\circ$
- B.  $150^\circ$
- C.  $124^\circ$
- D.  $100^\circ$

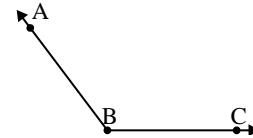
5)



Which choice best represents  $\angle KLM$ ?

- A.  $114^\circ$
- B.  $165^\circ$
- C.  $0^\circ$
- D.  $66^\circ$

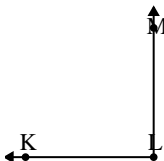
6)



Which choice best represents  $\angle ABC$ ?

- A.  $16^\circ$
- B.  $127^\circ$
- C.  $92^\circ$
- D.  $151^\circ$

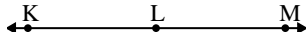
7)



Which choice best represents  $\angle KLM$ ?

- A.  $31^\circ$
- B.  $122^\circ$
- C.  $90^\circ$
- D.  $6^\circ$

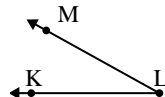
8)



Which choice best represents  $\angle KLM$ ?

- A.  $180^\circ$
- B.  $105^\circ$
- C.  $58^\circ$
- D.  $130^\circ$

9)



Which choice best represents  $\angle KLM$ ?

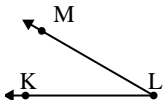
- A.  $116^\circ$
- B.  $178^\circ$
- C.  $140^\circ$
- D.  $29^\circ$

1. \_\_\_\_\_
2. \_\_\_\_\_
3. \_\_\_\_\_
4. \_\_\_\_\_
5. \_\_\_\_\_
6. \_\_\_\_\_
7. \_\_\_\_\_
8. \_\_\_\_\_
9. \_\_\_\_\_



Solve each problem.

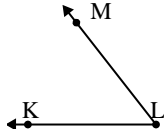
1)



Which choice best represents  $\angle KLM$ ?

- A.  $176^\circ$
- B.  $143^\circ$
- C.  $101^\circ$
- D.  $30^\circ$

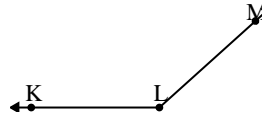
2)



Which choice best represents  $\angle KLM$ ?

- A.  $118^\circ$
- B.  $52^\circ$
- C.  $86^\circ$
- D.  $9^\circ$

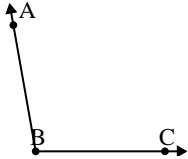
3)



Which choice best represents  $\angle KLM$ ?

- A.  $5^\circ$
- B.  $116^\circ$
- C.  $138^\circ$
- D.  $79^\circ$

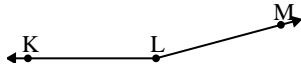
4)



Which choice best represents  $\angle ABC$ ?

- A.  $19^\circ$
- B.  $150^\circ$
- C.  $124^\circ$
- D.  $100^\circ$

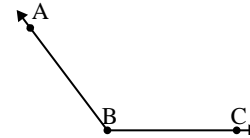
5)



Which choice best represents  $\angle KLM$ ?

- A.  $114^\circ$
- B.  $165^\circ$
- C.  $0^\circ$
- D.  $66^\circ$

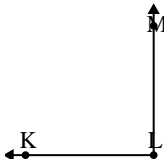
6)



Which choice best represents  $\angle ABC$ ?

- A.  $16^\circ$
- B.  $127^\circ$
- C.  $92^\circ$
- D.  $151^\circ$

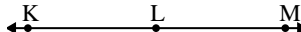
7)



Which choice best represents  $\angle KLM$ ?

- A.  $31^\circ$
- B.  $122^\circ$
- C.  $90^\circ$
- D.  $6^\circ$

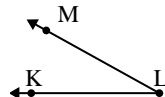
8)



Which choice best represents  $\angle KLM$ ?

- A.  $180^\circ$
- B.  $105^\circ$
- C.  $58^\circ$
- D.  $130^\circ$

9)



Which choice best represents  $\angle KLM$ ?

- A.  $116^\circ$
- B.  $178^\circ$
- C.  $140^\circ$
- D.  $29^\circ$

Answers

- 1. **D**
- 2. **B**
- 3. **C**
- 4. **D**
- 5. **B**
- 6. **B**
- 7. **C**
- 8. **A**
- 9. **D**