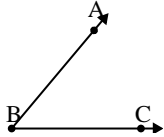




Solve each problem.

Answers

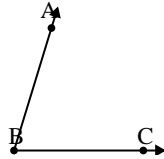
1)



Which choice best represents  $\angle ABC$ ?

- A.  $50^\circ$
- B.  $90^\circ$
- C.  $4^\circ$
- D.  $128^\circ$

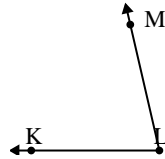
2)



Which choice best represents  $\angle ABC$ ?

- A.  $116^\circ$
- B.  $73^\circ$
- C.  $146^\circ$
- D.  $18^\circ$

3)



Which choice best represents  $\angle KLM$ ?

- A.  $167^\circ$
- B.  $29^\circ$
- C.  $77^\circ$
- D.  $111^\circ$

1. \_\_\_\_\_

2. \_\_\_\_\_

3. \_\_\_\_\_

4. \_\_\_\_\_

5. \_\_\_\_\_

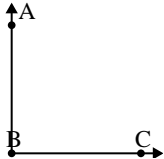
6. \_\_\_\_\_

7. \_\_\_\_\_

8. \_\_\_\_\_

9. \_\_\_\_\_

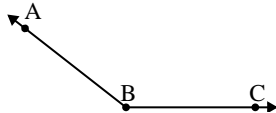
4)



Which choice best represents  $\angle ABC$ ?

- A.  $176^\circ$
- B.  $68^\circ$
- C.  $90^\circ$
- D.  $37^\circ$

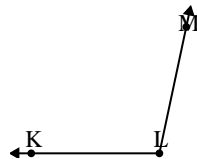
5)



Which choice best represents  $\angle ABC$ ?

- A.  $101^\circ$
- B.  $172^\circ$
- C.  $142^\circ$
- D.  $1^\circ$

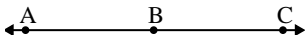
6)



Which choice best represents  $\angle KLM$ ?

- A.  $36^\circ$
- B.  $148^\circ$
- C.  $73^\circ$
- D.  $102^\circ$

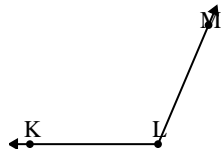
7)



Which choice best represents  $\angle ABC$ ?

- A.  $31^\circ$
- B.  $4^\circ$
- C.  $98^\circ$
- D.  $180^\circ$

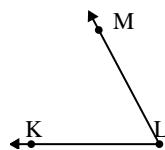
8)



Which choice best represents  $\angle KLM$ ?

- A.  $141^\circ$
- B.  $77^\circ$
- C.  $26^\circ$
- D.  $113^\circ$

9)

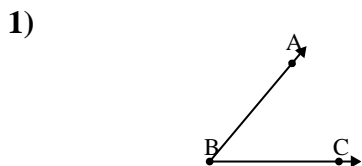


Which choice best represents  $\angle KLM$ ?

- A.  $176^\circ$
- B.  $62^\circ$
- C.  $41^\circ$
- D.  $129^\circ$

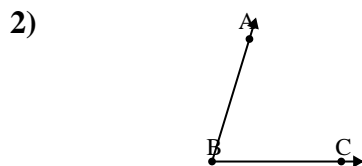


Solve each problem.



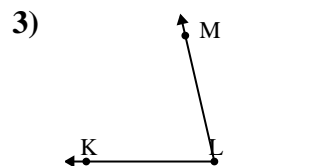
Which choice best represents  $\angle ABC$ ?

- A.  $50^\circ$
- B.  $90^\circ$
- C.  $4^\circ$
- D.  $128^\circ$



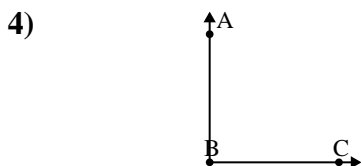
Which choice best represents  $\angle ABC$ ?

- A.  $116^\circ$
- B.  $73^\circ$
- C.  $146^\circ$
- D.  $18^\circ$



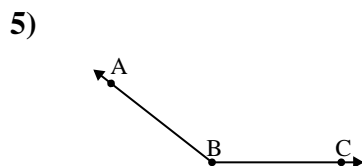
Which choice best represents  $\angle KLM$ ?

- A.  $167^\circ$
- B.  $29^\circ$
- C.  $77^\circ$
- D.  $111^\circ$



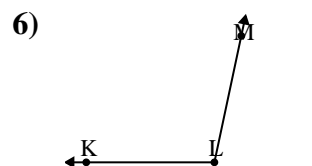
Which choice best represents  $\angle ABC$ ?

- A.  $176^\circ$
- B.  $68^\circ$
- C.  $90^\circ$
- D.  $37^\circ$



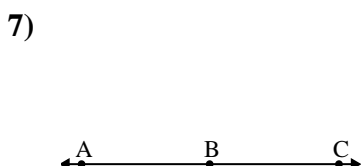
Which choice best represents  $\angle ABC$ ?

- A.  $101^\circ$
- B.  $172^\circ$
- C.  $142^\circ$
- D.  $1^\circ$



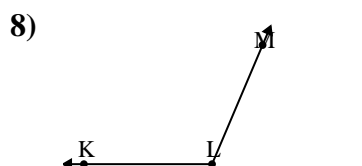
Which choice best represents  $\angle KLM$ ?

- A.  $36^\circ$
- B.  $148^\circ$
- C.  $73^\circ$
- D.  $102^\circ$



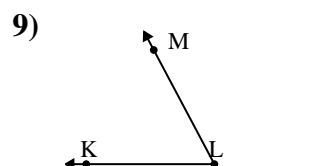
Which choice best represents  $\angle ABC$ ?

- A.  $31^\circ$
- B.  $4^\circ$
- C.  $98^\circ$
- D.  $180^\circ$



Which choice best represents  $\angle KLM$ ?

- A.  $141^\circ$
- B.  $77^\circ$
- C.  $26^\circ$
- D.  $113^\circ$



Which choice best represents  $\angle KLM$ ?

- A.  $176^\circ$
- B.  $62^\circ$
- C.  $41^\circ$
- D.  $129^\circ$

Answers

- 1.     **A**
- 2.     **B**
- 3.     **C**
- 4.     **C**
- 5.     **C**
- 6.     **D**
- 7.     **D**
- 8.     **D**
- 9.     **B**